






Risposte


[illegible]


1) 


2) 


3) 


[illegible]

5) 


6) 

7) 

8) 

9) 

[illegible]


11) 

Frazione _____
Decimale _____
Percentuale _____

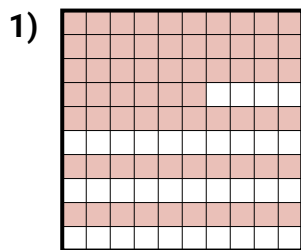
11. _____



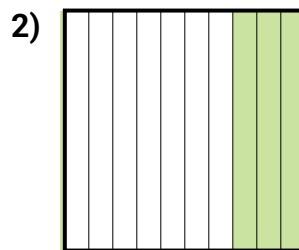
Determina il valore sotto forma di frazione, decimale e percentuale.



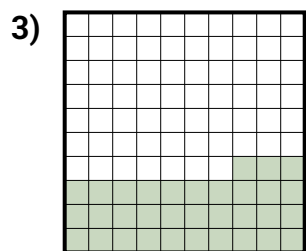
Frazione $\frac{3}{10}$
Decimale $0,3$
Percentuale 30



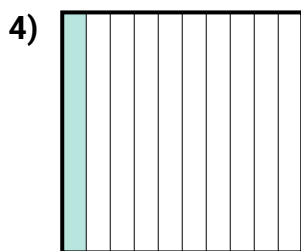
Frazione $\frac{66}{100}$
Decimale $0,66$
Percentuale 66



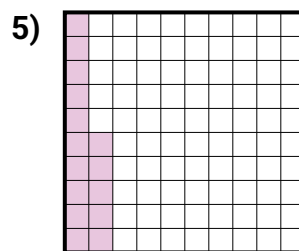
Frazione $\frac{6}{10}$
Decimale $0,6$
Percentuale 60



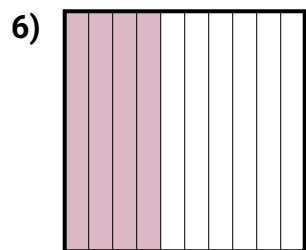
Frazione $\frac{33}{100}$
Decimale $0,33$
Percentuale 33



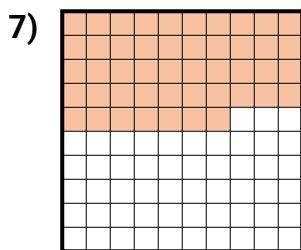
Frazione $\frac{1}{10}$
Decimale $0,1$
Percentuale 10



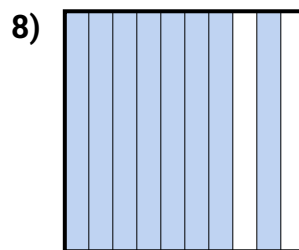
Frazione $\frac{15}{100}$
Decimale $0,15$
Percentuale 15



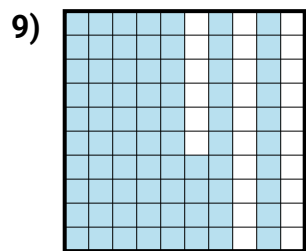
Frazione $\frac{7}{10}$
Decimale $0,7$
Percentuale 70




Frazione $\frac{47}{100}$
Decimale $0,47$
Percentuale 47



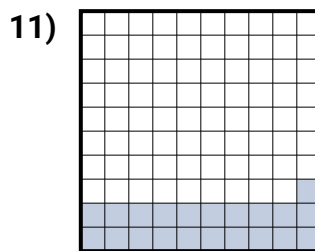
Frazione $\frac{8}{10}$
Decimale $0,8$
Percentuale 80



Frazione $\frac{74}{100}$
Decimale $0,74$
Percentuale 74



Frazione $\frac{4}{10}$
Decimale $0,4$
Percentuale 40



Frazione $\frac{21}{100}$
Decimale $0,21$
Percentuale 21

Risposte

Es. $\frac{3}{10}$ **0,3** **30%**
1. $\frac{66}{100}$ **0,66** **66%**
2. $\frac{6}{10}$ **0,6** **60%**
3. $\frac{33}{100}$ **0,33** **33%**
4. $\frac{1}{10}$ **0,1** **10%**
5. $\frac{15}{100}$ **0,15** **15%**
6. $\frac{7}{10}$ **0,7** **70%**
7. $\frac{47}{100}$ **0,47** **47%**
8. $\frac{8}{10}$ **0,8** **80%**
9. $\frac{74}{100}$ **0,74** **74%**
10. $\frac{4}{10}$ **0,4** **40%**
11. $\frac{21}{100}$ **0,21** **21%**