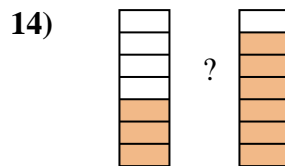
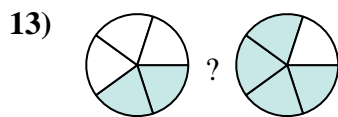
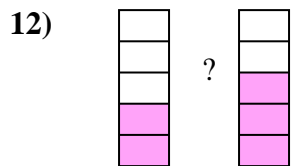
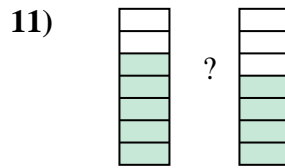
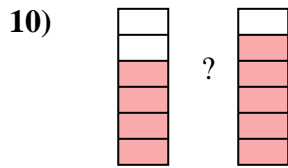
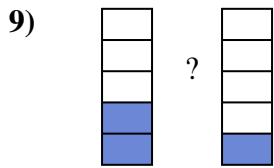
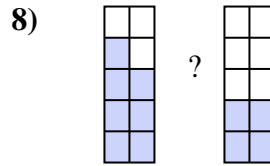
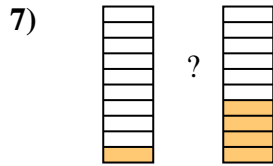
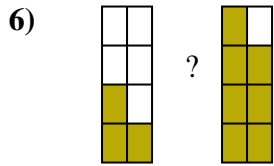
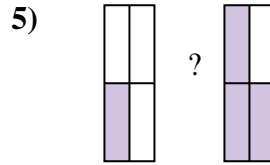
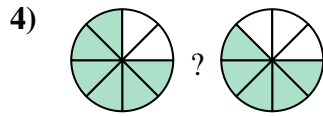
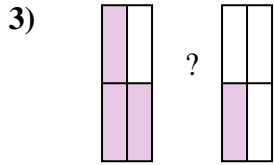
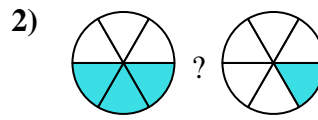
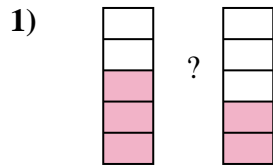
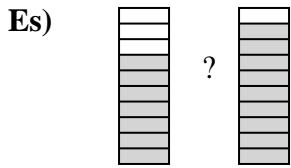




Confronta le dimensioni delle frazioni usando  $>$ ,  $<$  o  $=$ .



**Risposte**

Es.  $\frac{7}{10} < \frac{9}{10}$

1. \_\_\_\_\_

2. \_\_\_\_\_

3. \_\_\_\_\_

4. \_\_\_\_\_

5. \_\_\_\_\_

6. \_\_\_\_\_

7. \_\_\_\_\_

8. \_\_\_\_\_

9. \_\_\_\_\_

10. \_\_\_\_\_

11. \_\_\_\_\_

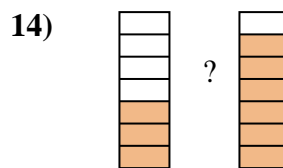
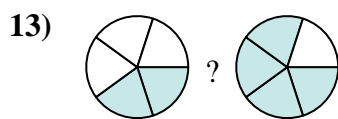
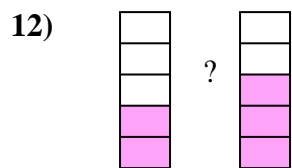
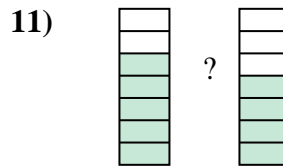
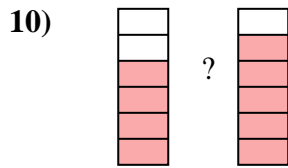
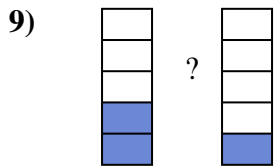
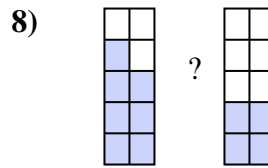
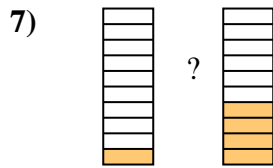
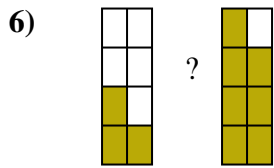
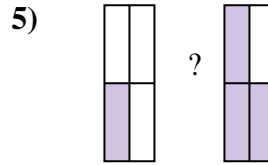
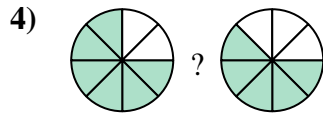
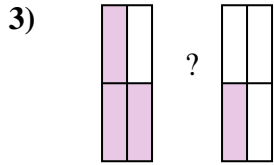
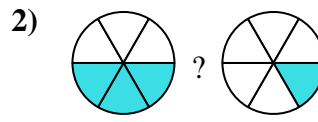
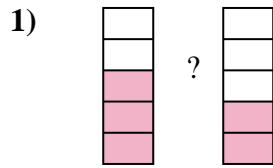
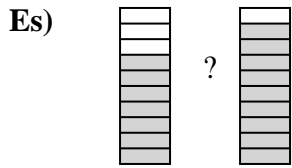
12. \_\_\_\_\_

13. \_\_\_\_\_

14. \_\_\_\_\_



Confronta le dimensioni delle frazioni usando  $>$ ,  $<$  o  $=$ .

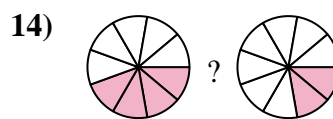
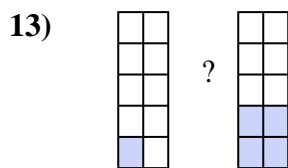
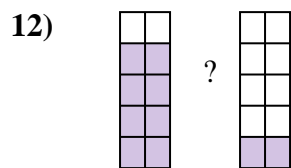
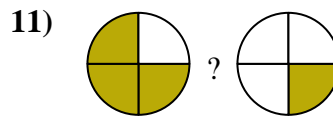
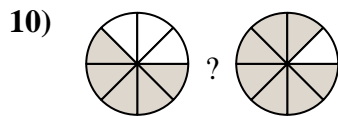
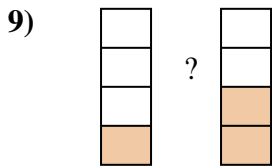
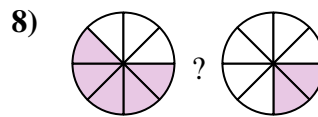
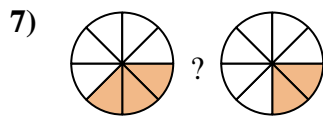
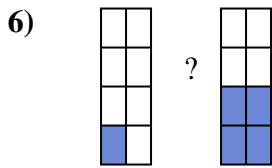
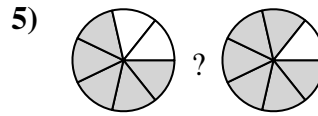
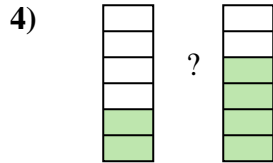
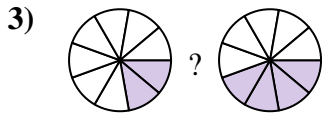
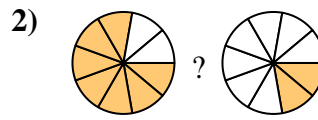
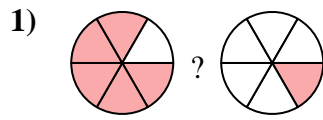
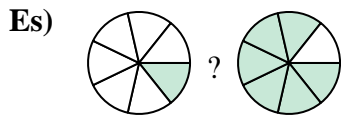


**Risposte**

Es.	$\frac{7}{10}$	$<$	$\frac{9}{10}$
1.	$\frac{3}{5}$	$>$	$\frac{2}{5}$
2.	$\frac{3}{6}$	$>$	$\frac{1}{6}$
3.	$\frac{3}{4}$	$>$	$\frac{1}{4}$
4.	$\frac{6}{8}$	$>$	$\frac{5}{8}$
5.	$\frac{1}{4}$	$<$	$\frac{3}{4}$
6.	$\frac{3}{8}$	$<$	$\frac{7}{8}$
7.	$\frac{1}{10}$	$<$	$\frac{4}{10}$
8.	$\frac{7}{10}$	$>$	$\frac{4}{10}$
9.	$\frac{2}{5}$	$>$	$\frac{1}{5}$
10.	$\frac{4}{6}$	$<$	$\frac{5}{6}$
11.	$\frac{5}{7}$	$>$	$\frac{4}{7}$
12.	$\frac{2}{5}$	$<$	$\frac{3}{5}$
13.	$\frac{2}{5}$	$<$	$\frac{4}{5}$
14.	$\frac{3}{7}$	$<$	$\frac{6}{7}$



Confronta le dimensioni delle frazioni usando  $>$ ,  $<$  o  $=$ .



**Risposte**

Es.  $\frac{1}{7}$   $<$   $\frac{6}{7}$

1. \_\_\_\_\_

2. \_\_\_\_\_

3. \_\_\_\_\_

4. \_\_\_\_\_

5. \_\_\_\_\_

6. \_\_\_\_\_

7. \_\_\_\_\_

8. \_\_\_\_\_

9. \_\_\_\_\_

10. \_\_\_\_\_

11. \_\_\_\_\_

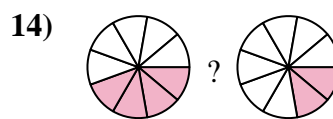
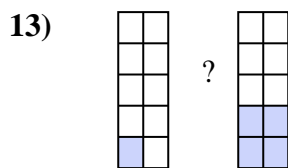
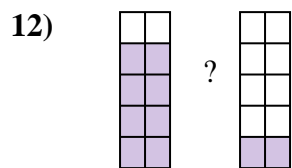
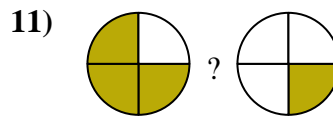
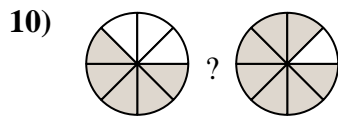
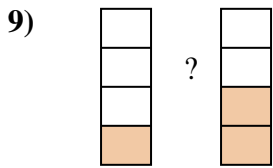
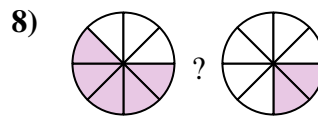
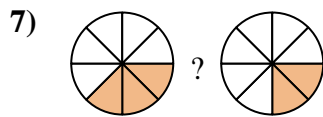
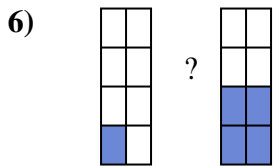
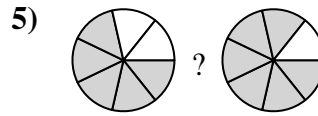
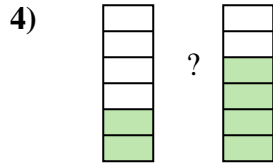
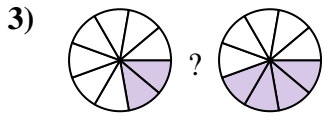
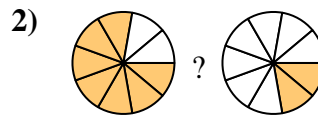
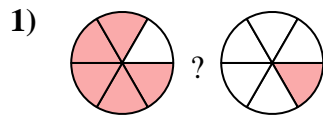
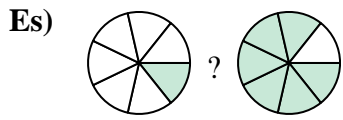
12. \_\_\_\_\_

13. \_\_\_\_\_

14. \_\_\_\_\_



Confronta le dimensioni delle frazioni usando  $>$ ,  $<$  o  $=$ .

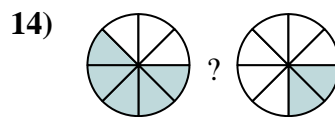
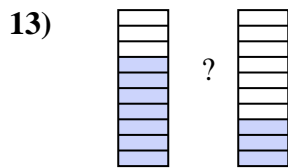
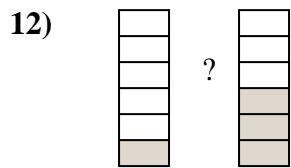
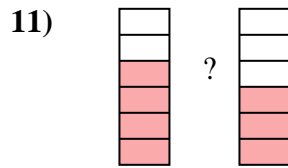
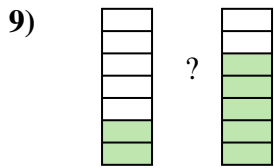
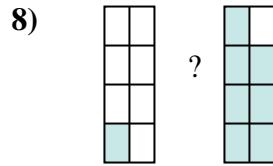
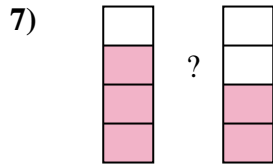
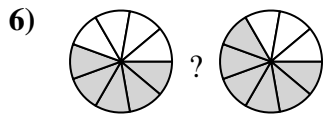
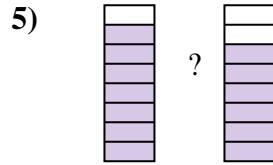
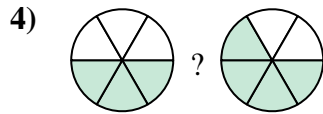
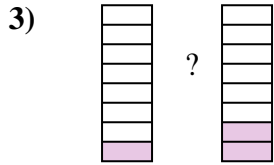
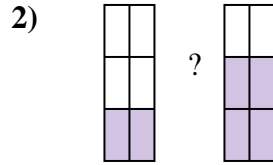
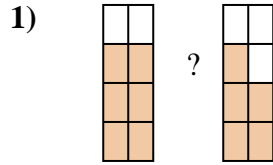
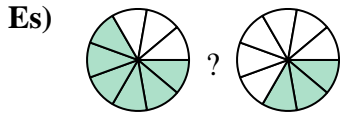


**Risposte**

Es.	$\frac{1}{7}$	$<$	$\frac{6}{7}$
1.	$\frac{5}{6}$	$>$	$\frac{1}{6}$
2.	$\frac{7}{9}$	$>$	$\frac{2}{9}$
3.	$\frac{2}{9}$	$<$	$\frac{4}{9}$
4.	$\frac{2}{6}$	$<$	$\frac{4}{6}$
5.	$\frac{5}{7}$	$<$	$\frac{6}{7}$
6.	$\frac{1}{8}$	$<$	$\frac{4}{8}$
7.	$\frac{3}{8}$	$>$	$\frac{2}{8}$
8.	$\frac{5}{8}$	$>$	$\frac{2}{8}$
9.	$\frac{1}{4}$	$<$	$\frac{2}{4}$
10.	$\frac{5}{8}$	$<$	$\frac{7}{8}$
11.	$\frac{3}{4}$	$>$	$\frac{1}{4}$
12.	$\frac{8}{10}$	$>$	$\frac{2}{10}$
13.	$\frac{1}{10}$	$<$	$\frac{4}{10}$
14.	$\frac{4}{9}$	$>$	$\frac{2}{9}$



Confronta le dimensioni delle frazioni usando  $>$ ,  $<$  o  $=$ .



**Risposte**

Es.  $\frac{6}{8}$   $>$   $\frac{3}{8}$

1. \_\_\_\_\_

2. \_\_\_\_\_

3. \_\_\_\_\_

4. \_\_\_\_\_

5. \_\_\_\_\_

6. \_\_\_\_\_

7. \_\_\_\_\_

8. \_\_\_\_\_

9. \_\_\_\_\_

10. \_\_\_\_\_

11. \_\_\_\_\_

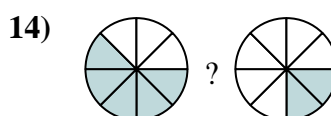
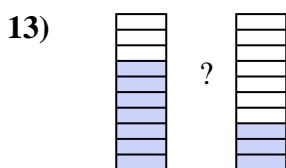
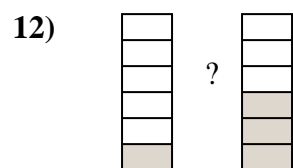
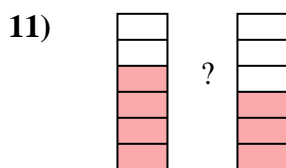

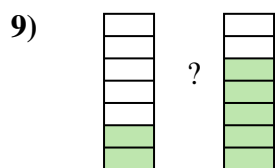
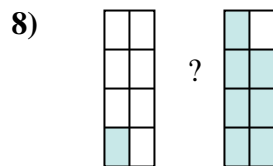
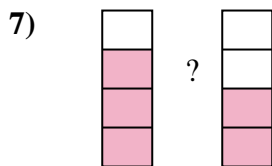
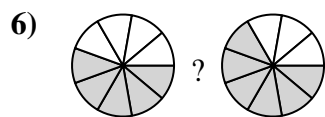
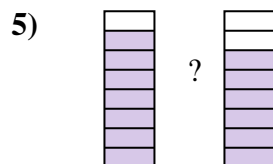
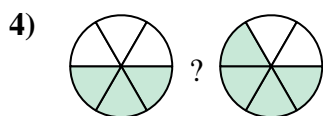
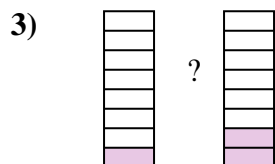
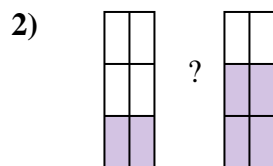
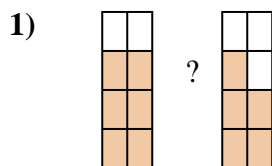
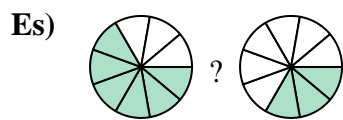
12. \_\_\_\_\_

13. \_\_\_\_\_

14. \_\_\_\_\_



Confronta le dimensioni delle frazioni usando  $>$ ,  $<$  o  $=$ .

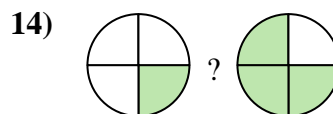
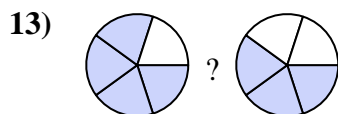
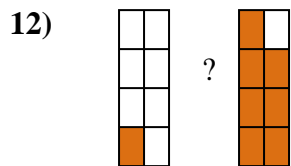
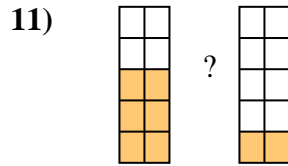
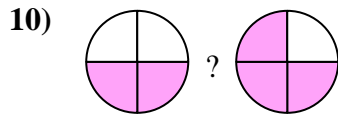
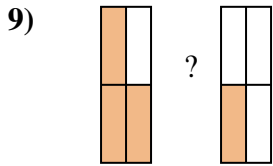
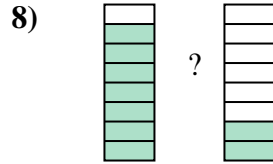
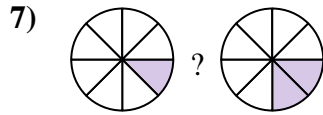
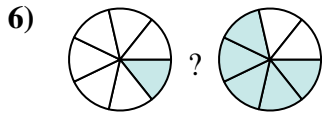
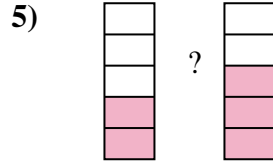
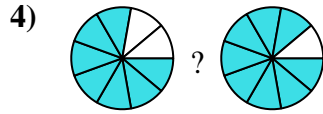
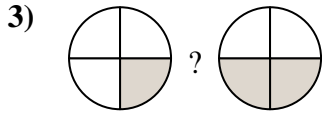
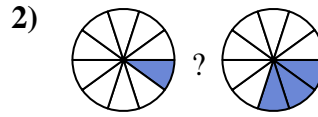

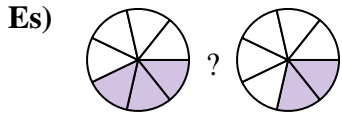


**Risposte**

Es.	$\frac{6}{9}$	$>$	$\frac{3}{9}$
1.	$\frac{6}{8}$	$>$	$\frac{5}{8}$
2.	$\frac{2}{6}$	$<$	$\frac{4}{6}$
3.	$\frac{1}{8}$	$<$	$\frac{2}{8}$
4.	$\frac{3}{6}$	$<$	$\frac{4}{6}$
5.	$\frac{7}{8}$	$>$	$\frac{6}{8}$
6.	$\frac{5}{9}$	$<$	$\frac{6}{9}$
7.	$\frac{3}{4}$	$>$	$\frac{2}{4}$
8.	$\frac{1}{8}$	$<$	$\frac{7}{8}$
9.	$\frac{2}{7}$	$<$	$\frac{5}{7}$
10.	$\frac{2}{5}$	$<$	$\frac{4}{5}$
11.	$\frac{4}{6}$	$>$	$\frac{3}{6}$
12.	$\frac{1}{6}$	$<$	$\frac{3}{6}$
13.	$\frac{7}{10}$	$>$	$\frac{3}{10}$
14.	$\frac{5}{8}$	$>$	$\frac{2}{8}$



Confronta le dimensioni delle frazioni usando  $>$ ,  $<$  o  $=$ .



**Risposte**

Es.  $\frac{3}{7} > \frac{2}{7}$

1. \_\_\_\_\_

2. \_\_\_\_\_

3. \_\_\_\_\_

4. \_\_\_\_\_

5. \_\_\_\_\_

6. \_\_\_\_\_

7. \_\_\_\_\_

8. \_\_\_\_\_

9. \_\_\_\_\_

10. \_\_\_\_\_

11. \_\_\_\_\_

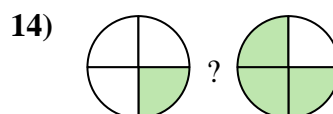
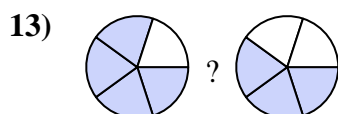
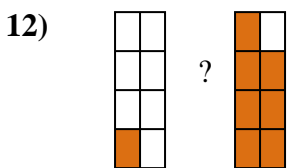
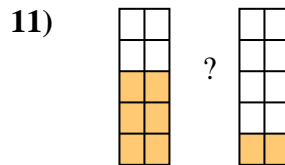
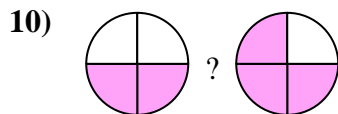
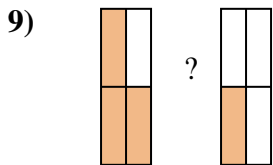
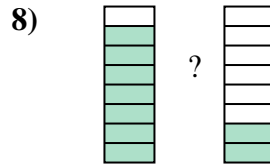
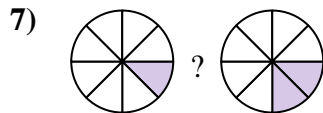
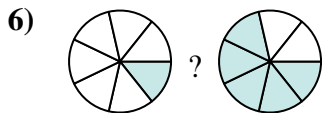
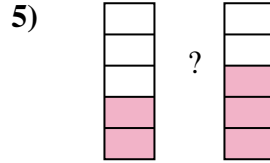
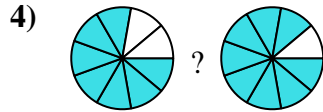
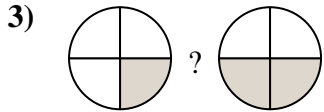
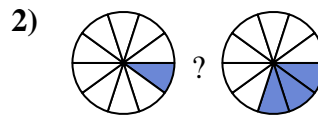

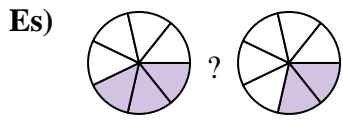
12. \_\_\_\_\_

13. \_\_\_\_\_

14. \_\_\_\_\_



Confronta le dimensioni delle frazioni usando  $>$ ,  $<$  o  $=$ .



**Risposte**

Es.  $\frac{3}{7} > \frac{2}{7}$

1.  $\frac{4}{5} > \frac{3}{5}$

2.  $\frac{1}{10} < \frac{3}{10}$

3.  $\frac{1}{4} < \frac{2}{4}$

4.  $\frac{7}{9} < \frac{8}{9}$

5.  $\frac{2}{5} < \frac{3}{5}$

6.  $\frac{1}{7} < \frac{5}{7}$

7.  $\frac{1}{8} < \frac{2}{8}$

8.  $\frac{7}{8} > \frac{2}{8}$

9.  $\frac{3}{4} > \frac{1}{4}$

10.  $\frac{2}{4} < \frac{3}{4}$

11.  $\frac{6}{10} > \frac{2}{10}$

12.  $\frac{1}{8} < \frac{7}{8}$

13.  $\frac{4}{5} > \frac{3}{5}$

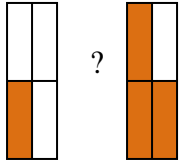
14.  $\frac{1}{4} < \frac{3}{4}$



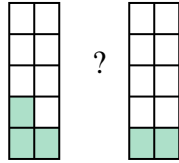


Confronta le dimensioni delle frazioni usando  $>$ ,  $<$  o  $=$ .

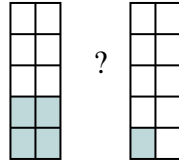
Es)



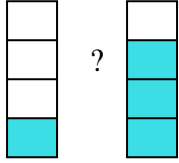
1)



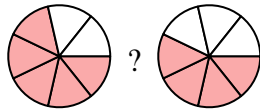
2)



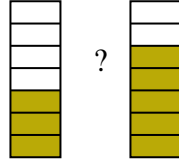
3)



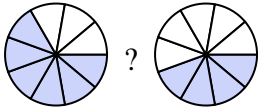
4)



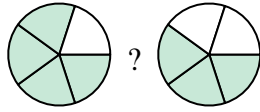
5)



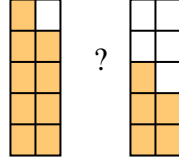
6)



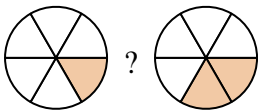
7)



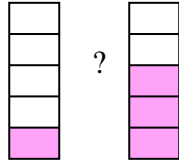
8)



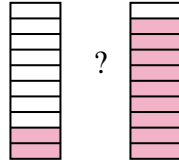
9)



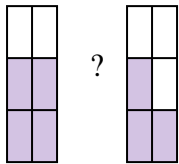
10)



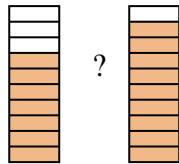
11)



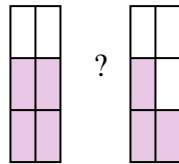
12)



13)



14)



**Risposte**

Es.  $\frac{1}{4}$   $<$   $\frac{3}{4}$

1. \_\_\_\_\_

2. \_\_\_\_\_

3. \_\_\_\_\_

4. \_\_\_\_\_

5. \_\_\_\_\_

6. \_\_\_\_\_

7. \_\_\_\_\_

8. \_\_\_\_\_

9. \_\_\_\_\_

10. \_\_\_\_\_

11. \_\_\_\_\_

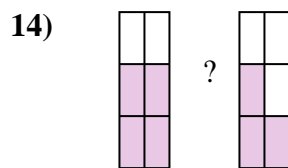
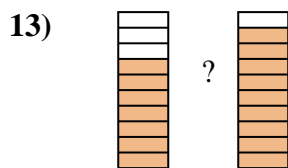
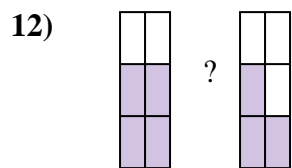
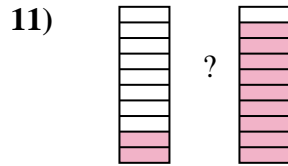
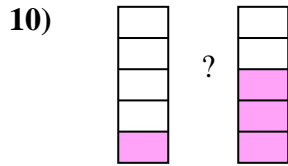
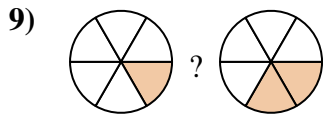
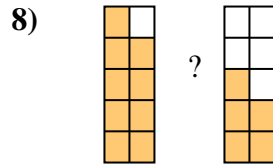
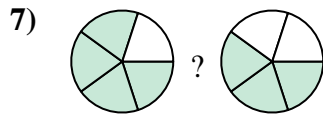
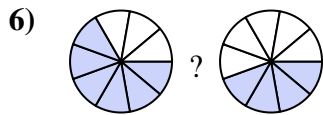

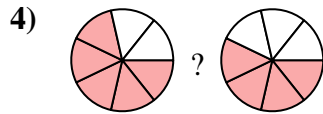

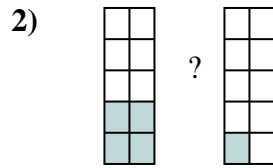
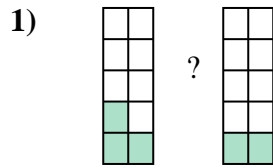
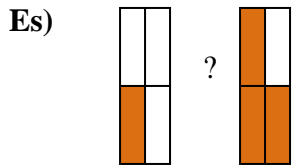
12. \_\_\_\_\_

13. \_\_\_\_\_

14. \_\_\_\_\_



Confronta le dimensioni delle frazioni usando  $>$ ,  $<$  o  $=$ .

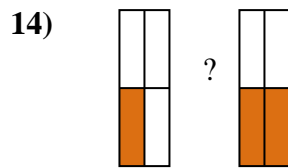
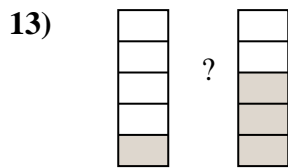
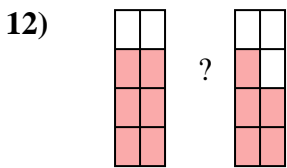
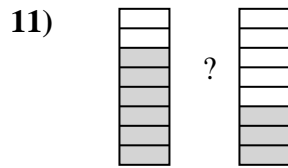
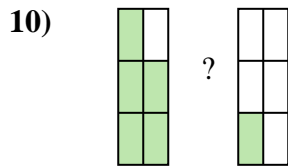
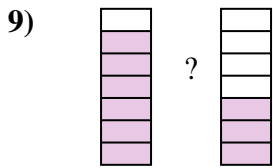
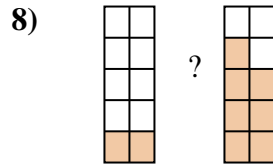
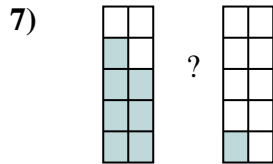
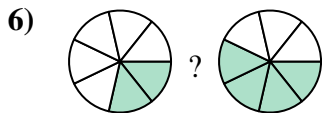
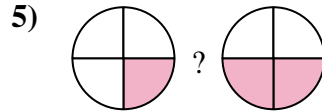
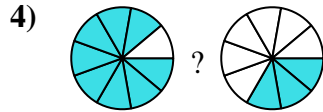
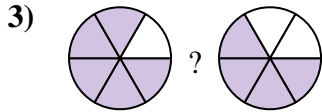
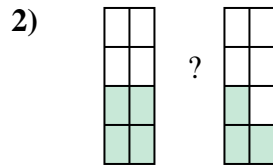
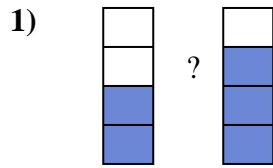
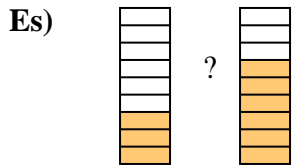


**Risposte**

Es.	$\frac{1}{4}$	$<$	$\frac{3}{4}$
1.	$\frac{3}{10}$	$>$	$\frac{2}{10}$
2.	$\frac{4}{10}$	$>$	$\frac{1}{10}$
3.	$\frac{1}{4}$	$<$	$\frac{3}{4}$
4.	$\frac{5}{7}$	$>$	$\frac{4}{7}$
5.	$\frac{3}{7}$	$<$	$\frac{5}{7}$
6.	$\frac{6}{9}$	$>$	$\frac{4}{9}$
7.	$\frac{4}{5}$	$>$	$\frac{3}{5}$
8.	$\frac{9}{10}$	$>$	$\frac{5}{10}$
9.	$\frac{1}{6}$	$<$	$\frac{2}{6}$
10.	$\frac{1}{5}$	$<$	$\frac{3}{5}$
11.	$\frac{2}{10}$	$<$	$\frac{9}{10}$
12.	$\frac{4}{6}$	$>$	$\frac{3}{6}$
13.	$\frac{7}{10}$	$<$	$\frac{9}{10}$
14.	$\frac{4}{6}$	$>$	$\frac{3}{6}$



Confronta le dimensioni delle frazioni usando  $>$ ,  $<$  o  $=$ .



**Risposte**

Es.  $\frac{3}{9}$   $<$   $\frac{6}{9}$

1. \_\_\_\_\_

2. \_\_\_\_\_

3. \_\_\_\_\_

4. \_\_\_\_\_

5. \_\_\_\_\_

6. \_\_\_\_\_

7. \_\_\_\_\_

8. \_\_\_\_\_

9. \_\_\_\_\_

10. \_\_\_\_\_

11. \_\_\_\_\_

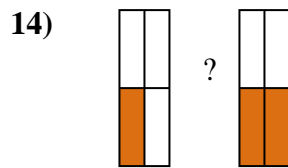
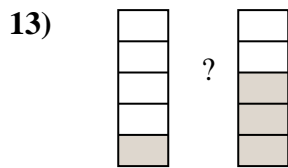
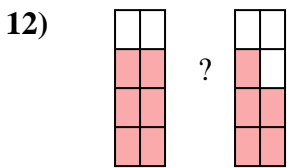
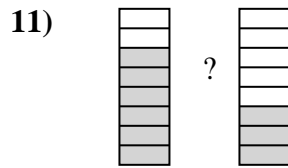
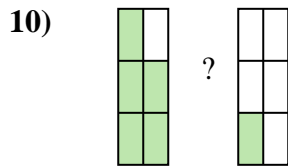
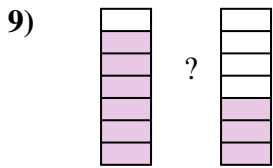
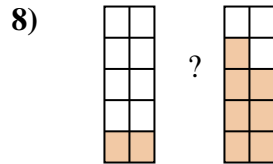
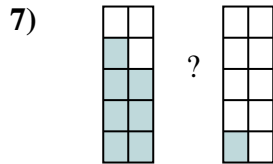
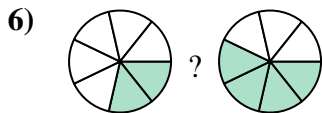
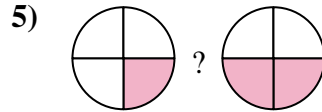
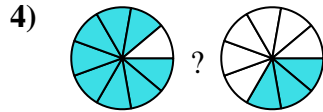
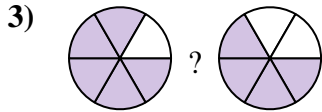
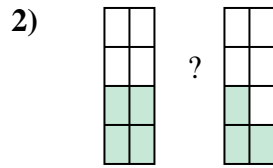
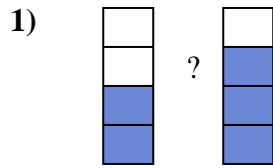
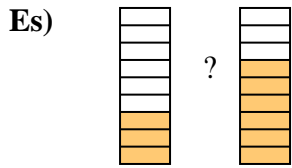
12. \_\_\_\_\_

13. \_\_\_\_\_

14. \_\_\_\_\_



Confronta le dimensioni delle frazioni usando  $>$ ,  $<$  o  $=$ .

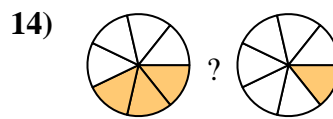
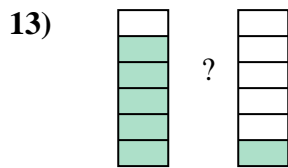
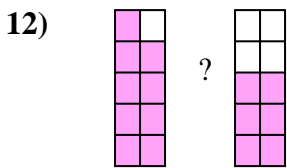
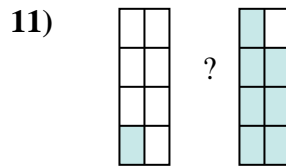
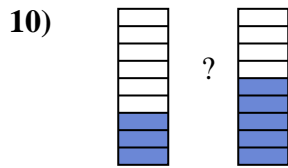
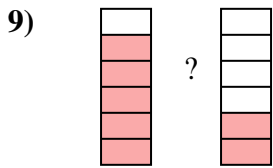
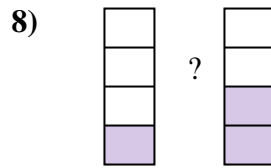
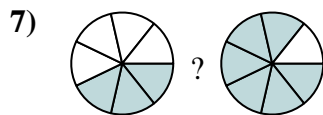
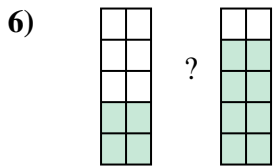
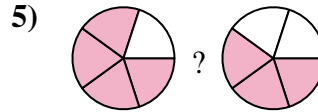
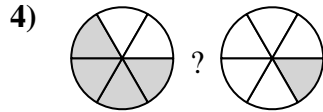
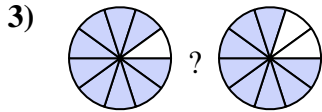
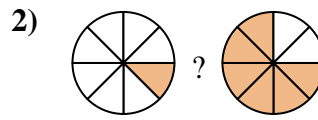

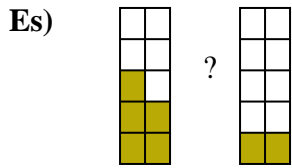


**Risposte**

Es.	$\frac{3}{9}$	$<$	$\frac{6}{9}$
1.	$\frac{2}{4}$	$<$	$\frac{3}{4}$
2.	$\frac{4}{8}$	$>$	$\frac{3}{8}$
3.	$\frac{5}{6}$	$>$	$\frac{4}{6}$
4.	$\frac{8}{9}$	$>$	$\frac{3}{9}$
5.	$\frac{1}{4}$	$<$	$\frac{2}{4}$
6.	$\frac{2}{7}$	$<$	$\frac{4}{7}$
7.	$\frac{7}{10}$	$>$	$\frac{1}{10}$
8.	$\frac{2}{10}$	$<$	$\frac{7}{10}$
9.	$\frac{6}{7}$	$>$	$\frac{3}{7}$
10.	$\frac{5}{6}$	$>$	$\frac{1}{6}$
11.	$\frac{6}{8}$	$>$	$\frac{3}{8}$
12.	$\frac{6}{8}$	$>$	$\frac{5}{8}$
13.	$\frac{1}{5}$	$<$	$\frac{3}{5}$
14.	$\frac{1}{4}$	$<$	$\frac{2}{4}$



Confronta le dimensioni delle frazioni usando  $>$ ,  $<$  o  $=$ .



**Risposte**

Es.  $\frac{5}{10}$   $>$   $\frac{2}{10}$

1. \_\_\_\_\_

2. \_\_\_\_\_

3. \_\_\_\_\_

4. \_\_\_\_\_

5. \_\_\_\_\_

6. \_\_\_\_\_

7. \_\_\_\_\_

8. \_\_\_\_\_

9. \_\_\_\_\_

10. \_\_\_\_\_

11. \_\_\_\_\_

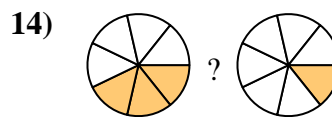
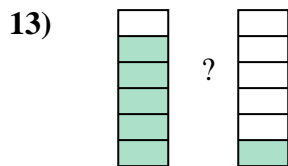
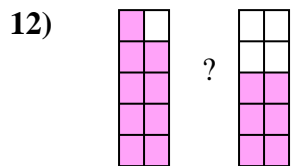
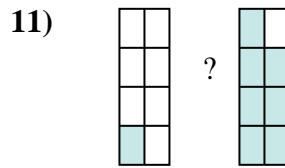
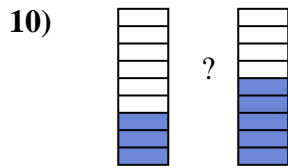
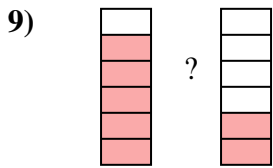
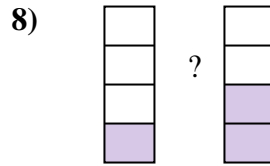
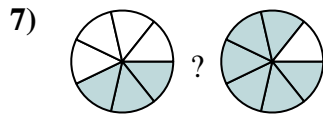
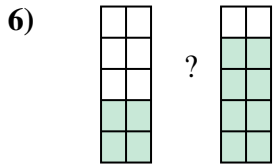
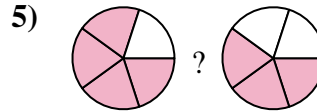
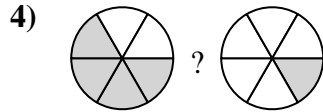
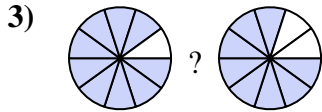
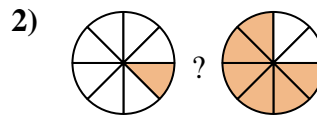

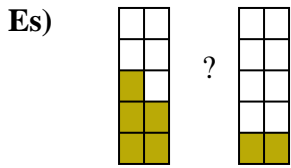
12. \_\_\_\_\_

13. \_\_\_\_\_

14. \_\_\_\_\_



Confronta le dimensioni delle frazioni usando >, < o =.



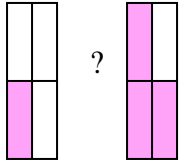
**Risposte**

Es.	$\frac{5}{10}$	>	$\frac{2}{10}$
1.	$\frac{2}{10}$	<	$\frac{7}{10}$
2.	$\frac{1}{8}$	<	$\frac{6}{8}$
3.	$\frac{9}{10}$	>	$\frac{8}{10}$
4.	$\frac{4}{6}$	>	$\frac{1}{6}$
5.	$\frac{4}{5}$	>	$\frac{3}{5}$
6.	$\frac{4}{10}$	<	$\frac{8}{10}$
7.	$\frac{3}{7}$	<	$\frac{6}{7}$
8.	$\frac{1}{4}$	<	$\frac{2}{4}$
9.	$\frac{5}{6}$	>	$\frac{2}{6}$
10.	$\frac{3}{9}$	<	$\frac{5}{9}$
11.	$\frac{1}{8}$	<	$\frac{7}{8}$
12.	$\frac{9}{10}$	>	$\frac{6}{10}$
13.	$\frac{5}{6}$	>	$\frac{1}{6}$
14.	$\frac{3}{7}$	>	$\frac{1}{7}$

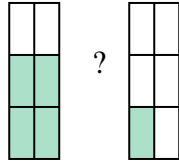


Confronta le dimensioni delle frazioni usando  $>$ ,  $<$  o  $=$ .

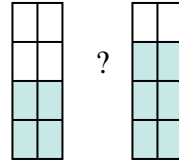
Es)



1)



2)



**Risposte**

Es.  $\frac{1}{4}$   $<$   $\frac{3}{4}$

1. \_\_\_\_\_

2. \_\_\_\_\_

3. \_\_\_\_\_

4. \_\_\_\_\_

5. \_\_\_\_\_

6. \_\_\_\_\_

7. \_\_\_\_\_

8. \_\_\_\_\_

9. \_\_\_\_\_

10. \_\_\_\_\_

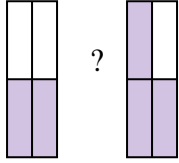
11. \_\_\_\_\_

12. \_\_\_\_\_

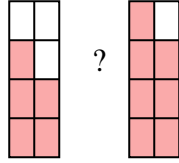
13. \_\_\_\_\_

14. \_\_\_\_\_

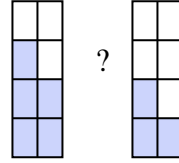
3)



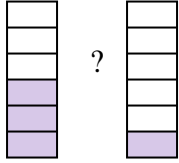
4)



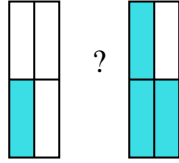
5)



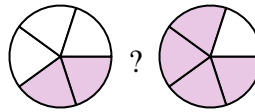
6)



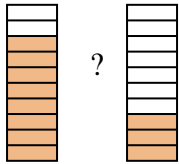
7)



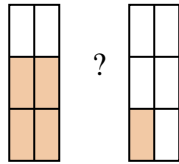
8)



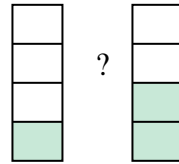
9)



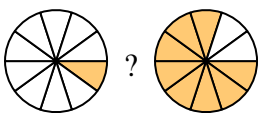
10)



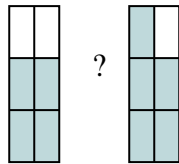
11)



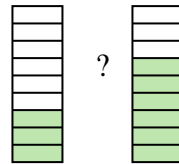
12)



13)

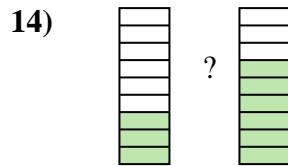
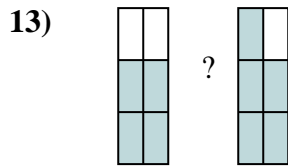
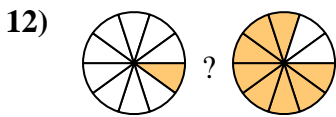
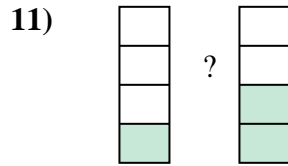
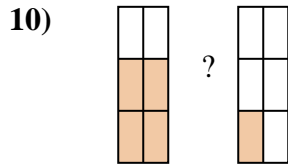
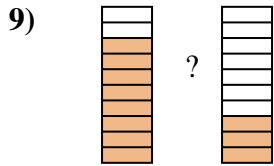
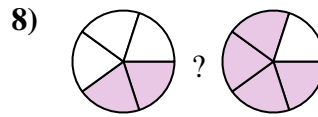
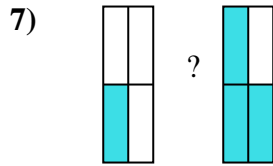
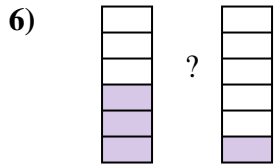
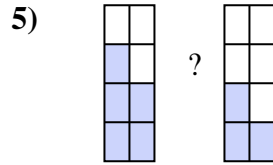
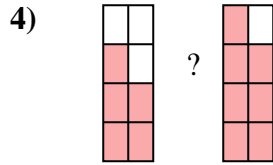
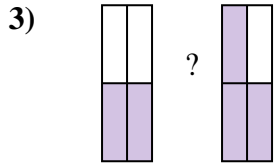
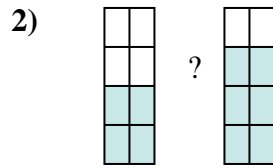
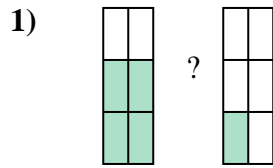
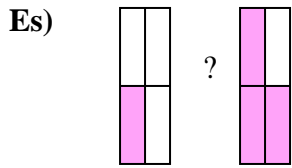


14)





Confronta le dimensioni delle frazioni usando >, < o =.



**Risposte**

Es.  $\frac{1}{4} < \frac{3}{4}$

1.  $\frac{4}{6} > \frac{1}{6}$

2.  $\frac{4}{8} < \frac{6}{8}$

3.  $\frac{2}{4} < \frac{3}{4}$

4.  $\frac{5}{8} < \frac{7}{8}$

5.  $\frac{5}{8} > \frac{3}{8}$

6.  $\frac{3}{6} > \frac{1}{6}$

7.  $\frac{1}{4} < \frac{3}{4}$

8.  $\frac{2}{5} < \frac{4}{5}$

9.  $\frac{8}{10} > \frac{3}{10}$

10.  $\frac{4}{6} > \frac{1}{6}$

11.  $\frac{1}{4} < \frac{2}{4}$

12.  $\frac{1}{10} < \frac{8}{10}$

13.  $\frac{4}{6} < \frac{5}{6}$

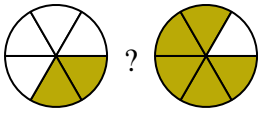
14.  $\frac{3}{9} < \frac{6}{9}$



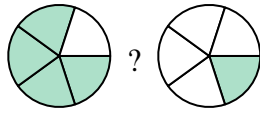


Confronta le dimensioni delle frazioni usando  $>$ ,  $<$  o  $=$ .

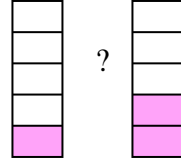
Es)



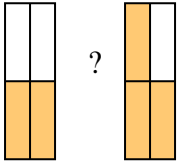
1)



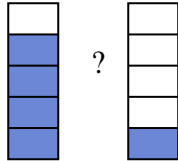
2)



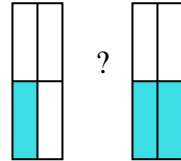
3)



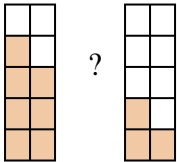
4)



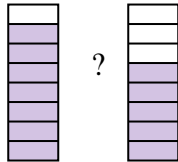
5)



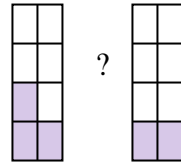
6)



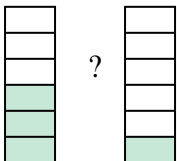
7)



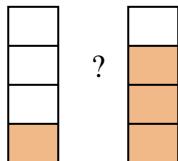
8)



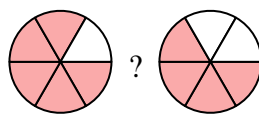
9)



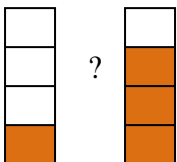
10)



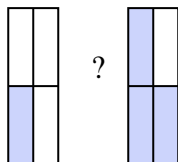
11)



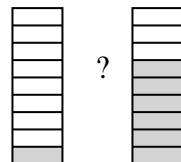
12)



13)



14)



**Risposte**

Es.  $\frac{2}{6}$   $<$   $\frac{5}{6}$

1. \_\_\_\_\_

2. \_\_\_\_\_

3. \_\_\_\_\_

4. \_\_\_\_\_

5. \_\_\_\_\_

6. \_\_\_\_\_

7. \_\_\_\_\_

8. \_\_\_\_\_

9. \_\_\_\_\_

10. \_\_\_\_\_

11. \_\_\_\_\_

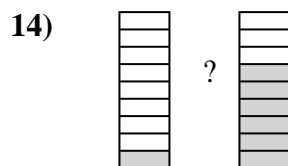
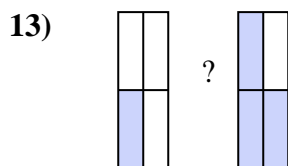
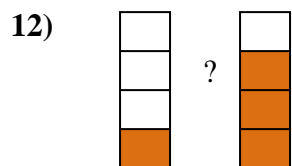
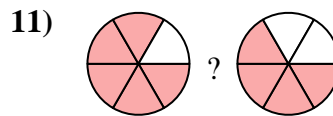
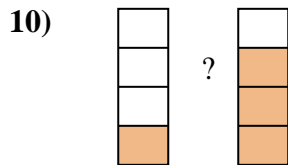
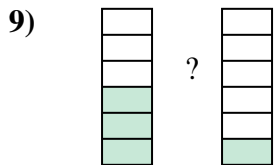
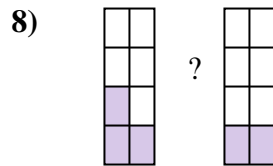
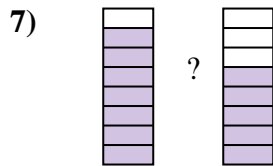
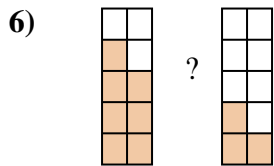
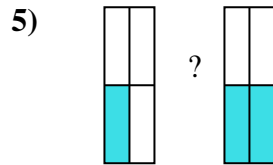

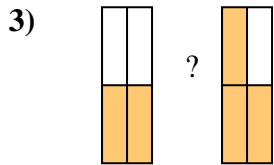
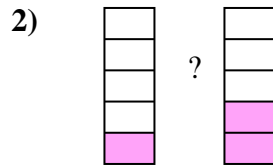
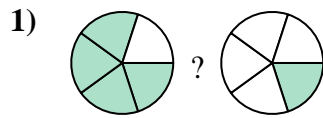
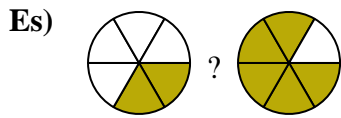
12. \_\_\_\_\_

13. \_\_\_\_\_

14. \_\_\_\_\_



Confronta le dimensioni delle frazioni usando  $>$ ,  $<$  o  $=$ .



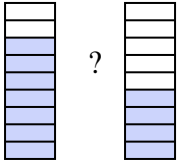
**Risposte**

Es.	$\frac{2}{6}$	$<$	$\frac{5}{6}$
1.	$\frac{4}{5}$	$>$	$\frac{1}{5}$
2.	$\frac{1}{5}$	$<$	$\frac{2}{5}$
3.	$\frac{2}{4}$	$<$	$\frac{3}{4}$
4.	$\frac{4}{5}$	$>$	$\frac{1}{5}$
5.	$\frac{1}{4}$	$<$	$\frac{2}{4}$
6.	$\frac{7}{10}$	$>$	$\frac{3}{10}$
7.	$\frac{7}{8}$	$>$	$\frac{5}{8}$
8.	$\frac{3}{8}$	$>$	$\frac{2}{8}$
9.	$\frac{3}{6}$	$>$	$\frac{1}{6}$
10.	$\frac{1}{4}$	$<$	$\frac{3}{4}$
11.	$\frac{5}{6}$	$>$	$\frac{4}{6}$
12.	$\frac{1}{4}$	$<$	$\frac{3}{4}$
13.	$\frac{1}{4}$	$<$	$\frac{3}{4}$
14.	$\frac{1}{9}$	$<$	$\frac{6}{9}$

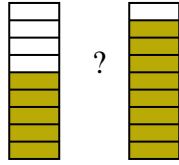


Confronta le dimensioni delle frazioni usando  $>$ ,  $<$  o  $=$ .

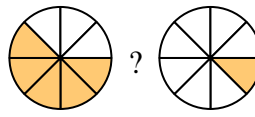
Es)



1)



2)



**Risposte**

Es.  $\frac{7}{9}$   $>$   $\frac{4}{9}$

1. \_\_\_\_\_

2. \_\_\_\_\_

3. \_\_\_\_\_

4. \_\_\_\_\_

5. \_\_\_\_\_

6. \_\_\_\_\_

7. \_\_\_\_\_

8. \_\_\_\_\_

9. \_\_\_\_\_

10. \_\_\_\_\_

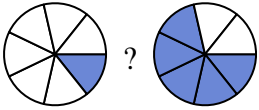
11. \_\_\_\_\_

12. \_\_\_\_\_

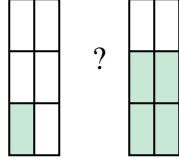
13. \_\_\_\_\_

14. \_\_\_\_\_

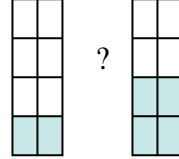
3)



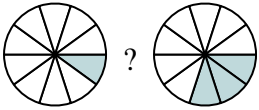
4)



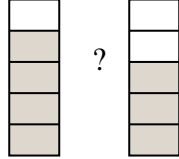
5)



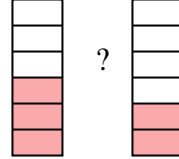
6)



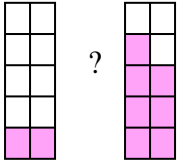
7)



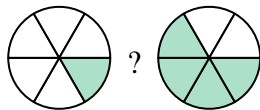
8)



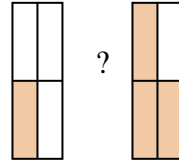
9)



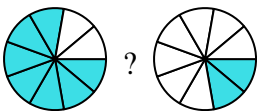
10)



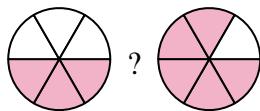
11)



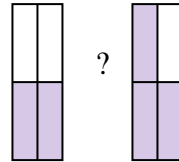
12)



13)

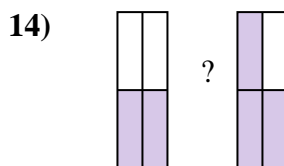
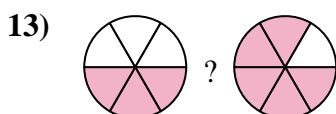
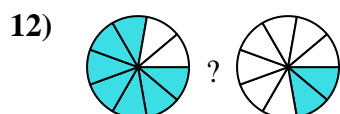
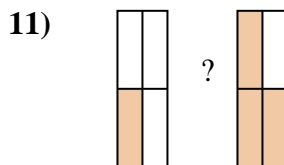
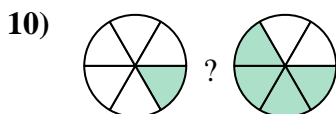
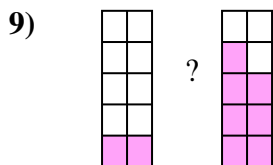
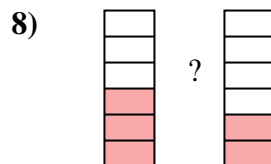

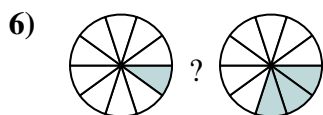
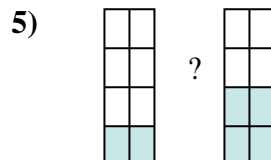
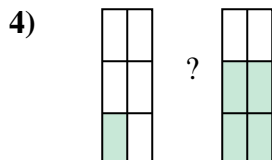
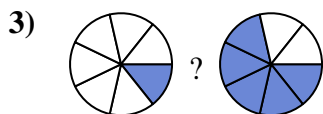
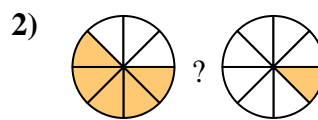

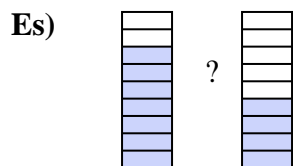


14)





Confronta le dimensioni delle frazioni usando  $>$ ,  $<$  o  $=$ .



**Risposte**

Es.	$\frac{7}{9}$	$>$	$\frac{4}{9}$
1.	$\frac{5}{9}$	$<$	$\frac{8}{9}$
2.	$\frac{5}{8}$	$>$	$\frac{1}{8}$
3.	$\frac{1}{7}$	$<$	$\frac{5}{7}$
4.	$\frac{1}{6}$	$<$	$\frac{4}{6}$
5.	$\frac{2}{8}$	$<$	$\frac{4}{8}$
6.	$\frac{1}{10}$	$<$	$\frac{3}{10}$
7.	$\frac{4}{5}$	$>$	$\frac{3}{5}$
8.	$\frac{3}{6}$	$>$	$\frac{2}{6}$
9.	$\frac{2}{10}$	$<$	$\frac{7}{10}$
10.	$\frac{1}{6}$	$<$	$\frac{4}{6}$
11.	$\frac{1}{4}$	$<$	$\frac{3}{4}$
12.	$\frac{7}{9}$	$>$	$\frac{2}{9}$
13.	$\frac{3}{6}$	$<$	$\frac{5}{6}$
14.	$\frac{2}{4}$	$<$	$\frac{3}{4}$