




Collega ogni equazione alla sua risposta corretta e scrivi la risposta.

**Risposte**

Es)  $\frac{1}{5} + \frac{1}{5}$

Es. **E**

1)  $\frac{1}{10} + \frac{1}{10} + \frac{1}{10} + \frac{1}{10} + \frac{1}{10} + \frac{1}{10} + \frac{1}{10}$



1. \_\_\_\_\_

2)  $\frac{1}{12} + \frac{1}{12} + \frac{1}{12} + \frac{1}{12}$



2. \_\_\_\_\_

3)  $\frac{1}{6} + \frac{1}{6}$




3. \_\_\_\_\_

4)  $\frac{1}{8} + \frac{1}{8} + \frac{1}{8} + \frac{1}{8} + \frac{1}{8} + \frac{1}{8} + \frac{1}{8}$



4. \_\_\_\_\_

5)  $\frac{1}{10} + \frac{1}{10} + \frac{1}{10} + \frac{1}{10} + \frac{1}{10} + \frac{1}{10}$



5. \_\_\_\_\_

6)  $\frac{1}{5} + \frac{1}{5} + \frac{1}{5} + \frac{1}{5}$




6. \_\_\_\_\_

7)  $\frac{1}{10} + \frac{1}{10} + \frac{1}{10} + \frac{1}{10}$



7. \_\_\_\_\_

8)  $\frac{1}{4} + \frac{1}{4}$




8. \_\_\_\_\_

9)  $\frac{1}{3} + \frac{1}{3}$



9. \_\_\_\_\_

10)  $\frac{1}{8} + \frac{1}{8} + \frac{1}{8} + \frac{1}{8} + \frac{1}{8}$



10. \_\_\_\_\_

11)  $\frac{1}{4} + \frac{1}{4} + \frac{1}{4}$




11. \_\_\_\_\_

12)  $\frac{1}{10} + \frac{1}{10} + \frac{1}{10} + \frac{1}{10} + \frac{1}{10}$



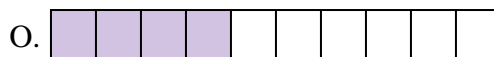
12. \_\_\_\_\_

13)  $\frac{1}{8} + \frac{1}{8} + \frac{1}{8}$




13. \_\_\_\_\_

14)  $\frac{1}{8} + \frac{1}{8} + \frac{1}{8} + \frac{1}{8} + \frac{1}{8} + \frac{1}{8}$



14. \_\_\_\_\_

15)  $\frac{1}{8} + \frac{1}{8} + \frac{1}{8} + \frac{1}{8}$



15. \_\_\_\_\_



Collega ogni equazione alla sua risposta corretta e scrivi la risposta.


Es)  $\frac{1}{5} + \frac{1}{5}$



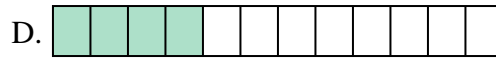
1)  $\frac{1}{10} + \frac{1}{10} + \frac{1}{10} + \frac{1}{10} + \frac{1}{10} + \frac{1}{10} + \frac{1}{10}$




2)  $\frac{1}{12} + \frac{1}{12} + \frac{1}{12} + \frac{1}{12}$




3)  $\frac{1}{6} + \frac{1}{6}$



4)  $\frac{1}{8} + \frac{1}{8} + \frac{1}{8} + \frac{1}{8} + \frac{1}{8} + \frac{1}{8} + \frac{1}{8}$



5)  $\frac{1}{10} + \frac{1}{10} + \frac{1}{10} + \frac{1}{10} + \frac{1}{10} + \frac{1}{10}$




6)  $\frac{1}{5} + \frac{1}{5} + \frac{1}{5} + \frac{1}{5}$



7)  $\frac{1}{10} + \frac{1}{10} + \frac{1}{10} + \frac{1}{10}$




8)  $\frac{1}{4} + \frac{1}{4}$




9)  $\frac{1}{3} + \frac{1}{3}$



10)  $\frac{1}{8} + \frac{1}{8} + \frac{1}{8} + \frac{1}{8} + \frac{1}{8}$



11)  $\frac{1}{4} + \frac{1}{4} + \frac{1}{4}$



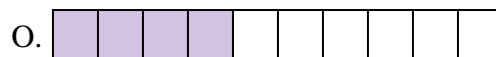
12)  $\frac{1}{10} + \frac{1}{10} + \frac{1}{10} + \frac{1}{10} + \frac{1}{10}$




13)  $\frac{1}{8} + \frac{1}{8} + \frac{1}{8}$



14)  $\frac{1}{8} + \frac{1}{8} + \frac{1}{8} + \frac{1}{8} + \frac{1}{8} + \frac{1}{8}$



15)  $\frac{1}{8} + \frac{1}{8} + \frac{1}{8} + \frac{1}{8}$

**Risposte**Es.     **E**    1.     **K**    2.     **D**    3.     **B**    4.     **G**    5.     **P**    6.     **A**    7.     **O**    8.     **M**    9.     **J**    10.     **H**    11.     **L**    12.     **C**    13.     **F**    14.     **N**    15.     **I**