




Collega ogni equazione alla sua risposta corretta e scrivi la risposta.

**Risposte**


Es)  $\frac{1}{10} + \frac{1}{10} + \frac{1}{10} + \frac{1}{10} + \frac{1}{10} + \frac{1}{10} + \frac{1}{10}$



1)  $\frac{1}{12} + \frac{1}{12} + \frac{1}{12} + \frac{1}{12}$




2)  $\frac{1}{5} + \frac{1}{5} + \frac{1}{5} + \frac{1}{5}$



3)  $\frac{1}{6} + \frac{1}{6} + \frac{1}{6}$



4)  $\frac{1}{8} + \frac{1}{8} + \frac{1}{8} + \frac{1}{8}$



5)  $\frac{1}{4} + \frac{1}{4}$




6)  $\frac{1}{5} + \frac{1}{5} + \frac{1}{5}$



7)  $\frac{1}{8} + \frac{1}{8} + \frac{1}{8} + \frac{1}{8} + \frac{1}{8}$




8)  $\frac{1}{3} + \frac{1}{3}$



9)  $\frac{1}{5} + \frac{1}{5}$




10)  $\frac{1}{12} + \frac{1}{12}$



11)  $\frac{1}{8} + \frac{1}{8}$



12)  $\frac{1}{10} + \frac{1}{10} + \frac{1}{10}$




13)  $\frac{1}{4} + \frac{1}{4} + \frac{1}{4}$



14)  $\frac{1}{12} + \frac{1}{12} + \frac{1}{12} + \frac{1}{12} + \frac{1}{12}$



15)  $\frac{1}{6} + \frac{1}{6} + \frac{1}{6} + \frac{1}{6} + \frac{1}{6}$

Es. **H**

1. \_\_\_\_\_

2. \_\_\_\_\_

3. \_\_\_\_\_

4. \_\_\_\_\_

5. \_\_\_\_\_

6. \_\_\_\_\_

7. \_\_\_\_\_

8. \_\_\_\_\_

9. \_\_\_\_\_

10. \_\_\_\_\_

11. \_\_\_\_\_

12. \_\_\_\_\_

13. \_\_\_\_\_

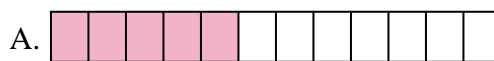
14. \_\_\_\_\_

15. \_\_\_\_\_

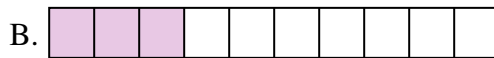


Collega ogni equazione alla sua risposta corretta e scrivi la risposta.

Es)  $\frac{1}{10} + \frac{1}{10} + \frac{1}{10} + \frac{1}{10} + \frac{1}{10} + \frac{1}{10} + \frac{1}{10}$



1)  $\frac{1}{12} + \frac{1}{12} + \frac{1}{12} + \frac{1}{12}$



2)  $\frac{1}{5} + \frac{1}{5} + \frac{1}{5} + \frac{1}{5}$



3)  $\frac{1}{6} + \frac{1}{6} + \frac{1}{6}$



4)  $\frac{1}{8} + \frac{1}{8} + \frac{1}{8} + \frac{1}{8}$




5)  $\frac{1}{4} + \frac{1}{4}$




6)  $\frac{1}{5} + \frac{1}{5} + \frac{1}{5}$



7)  $\frac{1}{8} + \frac{1}{8} + \frac{1}{8} + \frac{1}{8} + \frac{1}{8}$




8)  $\frac{1}{3} + \frac{1}{3}$



9)  $\frac{1}{5} + \frac{1}{5}$




10)  $\frac{1}{12} + \frac{1}{12}$



11)  $\frac{1}{8} + \frac{1}{8}$



12)  $\frac{1}{10} + \frac{1}{10} + \frac{1}{10}$




13)  $\frac{1}{4} + \frac{1}{4} + \frac{1}{4}$



14)  $\frac{1}{12} + \frac{1}{12} + \frac{1}{12} + \frac{1}{12} + \frac{1}{12}$



15)  $\frac{1}{6} + \frac{1}{6} + \frac{1}{6} + \frac{1}{6} + \frac{1}{6}$

**Risposte**Es.     **H**    1.     **G**    2.     **M**    3.     **J**    4.     **O**    5.     **L**    6.     **P**    7.     **C**    8.     **F**    9.     **K**    10.     **D**    11.     **I**    12.     **B**    13.     **N**    14.     **A**    15.     **E**