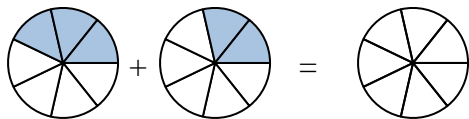




Scrivi numericamente la frazione rappresentata.

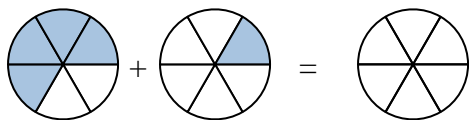
**Risposte**

Es)



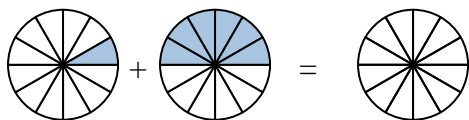
Es.  $\frac{3}{7}$      $\frac{2}{7}$      $\frac{5}{7}$

1)



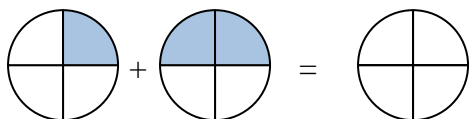
1. \_\_\_\_\_

2)



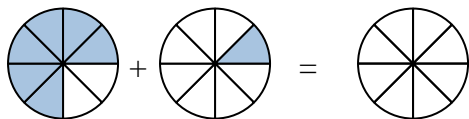
2. \_\_\_\_\_

3)



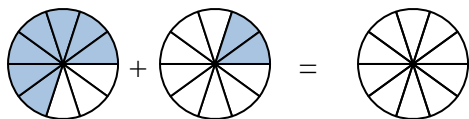
3. \_\_\_\_\_

4)



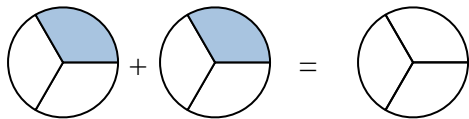
4. \_\_\_\_\_

5)



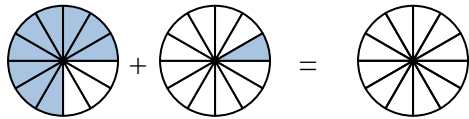
5. \_\_\_\_\_

6)



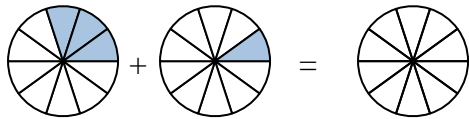
6. \_\_\_\_\_

7)



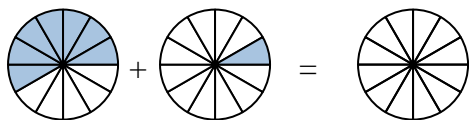
7. \_\_\_\_\_

8)



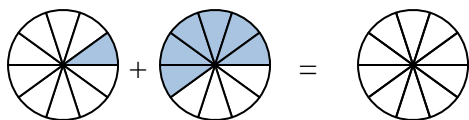
8. \_\_\_\_\_

9)



9. \_\_\_\_\_

10)

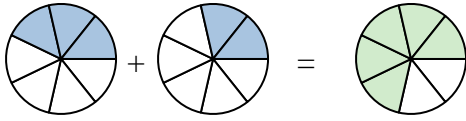


10. \_\_\_\_\_

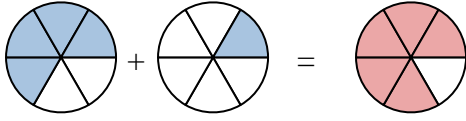


Scrivi numericamente la frazione rappresentata.

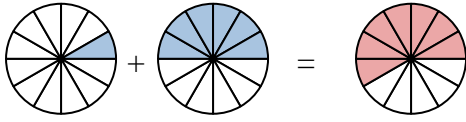
Es)



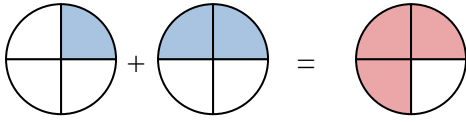
1)



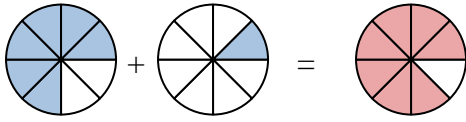
2)



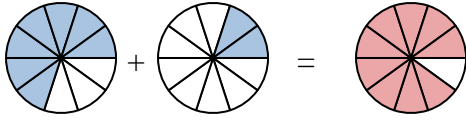
3)



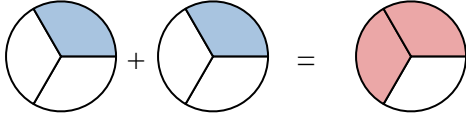
4)



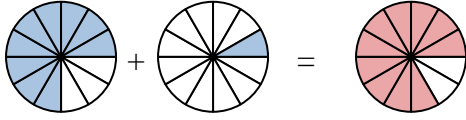
5)



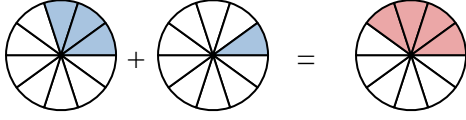
6)



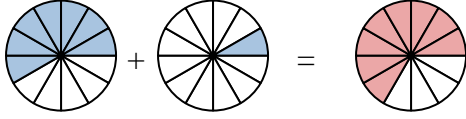
7)



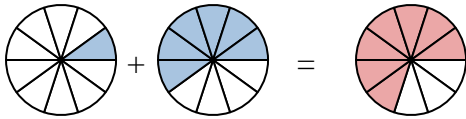
8)



9)



10)

**Risposte**

Es.	$\frac{3}{7}$	$\frac{2}{7}$	$\frac{5}{7}$
1.	$\frac{4}{6}$	$\frac{1}{6}$	$\frac{5}{6}$
2.	$\frac{1}{12}$	$\frac{6}{12}$	$\frac{7}{12}$
3.	$\frac{1}{4}$	$\frac{2}{4}$	$\frac{3}{4}$
4.	$\frac{6}{8}$	$\frac{1}{8}$	$\frac{7}{8}$
5.	$\frac{7}{10}$	$\frac{2}{10}$	$\frac{9}{10}$
6.	$\frac{1}{3}$	$\frac{1}{3}$	$\frac{2}{3}$
7.	$\frac{9}{12}$	$\frac{1}{12}$	$\frac{10}{12}$
8.	$\frac{3}{10}$	$\frac{1}{10}$	$\frac{4}{10}$
9.	$\frac{7}{12}$	$\frac{1}{12}$	$\frac{8}{12}$
10.	$\frac{1}{10}$	$\frac{6}{10}$	$\frac{7}{10}$