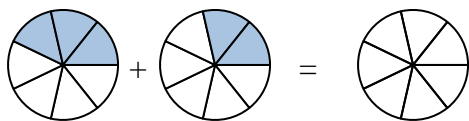




Scrivi numericamente la frazione rappresentata.

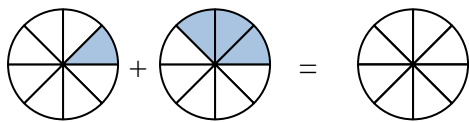
Risposte

Es)



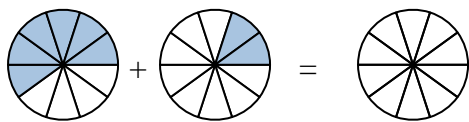
Es. $\frac{3}{7}$ $\frac{2}{7}$ $\frac{5}{7}$

1)



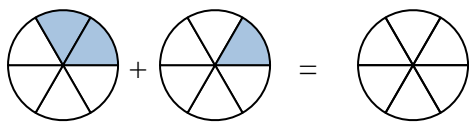
1. _____

2)



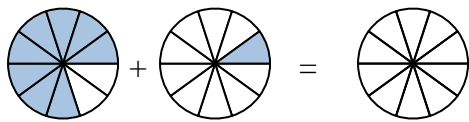
2. _____

3)



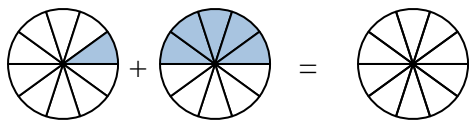
3. _____

4)



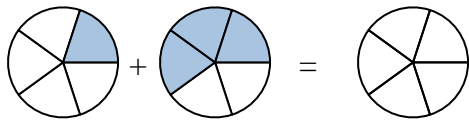
4. _____

5)



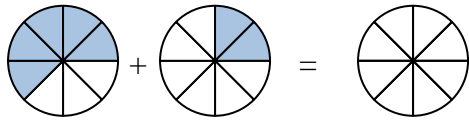
5. _____

6)



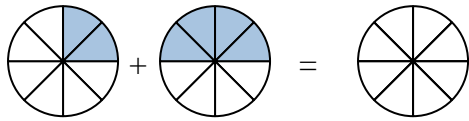
6. _____

7)



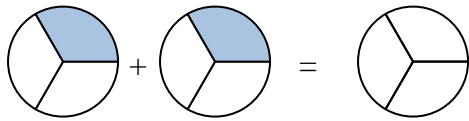
7. _____

8)



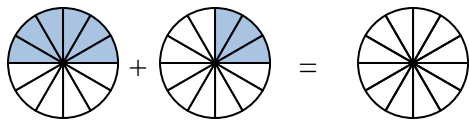
8. _____

9)



9. _____

10)

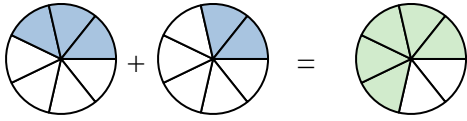


10. _____

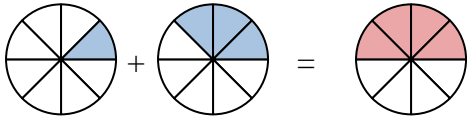


Scrivi numericamente la frazione rappresentata.

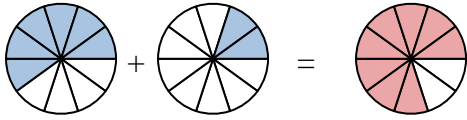
Es)



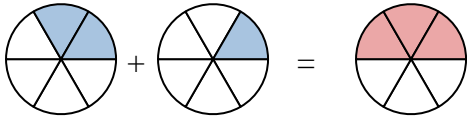
1)



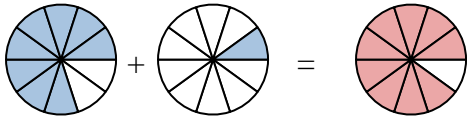
2)



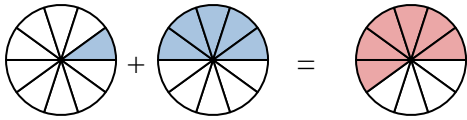
3)



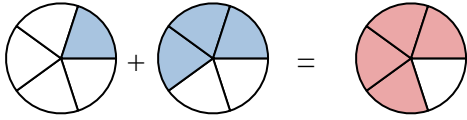
4)



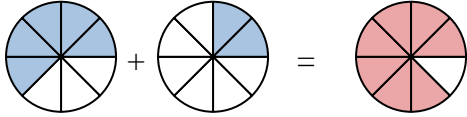
5)



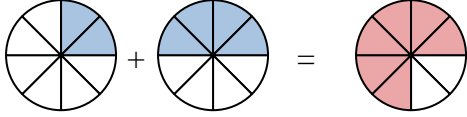
6)



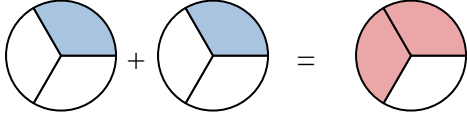
7)



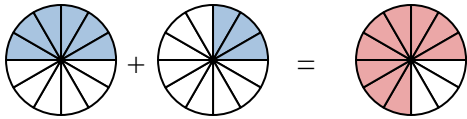
8)



9)



10)

**Risposte**

Es.	$\frac{3}{7}$	$\frac{2}{7}$	$\frac{5}{7}$
1.	$\frac{1}{8}$	$\frac{3}{8}$	$\frac{4}{8}$
2.	$\frac{6}{10}$	$\frac{2}{10}$	$\frac{8}{10}$
3.	$\frac{2}{6}$	$\frac{1}{6}$	$\frac{3}{6}$
4.	$\frac{8}{10}$	$\frac{1}{10}$	$\frac{9}{10}$
5.	$\frac{1}{10}$	$\frac{5}{10}$	$\frac{6}{10}$
6.	$\frac{1}{5}$	$\frac{3}{5}$	$\frac{4}{5}$
7.	$\frac{5}{8}$	$\frac{2}{8}$	$\frac{7}{8}$
8.	$\frac{2}{8}$	$\frac{4}{8}$	$\frac{6}{8}$
9.	$\frac{1}{3}$	$\frac{1}{3}$	$\frac{2}{3}$
10.	$\frac{6}{12}$	$\frac{3}{12}$	$\frac{9}{12}$