



Determina quale lettera rappresenta graficamente la somma numerica.

1)  $\frac{2}{5} + \frac{3}{5}$

3)  $\frac{1}{4} + \frac{3}{4}$

5)  $\frac{5}{10} + \frac{1}{10}$

7)  $\frac{2}{6} + \frac{2}{6}$

9)  $\frac{1}{2} + \frac{1}{2}$

11)  $\frac{1}{3} + \frac{2}{3}$

13)  $\frac{4}{6} + \frac{2}{6}$

2)  $\frac{7}{8} + \frac{5}{8}$

4)  $\frac{5}{12} + \frac{2}{12}$

6)  $\frac{9}{12} + \frac{6}{12}$

8)  $\frac{3}{4} + \frac{3}{4}$

10)  $\frac{4}{5} + \frac{2}{5}$

12)  $\frac{4}{10} + \frac{4}{10}$

14)  $\frac{2}{4} + \frac{3}{4}$

**Risposte**

1. \_\_\_\_\_

2. \_\_\_\_\_

3. \_\_\_\_\_

4. \_\_\_\_\_

5. \_\_\_\_\_

6. \_\_\_\_\_

7. \_\_\_\_\_

8. \_\_\_\_\_

9. \_\_\_\_\_

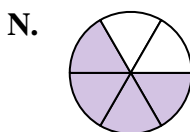
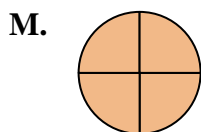
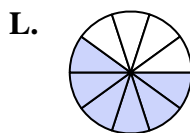
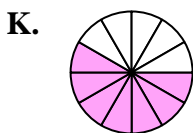
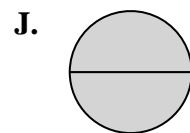
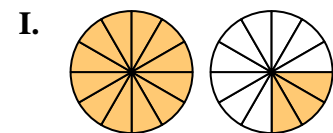
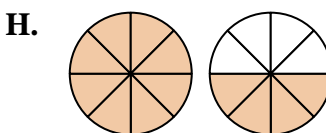
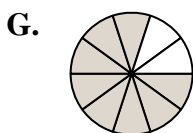
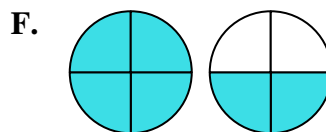
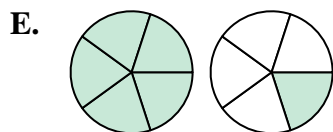
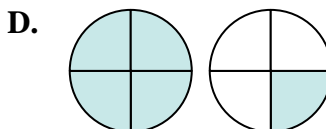
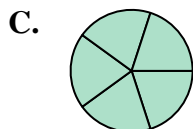
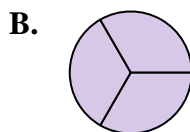
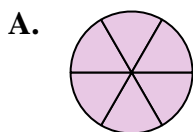
10. \_\_\_\_\_

11. \_\_\_\_\_

12. \_\_\_\_\_

13. \_\_\_\_\_

14. \_\_\_\_\_





Determina quale lettera rappresenta graficamente la somma numerica.

1)  $\frac{2}{5} + \frac{3}{5}$

3)  $\frac{1}{4} + \frac{3}{4}$

5)  $\frac{5}{10} + \frac{1}{10}$

7)  $\frac{2}{6} + \frac{2}{6}$

9)  $\frac{1}{2} + \frac{1}{2}$

11)  $\frac{1}{3} + \frac{2}{3}$

13)  $\frac{4}{6} + \frac{2}{6}$

2)  $\frac{7}{8} + \frac{5}{8}$

4)  $\frac{5}{12} + \frac{2}{12}$

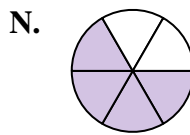
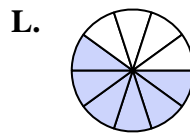
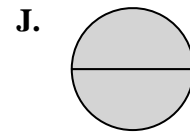
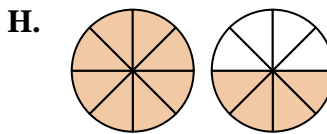
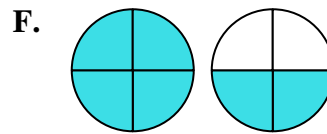
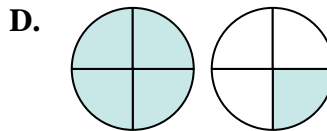
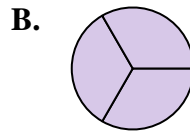
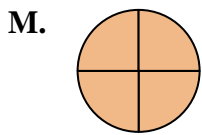
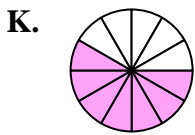
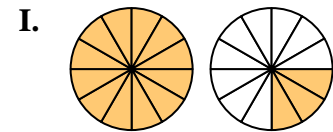
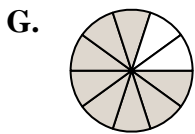
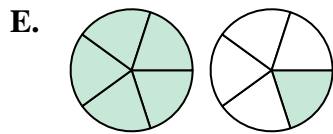
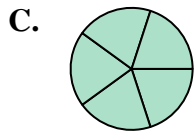
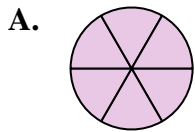
6)  $\frac{9}{12} + \frac{6}{12}$

8)  $\frac{3}{4} + \frac{3}{4}$

10)  $\frac{4}{5} + \frac{2}{5}$

12)  $\frac{4}{10} + \frac{4}{10}$

14)  $\frac{2}{4} + \frac{3}{4}$

**Risposte**

1. **C**  $\frac{5}{5}$

2. **H**  $1\frac{4}{8}$

3. **M**  $\frac{4}{4}$

4. **K**  $\frac{7}{12}$

5. **L**  $\frac{6}{10}$

6. **I**  $1\frac{3}{12}$

7. **N**  $\frac{4}{6}$

8. **F**  $1\frac{2}{4}$

9. **J**  $\frac{2}{2}$

10. **E**  $1\frac{1}{5}$

11. **B**  $\frac{3}{3}$

12. **G**  $\frac{8}{10}$

13. **A**  $\frac{6}{6}$

14. **D**  $1\frac{1}{4}$