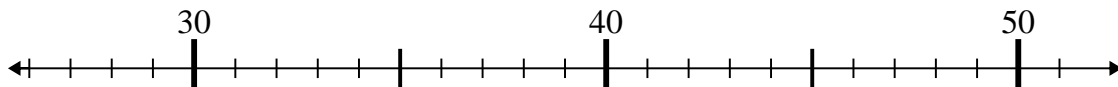


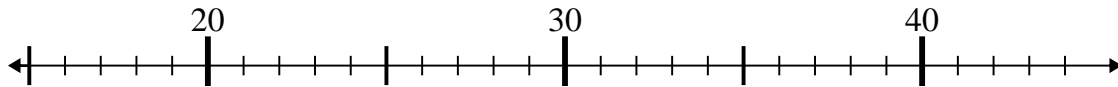


Usa la linea numerata per risolvere il problema.

1)  $32 - 5 =$



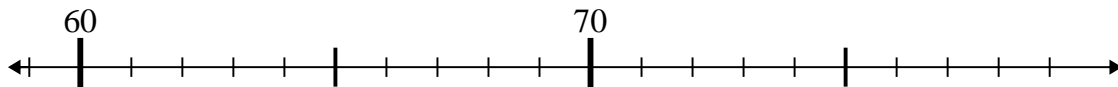
2)  $16 + 7 =$



3)  $25 + 12 =$



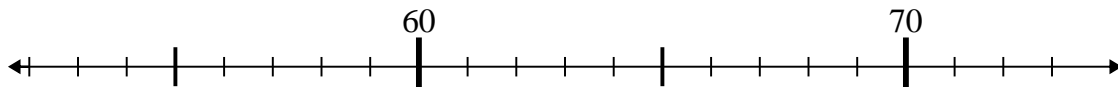
4)  $75 - 14 =$



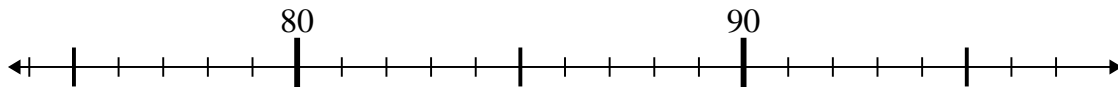
5)  $28 + 26 =$



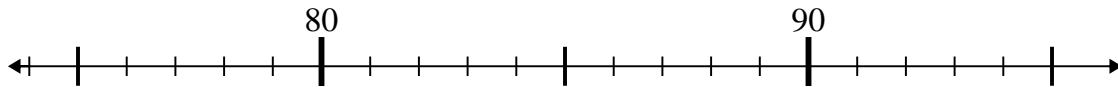
6)  $65 - 10 =$



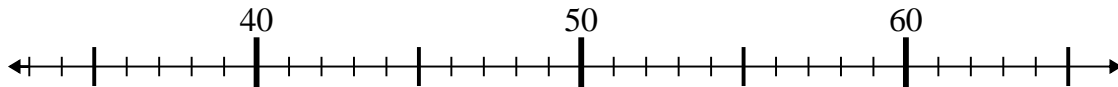
7)  $81 - 2 =$



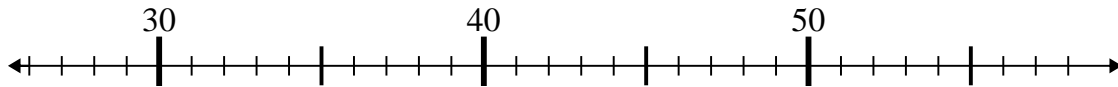
8)  $95 - 8 =$



9)  $48 - 11 =$



10)  $32 + 18 =$



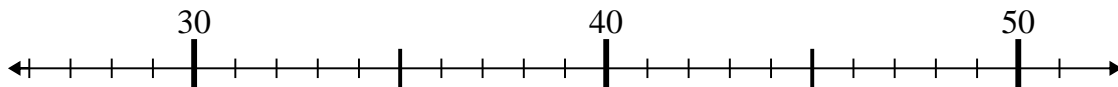
**Risposte**

1. \_\_\_\_\_
2. \_\_\_\_\_
3. \_\_\_\_\_
4. \_\_\_\_\_
5. \_\_\_\_\_
6. \_\_\_\_\_
7. \_\_\_\_\_
8. \_\_\_\_\_
9. \_\_\_\_\_
10. \_\_\_\_\_

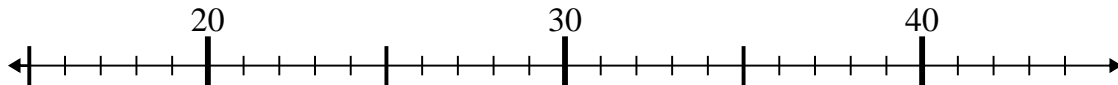


Usa la linea numerata per risolvere il problema.

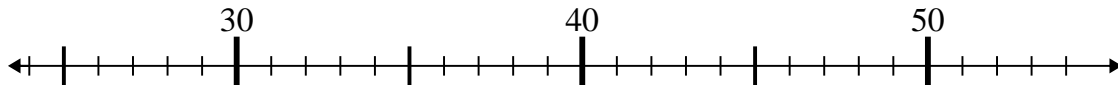
1)  $32 - 5 =$



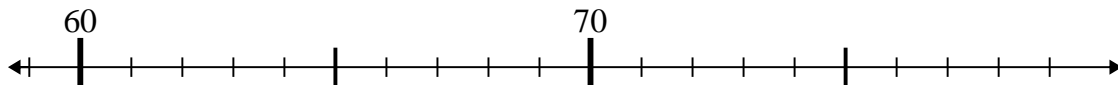
2)  $16 + 7 =$



3)  $25 + 12 =$



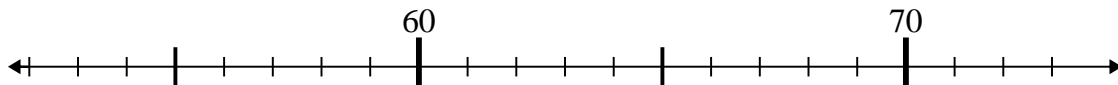
4)  $75 - 14 =$



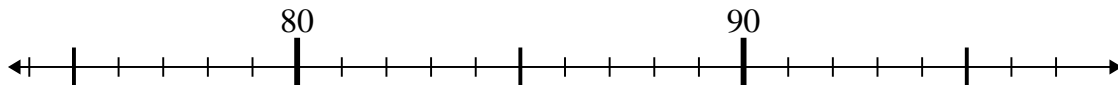
5)  $28 + 26 =$



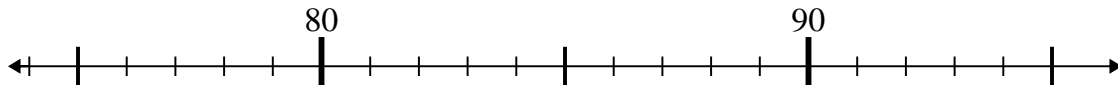
6)  $65 - 10 =$



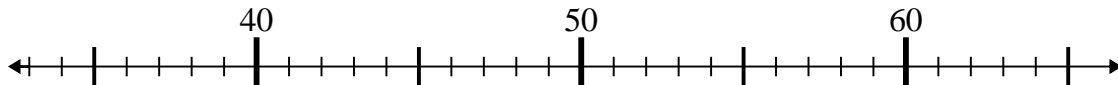
7)  $81 - 2 =$



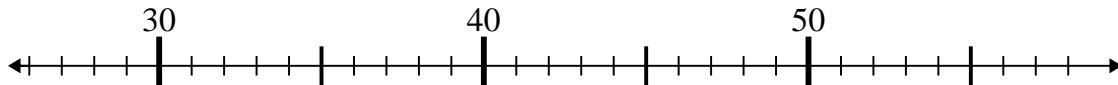
8)  $95 - 8 =$



9)  $48 - 11 =$



10)  $32 + 18 =$



**Risposte**

1. 27

2. 23

3. 37

4. 61

5. 54

6. 55

7. 79

8. 87

9. 37

10. 50