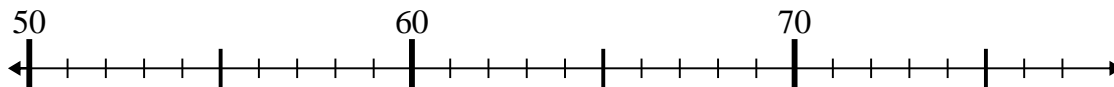


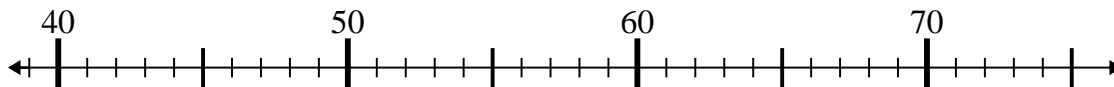


Usa la linea numerata per risolvere il problema.

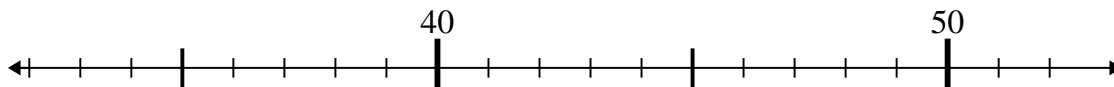
1)  $70 - 16 =$



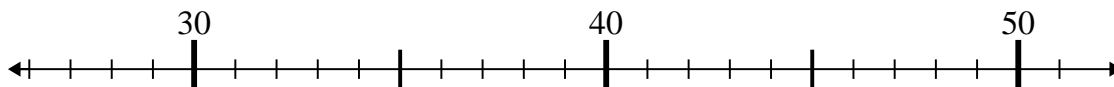
2)  $39 + 6 =$



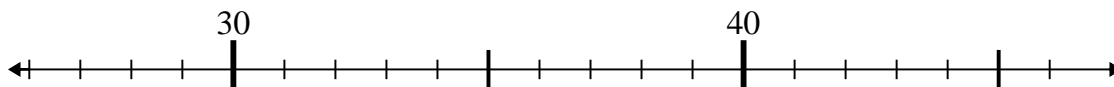
3)  $46 + 3 =$



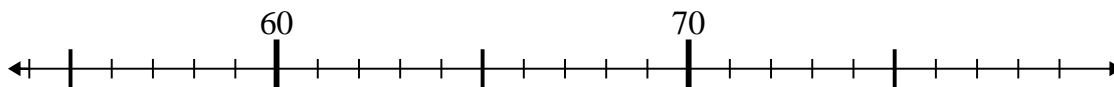
4)  $31 + 8 =$



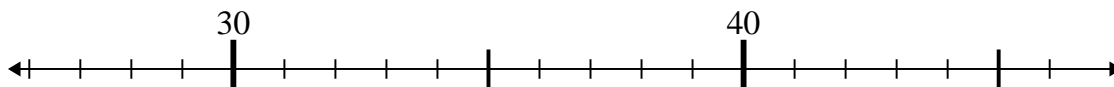
5)  $36 - 1 =$



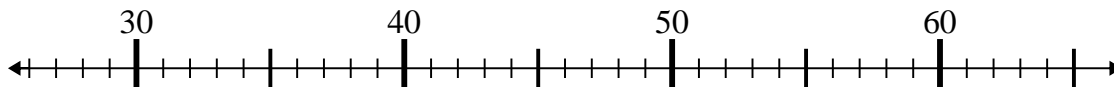
6)  $70 + 8 =$



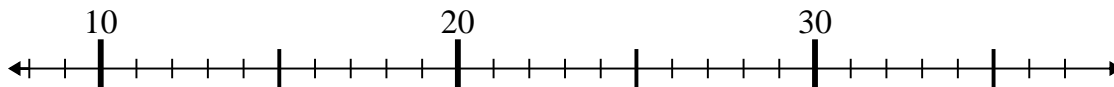
7)  $46 - 1 =$



8)  $27 + 8 =$



9)  $18 + 1 =$



10)  $25 + 3 =$



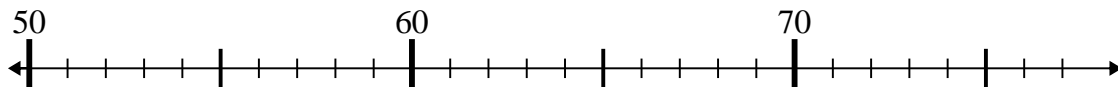
**Risposte**

1. \_\_\_\_\_
2. \_\_\_\_\_
3. \_\_\_\_\_
4. \_\_\_\_\_
5. \_\_\_\_\_
6. \_\_\_\_\_
7. \_\_\_\_\_
8. \_\_\_\_\_
9. \_\_\_\_\_
10. \_\_\_\_\_

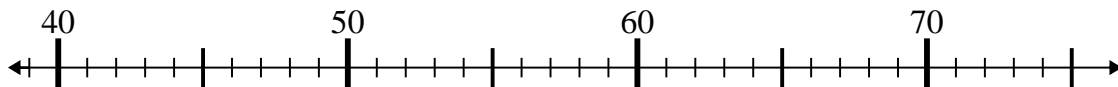


Usa la linea numerata per risolvere il problema.

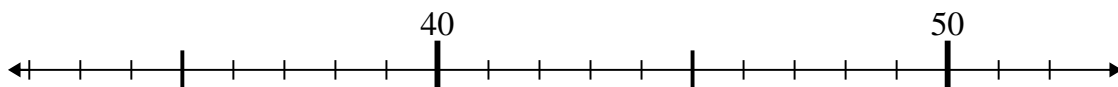
1)  $70 - 16 =$



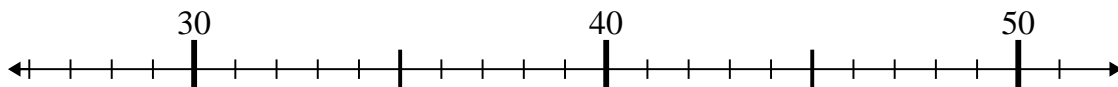
2)  $39 + 6 =$



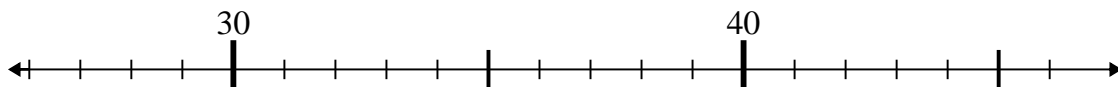
3)  $46 + 3 =$



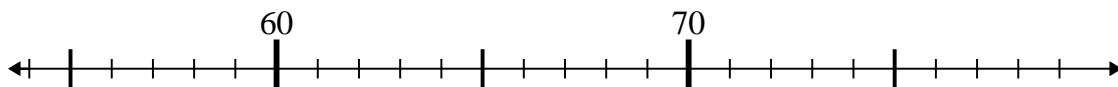
4)  $31 + 8 =$



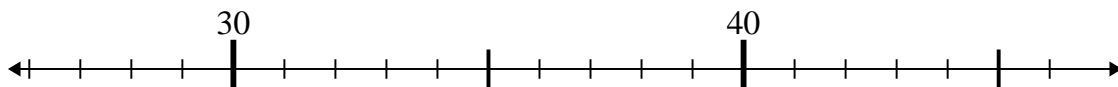
5)  $36 - 1 =$



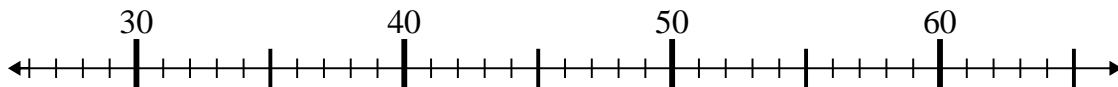
6)  $70 + 8 =$



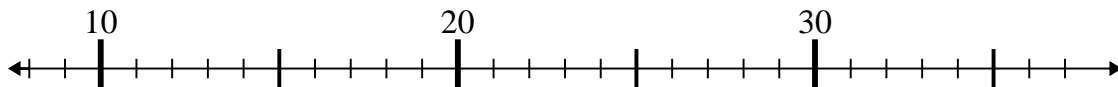
7)  $46 - 1 =$



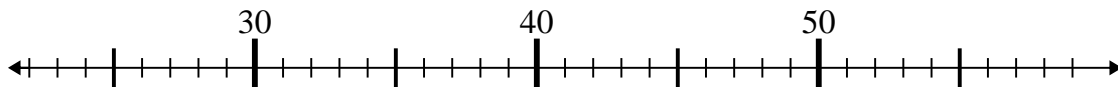
8)  $27 + 8 =$



9)  $18 + 1 =$



10)  $25 + 3 =$



**Risposte**

1. 54

2. 45

3. 49

4. 39

5. 35

6. 78

7. 45

8. 35

9. 19

10. 28