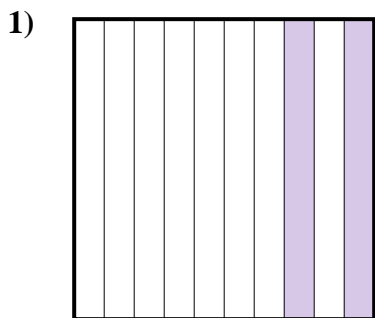


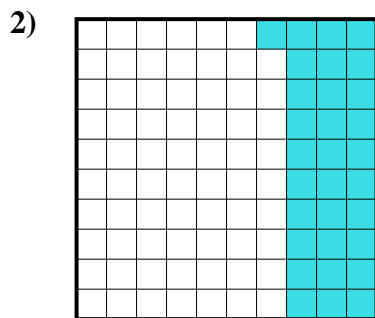


Determina quale lettera rappresenta la quantità colorata del tutto.

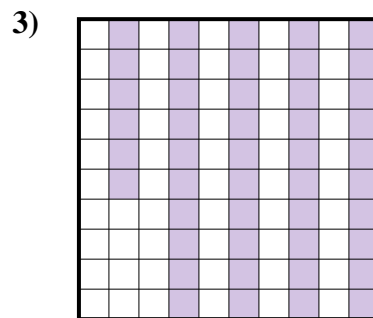
Risposte



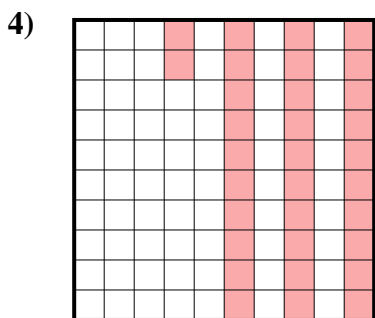
- A. 0,02
- B. 2
- C. 200,0
- D. 0,2



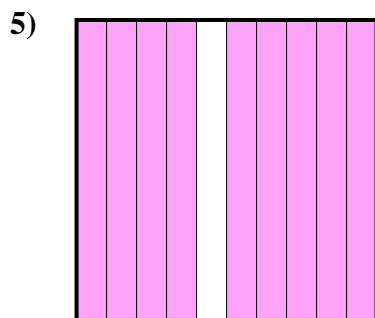
- A. 310,0
- B. 0,31
- C. 0,031
- D. 310,00



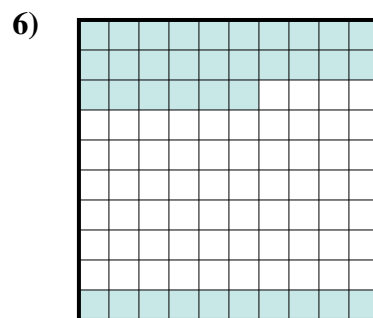
- A. 4,6
- B. 460,00
- C. 0,46
- D. 46



- A. 32
- B. 0,32
- C. 0,032
- D. 3,2




- A. 900,0
- B. 0,9
- C. 900,00
- D. 90



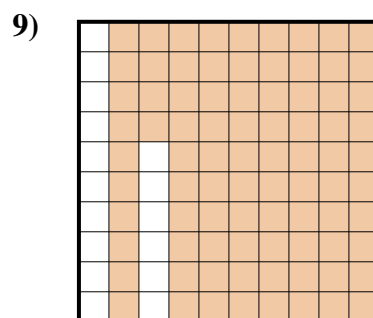
- A. 0,036
- B. 36
- C. 0,36
- D. 3,6



- A. 0,3
- B. 3
- C. 0,03
- D. 300,0



- A. 0,4
- B. 4
- C. 400,0
- D. 40



- A. 8,4
- B. 840,00
- C. 0,84
- D. 0,084

1. _____

2. _____

3. _____

4. _____

5. _____

6. _____

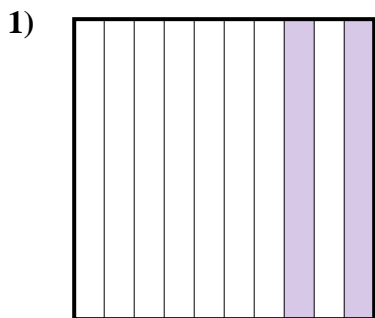
7. _____

8. _____

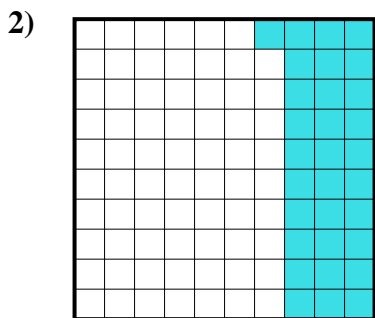
9. _____



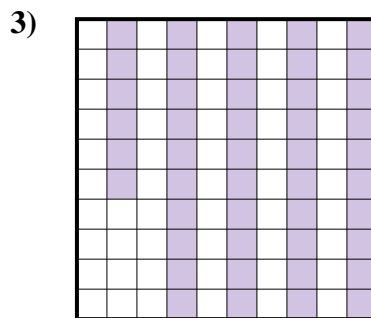
Determina quale lettera rappresenta la quantità colorata del tutto.



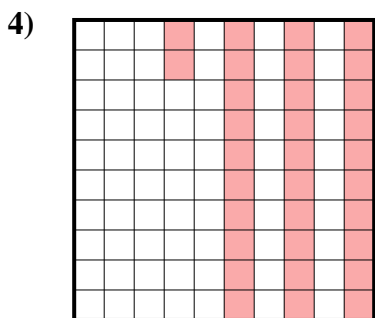
- A. 0,02
- B. 2
- C. 200,0
- D. 0,2



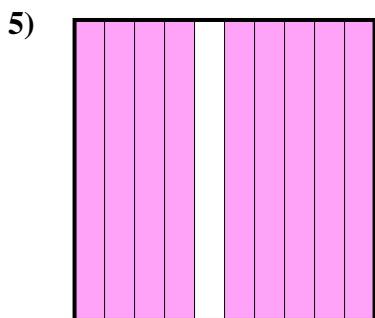
- A. 310,0
- B. 0,31
- C. 0,031
- D. 310,00



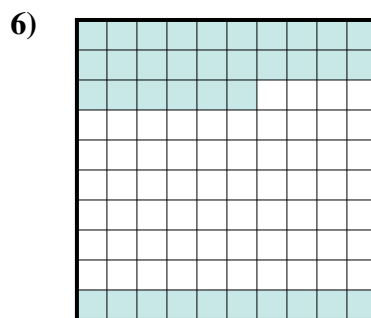
- A. 4,6
- B. 460,00
- C. 0,46
- D. 46



- A. 32
- B. 0,32
- C. 0,032
- D. 3,2



- A. 900,0
- B. 0,9
- C. 900,00
- D. 90



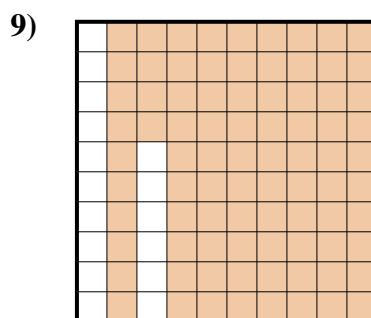
- A. 0,036
- B. 36
- C. 0,36
- D. 3,6



- A. 0,3
- B. 3
- C. 0,03
- D. 300,0



- A. 0,4
- B. 4
- C. 400,0
- D. 40



- A. 8,4
- B. 840,00
- C. 0,84
- D. 0,084

Risposte

- 1. **D**
- 2. **B**
- 3. **C**
- 4. **B**
- 5. **B**
- 6. **C**
- 7. **A**
- 8. **A**
- 9. **C**