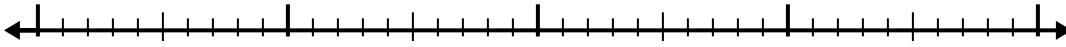


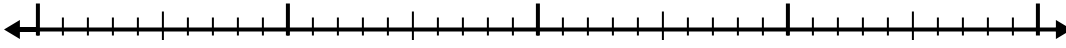


Usa la linea dei numeri per risolvere ogni problema.

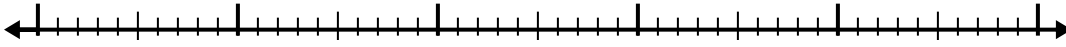
1)  $5,9 - 1,3 =$



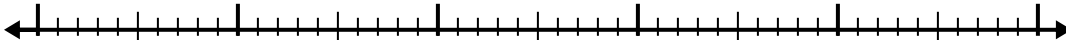
2)  $8,6 - 1,7 =$



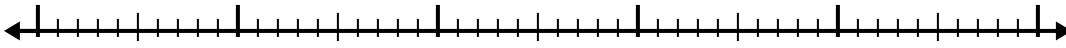
3)  $9,7 - 3,4 =$



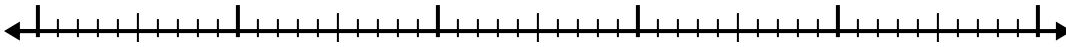
4)  $4,7 - 3,6 =$



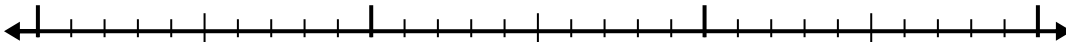
5)  $10 - 3,8 =$



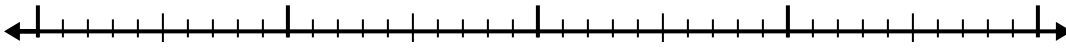
6)  $9,7 - 2,5 =$



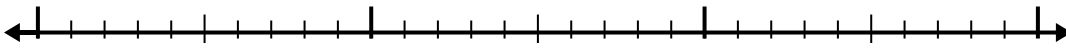
7)  $9,7 - 1,7 =$



8)  $4,5 - 2,3 =$



9)  $8,8 - 1,9 =$



10)  $9,7 - 1,6 =$



**Risposte**

1. \_\_\_\_\_

2. \_\_\_\_\_

3. \_\_\_\_\_

4. \_\_\_\_\_

5. \_\_\_\_\_

6. \_\_\_\_\_

7. \_\_\_\_\_

8. \_\_\_\_\_

9. \_\_\_\_\_

10. \_\_\_\_\_

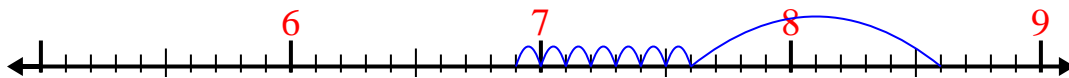


Usa la linea dei numeri per risolvere ogni problema.

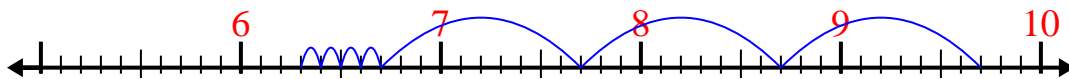
1)  $5,9 - 1,3 =$



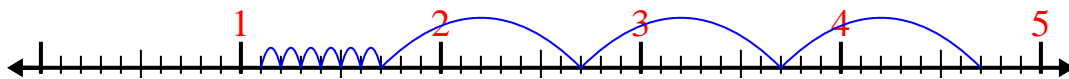
2)  $8,6 - 1,7 =$



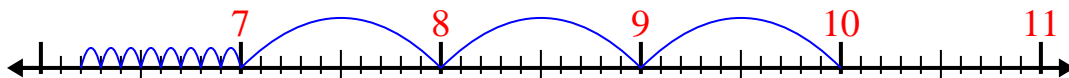
3)  $9,7 - 3,4 =$



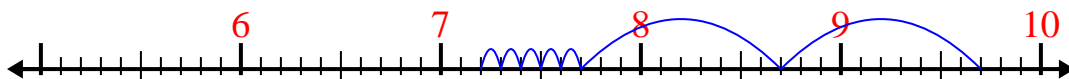
4)  $4,7 - 3,6 =$



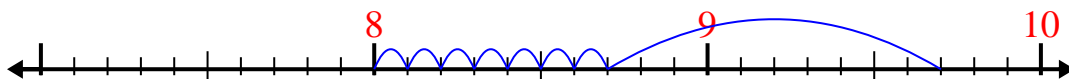
5)  $10 - 3,8 =$



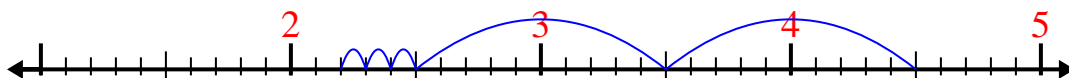
6)  $9,7 - 2,5 =$



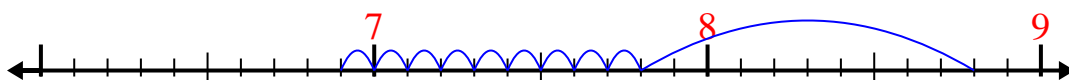
7)  $9,7 - 1,7 =$



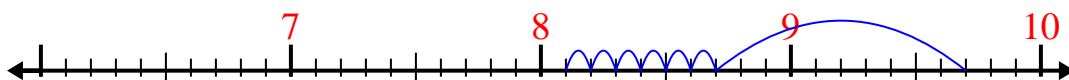
8)  $4,5 - 2,3 =$



9)  $8,8 - 1,9 =$



10)  $9,7 - 1,6 =$



**Risposte**

1. 4,6

2. 6,9

3. 6,3

4. 1,1

5. 6,2

6. 7,2

7. 8

8. 2,2

9. 6,9

10. 8,1