


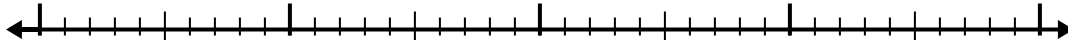


Usa la linea dei numeri per risolvere ogni problema.

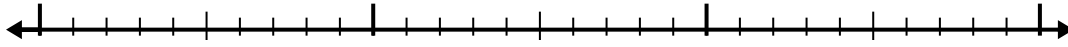
1)  $5,5 - 3,4 =$



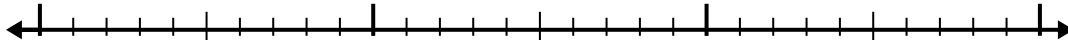
2)  $4,6 - 2,1 =$



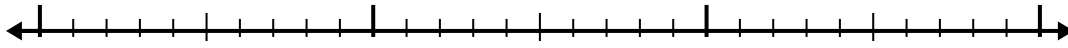
3)  $8,1 - 1,2 =$



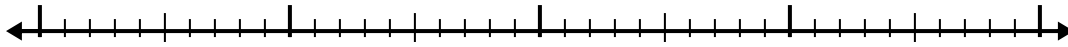
4)  $8,1 - 1,3 =$



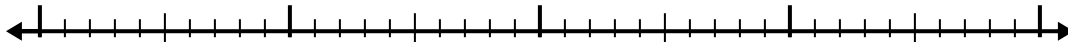
5)  $8,9 - 1,8 =$



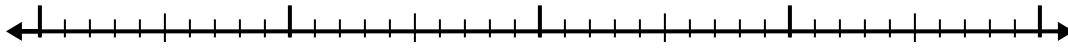
6)  $5,9 - 2,1 =$



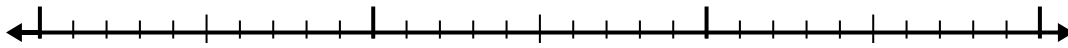
7)  $9,3 - 2,1 =$



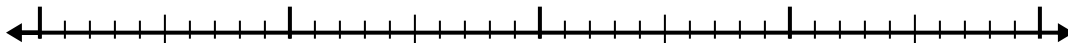
8)  $7,8 - 1,8 =$



9)  $5,6 - 1,1 =$



10)  $6 - 2,7 =$



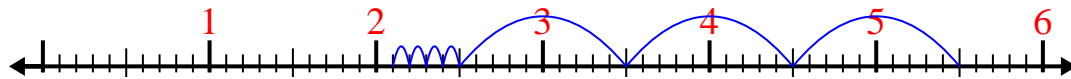
**Risposte**

- 1. \_\_\_\_\_
- 2. \_\_\_\_\_
- 3. \_\_\_\_\_
- 4. \_\_\_\_\_
- 5. \_\_\_\_\_
- 6. \_\_\_\_\_
- 7. \_\_\_\_\_
- 8. \_\_\_\_\_
- 9. \_\_\_\_\_
- 10. \_\_\_\_\_

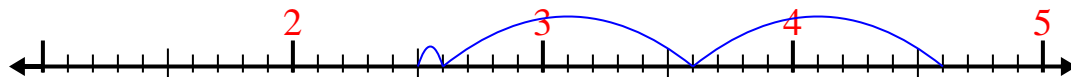


Usa la linea dei numeri per risolvere ogni problema.

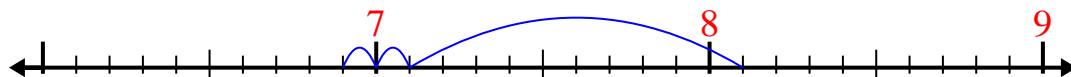
1)  $5,5 - 3,4 =$



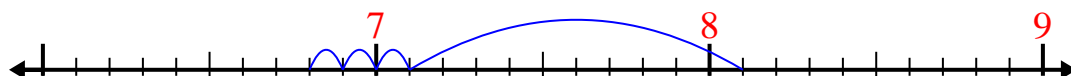
2)  $4,6 - 2,1 =$



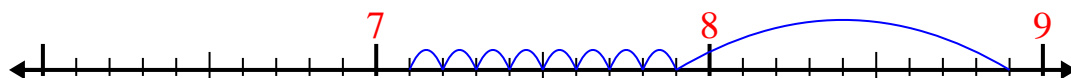
3)  $8,1 - 1,2 =$



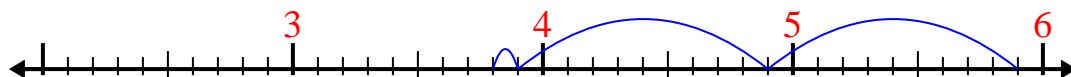
4)  $8,1 - 1,3 =$



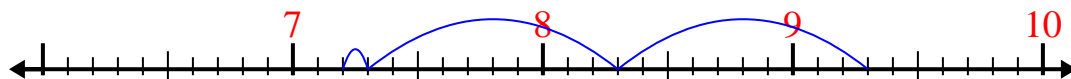
5)  $8,9 - 1,8 =$



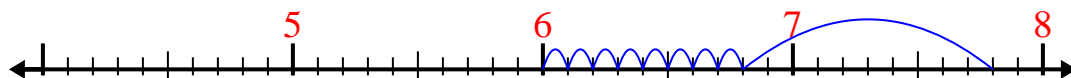
6)  $5,9 - 2,1 =$



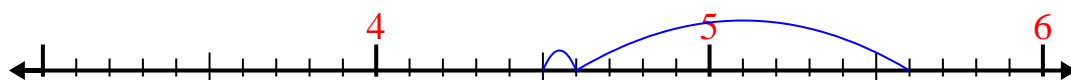
7)  $9,3 - 2,1 =$



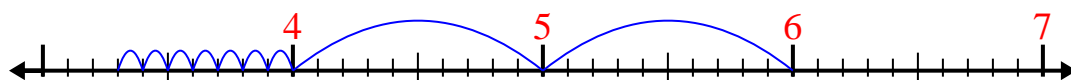
8)  $7,8 - 1,8 =$



9)  $5,6 - 1,1 =$



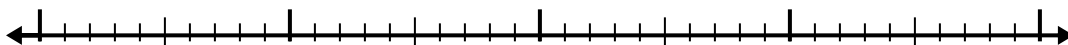
10)  $6 - 2,7 =$

**Risposte**1. 2,12. 2,53. 6,94. 6,85. 7,16. 3,87. 7,28. 69. 4,510. 3,3

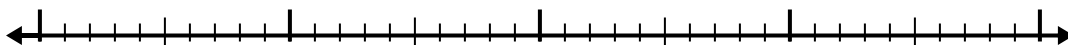


Usa la linea dei numeri per risolvere ogni problema.

1)  $7,8 - 1,7 =$




2)  $4,1 - 1,3 =$



3)  $6,9 - 1,3 =$



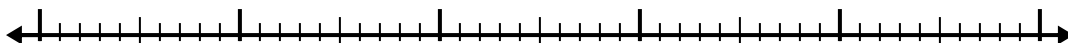
4)  $11,2 - 3,7 =$



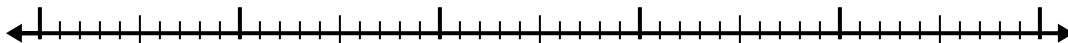
5)  $10,7 - 2,9 =$




6)  $5,9 - 2,5 =$




7)  $9,4 - 2,7 =$



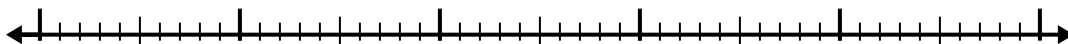
8)  $5,4 - 3,3 =$



9)  $2,7 - 1,7 =$



10)  $6,1 - 3,1 =$

**Risposte**

1. \_\_\_\_\_

2. \_\_\_\_\_

3. \_\_\_\_\_

4. \_\_\_\_\_

5. \_\_\_\_\_

6. \_\_\_\_\_

7. \_\_\_\_\_

8. \_\_\_\_\_

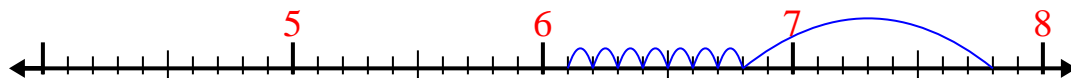
9. \_\_\_\_\_

10. \_\_\_\_\_

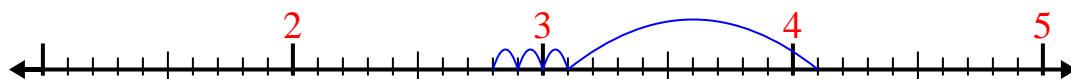


Usa la linea dei numeri per risolvere ogni problema.

1)  $7,8 - 1,7 =$



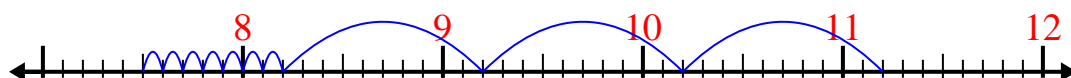
2)  $4,1 - 1,3 =$



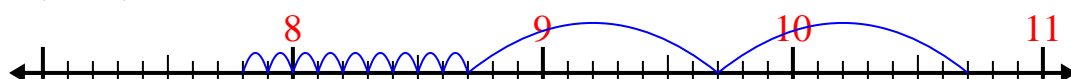
3)  $6,9 - 1,3 =$



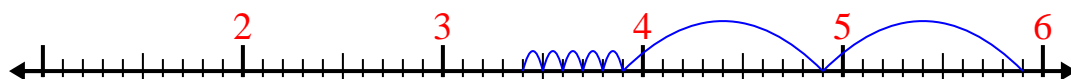
4)  $11,2 - 3,7 =$



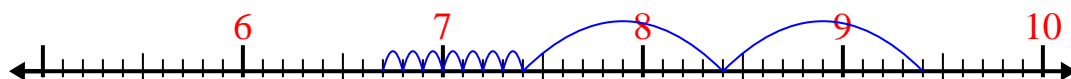
5)  $10,7 - 2,9 =$



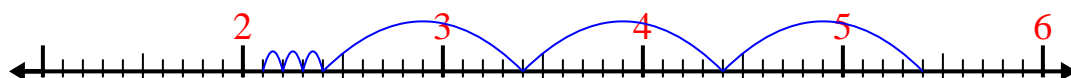
6)  $5,9 - 2,5 =$



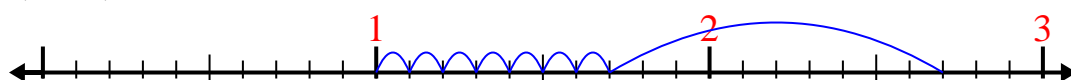
7)  $9,4 - 2,7 =$



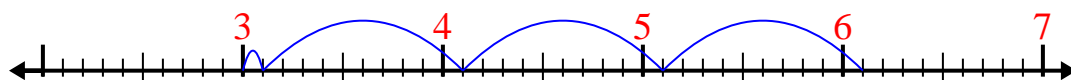
8)  $5,4 - 3,3 =$



9)  $2,7 - 1,7 =$



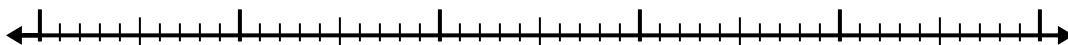
10)  $6,1 - 3,1 =$

**Risposte**1. 6,12. 2,83. 5,64. 7,55. 7,86. 3,47. 6,78. 2,19. 110. 3

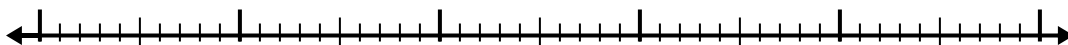


Usa la linea dei numeri per risolvere ogni problema.


1)  $6,2 - 3,6 =$



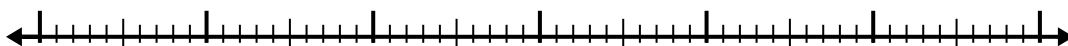
2)  $5,2 - 2,2 =$



3)  $3,3 - 2,2 =$



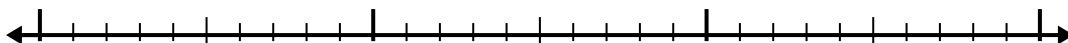
4)  $7,6 - 3,9 =$



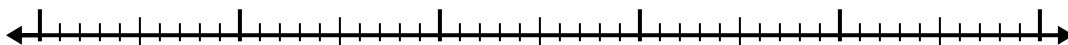
5)  $10,4 - 2,2 =$



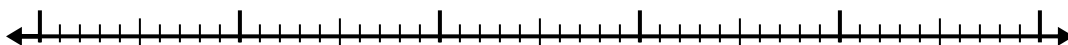
6)  $7,2 - 1,8 =$



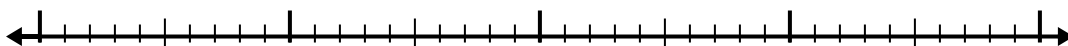
7)  $5,8 - 3,6 =$



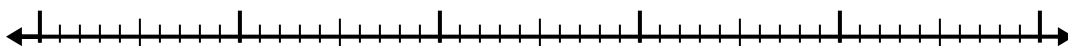
8)  $8,2 - 2,8 =$



9)  $5,7 - 2,2 =$



10)  $4,1 - 2,2 =$

**Risposte**

1. \_\_\_\_\_

2. \_\_\_\_\_

3. \_\_\_\_\_

4. \_\_\_\_\_

5. \_\_\_\_\_

6. \_\_\_\_\_

7. \_\_\_\_\_

8. \_\_\_\_\_

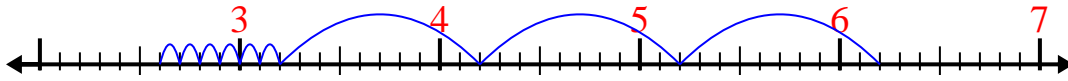
9. \_\_\_\_\_

10. \_\_\_\_\_

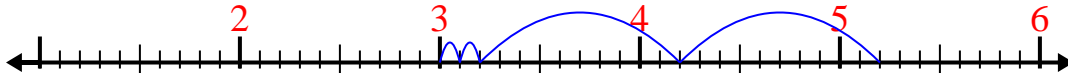


Usa la linea dei numeri per risolvere ogni problema.

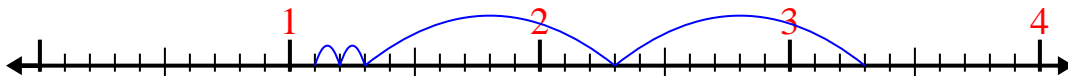
1)  $6,2 - 3,6 =$



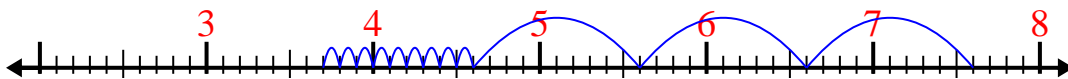
2)  $5,2 - 2,2 =$



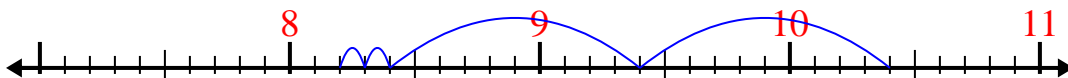
3)  $3,3 - 2,2 =$



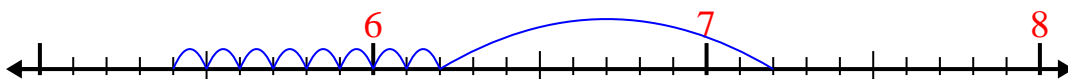
4)  $7,6 - 3,9 =$



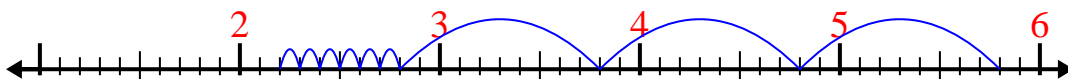
5)  $10,4 - 2,2 =$



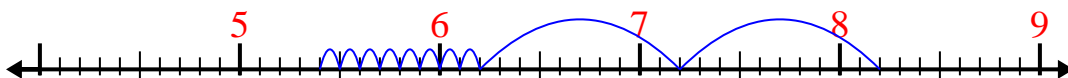
6)  $7,2 - 1,8 =$



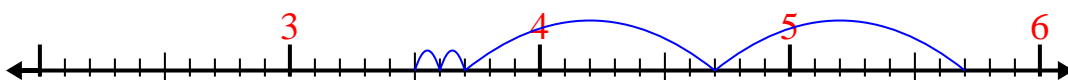
7)  $5,8 - 3,6 =$



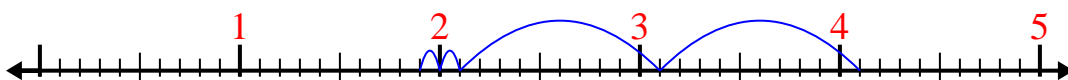
8)  $8,2 - 2,8 =$



9)  $5,7 - 2,2 =$



10)  $4,1 - 2,2 =$



**Risposte**

1. 2,6

2. 3

3. 1,1

4. 3,7

5. 8,2

6. 5,4

7. 2,2

8. 5,4

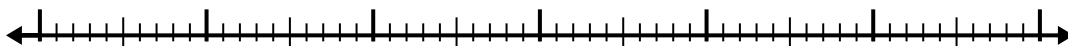
9. 3,5

10. 1,9

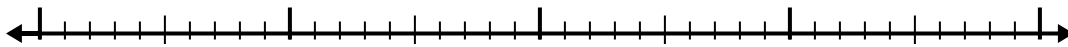


Usa la linea dei numeri per risolvere ogni problema.


1)  $5,8 - 3,1 =$



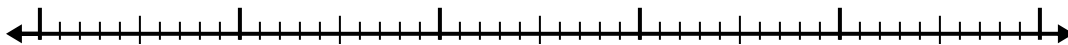
2)  $7,4 - 2,3 =$




3)  $10,3 - 3,1 =$



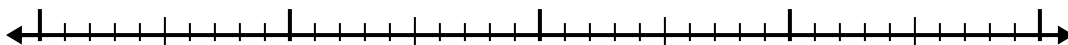
4)  $6,9 - 3,7 =$



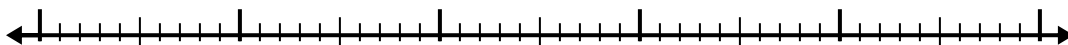
5)  $11,2 - 3,6 =$




6)  $4,5 - 2,7 =$



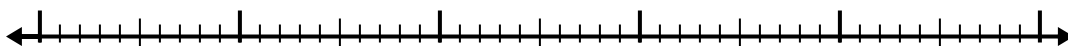
7)  $4,1 - 2,4 =$



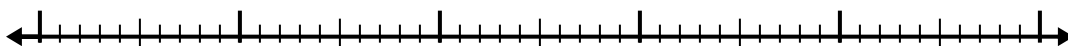
8)  $12,4 - 3,6 =$



9)  $11,5 - 2,6 =$



10)  $9,2 - 3,9 =$

**Risposte**

1. \_\_\_\_\_

2. \_\_\_\_\_

3. \_\_\_\_\_

4. \_\_\_\_\_

5. \_\_\_\_\_

6. \_\_\_\_\_

7. \_\_\_\_\_

8. \_\_\_\_\_

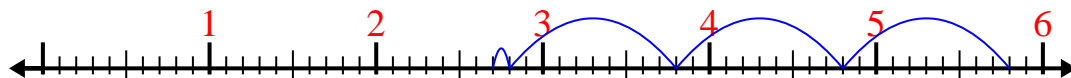
9. \_\_\_\_\_

10. \_\_\_\_\_

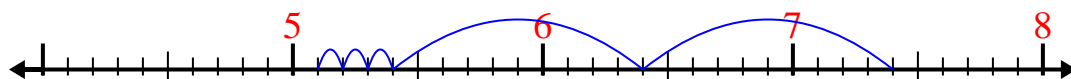


Usa la linea dei numeri per risolvere ogni problema.

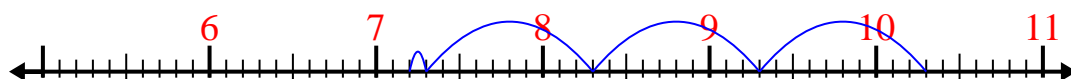
1)  $5,8 - 3,1 =$




2)  $7,4 - 2,3 =$



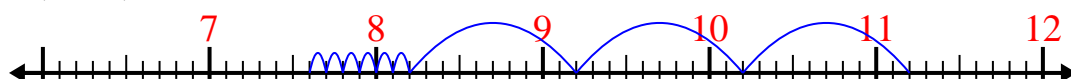
3)  $10,3 - 3,1 =$



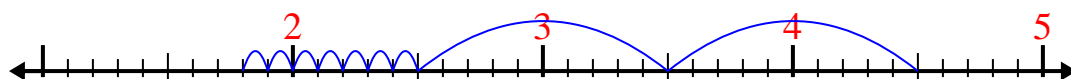
4)  $6,9 - 3,7 =$



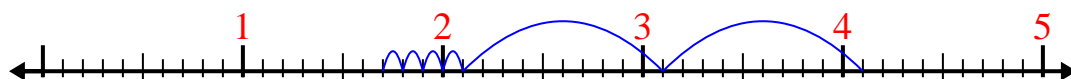
5)  $11,2 - 3,6 =$



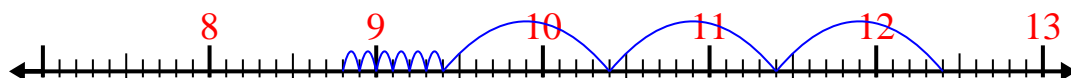
6)  $4,5 - 2,7 =$



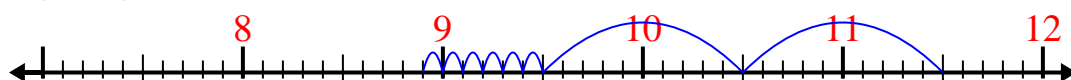
7)  $4,1 - 2,4 =$



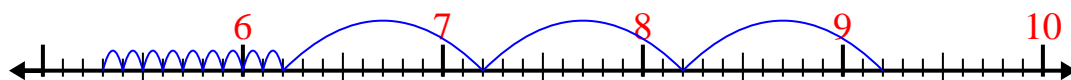
8)  $12,4 - 3,6 =$



9)  $11,5 - 2,6 =$



10)  $9,2 - 3,9 =$

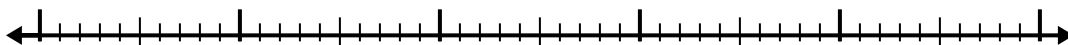
**Risposte**1. 2,72. 5,13. 7,24. 3,25. 7,66. 1,87. 1,78. 8,89. 8,910. 5,3



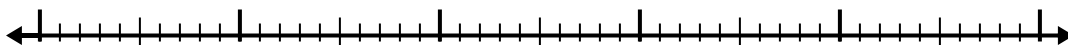


Usa la linea dei numeri per risolvere ogni problema.

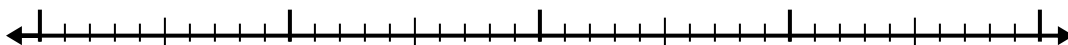
1)  $8,6 - 3,8 =$



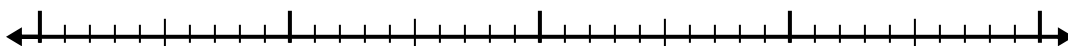
2)  $8,8 - 2,7 =$



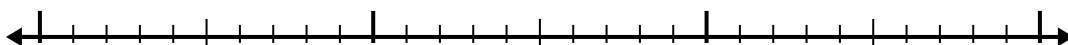
3)  $6,8 - 1,3 =$



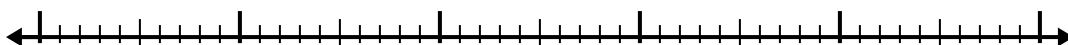
4)  $5,2 - 2,4 =$



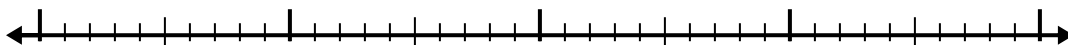
5)  $2,7 - 1,3 =$




6)  $7 - 2,4 =$



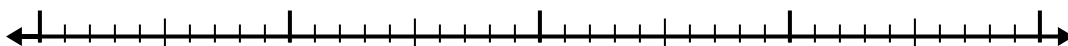
7)  $10,5 - 2,5 =$



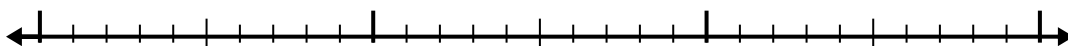
8)  $12,3 - 3,8 =$



9)  $4,2 - 2,7 =$



10)  $3 - 1,3 =$

**Risposte**

1. \_\_\_\_\_

2. \_\_\_\_\_

3. \_\_\_\_\_

4. \_\_\_\_\_

5. \_\_\_\_\_

6. \_\_\_\_\_

7. \_\_\_\_\_

8. \_\_\_\_\_

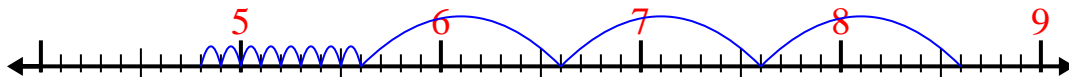
9. \_\_\_\_\_

10. \_\_\_\_\_

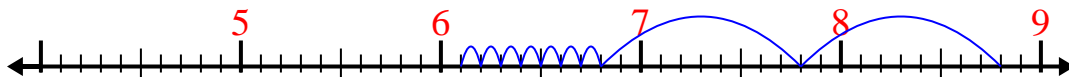


Usa la linea dei numeri per risolvere ogni problema.

1)  $8,6 - 3,8 =$



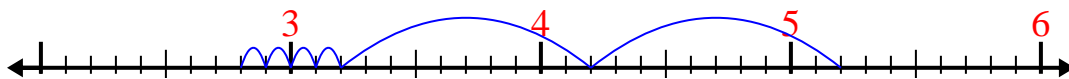
2)  $8,8 - 2,7 =$



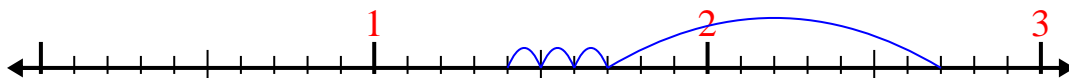
3)  $6,8 - 1,3 =$



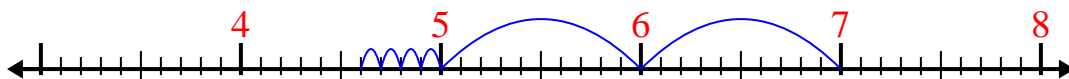
4)  $5,2 - 2,4 =$



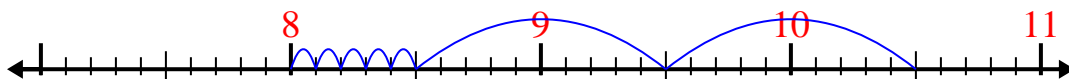
5)  $2,7 - 1,3 =$



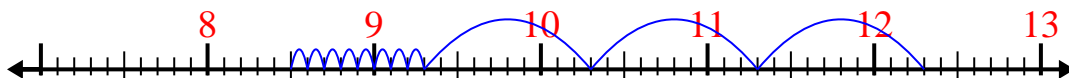
6)  $7 - 2,4 =$



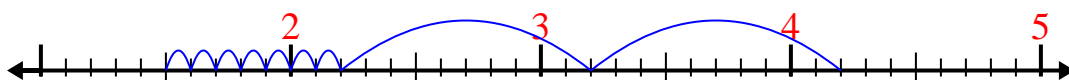
7)  $10,5 - 2,5 =$



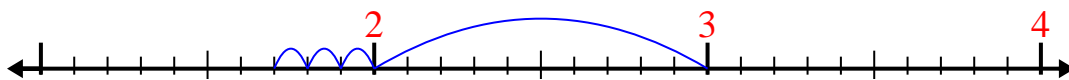
8)  $12,3 - 3,8 =$



9)  $4,2 - 2,7 =$



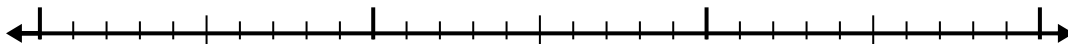
10)  $3 - 1,3 =$

**Risposte**1. 4,82. 6,13. 5,54. 2,85. 1,46. 4,67. 88. 8,59. 1,510. 1,7




Usa la linea dei numeri per risolvere ogni problema.

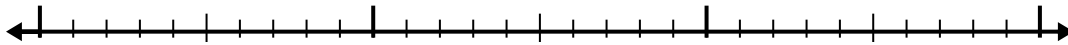
1)  $2,5 - 1,3 =$



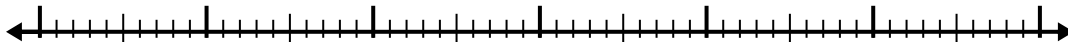
2)  $10,8 - 2,4 =$



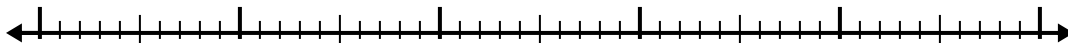
3)  $4,5 - 1,7 =$



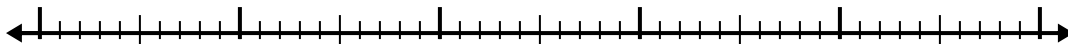
4)  $9,9 - 3,8 =$



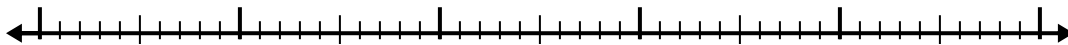
5)  $4,4 - 2,5 =$



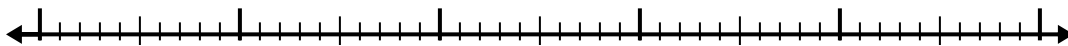
6)  $9,7 - 2,4 =$



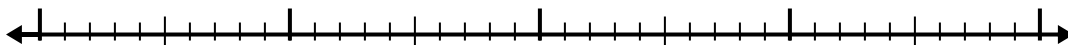
7)  $12,6 - 3,7 =$



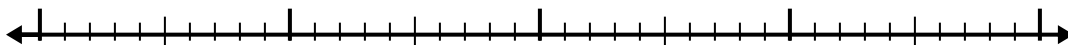
8)  $6,2 - 2,7 =$



9)  $7,7 - 1,6 =$



10)  $6,5 - 2,1 =$

**Risposte**

1. \_\_\_\_\_

2. \_\_\_\_\_

3. \_\_\_\_\_

4. \_\_\_\_\_

5. \_\_\_\_\_

6. \_\_\_\_\_

7. \_\_\_\_\_

8. \_\_\_\_\_

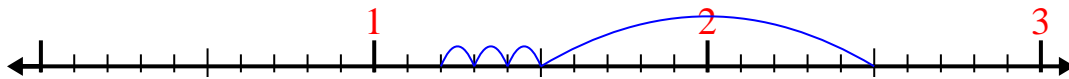
9. \_\_\_\_\_

10. \_\_\_\_\_

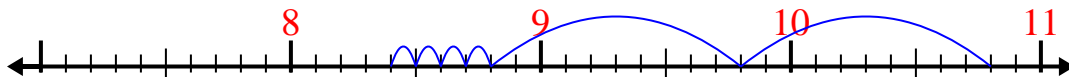


Usa la linea dei numeri per risolvere ogni problema.

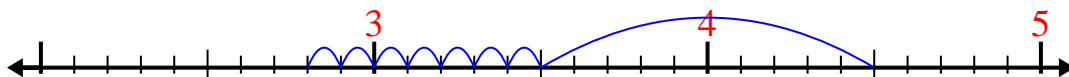
1)  $2,5 - 1,3 =$



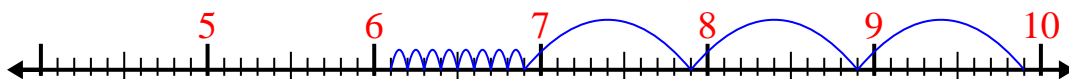
2)  $10,8 - 2,4 =$



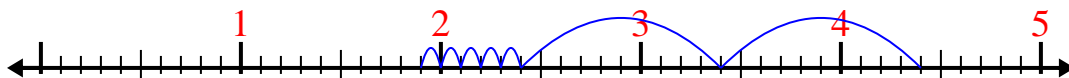
3)  $4,5 - 1,7 =$



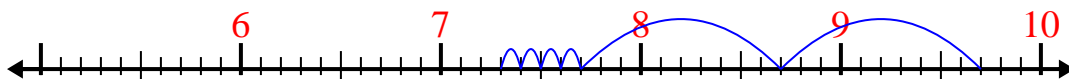
4)  $9,9 - 3,8 =$



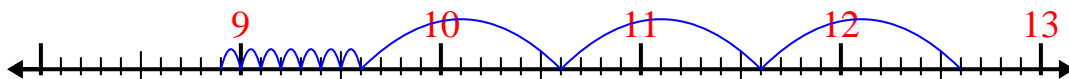
5)  $4,4 - 2,5 =$



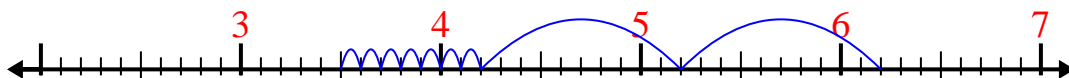
6)  $9,7 - 2,4 =$



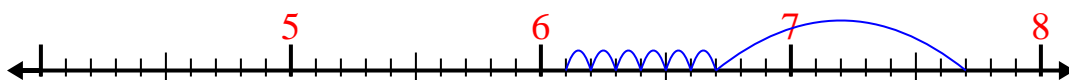
7)  $12,6 - 3,7 =$



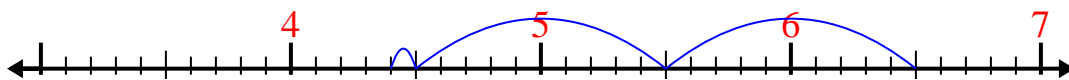
8)  $6,2 - 2,7 =$



9)  $7,7 - 1,6 =$



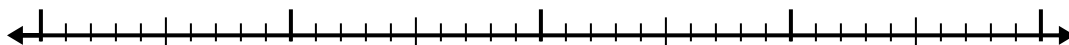
10)  $6,5 - 2,1 =$

**Risposte**1. 1,22. 8,43. 2,84. 6,15. 1,96. 7,37. 8,98. 3,59. 6,110. 4,4

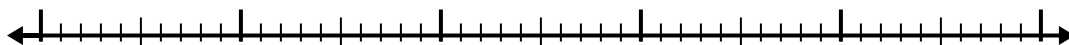


Usa la linea dei numeri per risolvere ogni problema.


1)  $9,6 - 2,2 =$



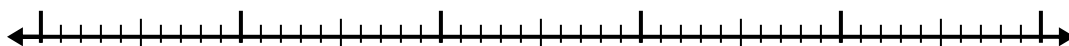
2)  $7,7 - 2,3 =$



3)  $7,6 - 2,9 =$



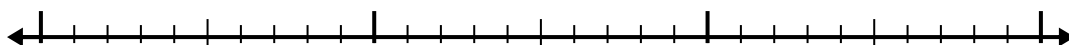
4)  $8,1 - 3,7 =$




5)  $4,5 - 2,3 =$




6)  $5,2 - 1,3 =$



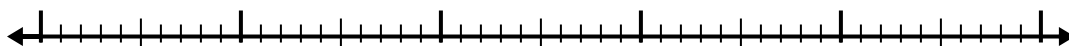
7)  $4,9 - 3,9 =$



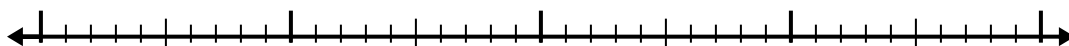
8)  $7,9 - 2,1 =$



9)  $8,6 - 2,3 =$



10)  $10,2 - 2,9 =$

**Risposte**

1. \_\_\_\_\_

2. \_\_\_\_\_

3. \_\_\_\_\_

4. \_\_\_\_\_

5. \_\_\_\_\_

6. \_\_\_\_\_

7. \_\_\_\_\_

8. \_\_\_\_\_

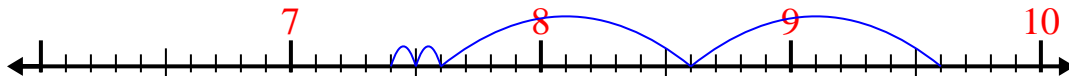
9. \_\_\_\_\_

10. \_\_\_\_\_

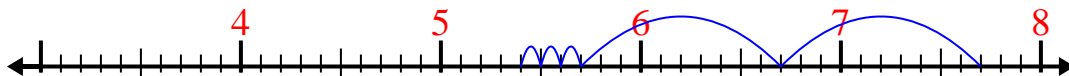


Usa la linea dei numeri per risolvere ogni problema.

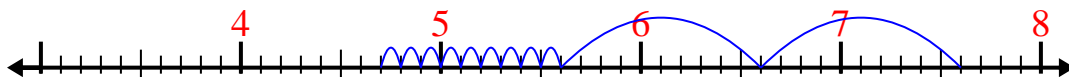
1)  $9,6 - 2,2 =$




2)  $7,7 - 2,3 =$



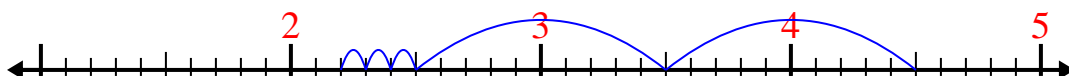
3)  $7,6 - 2,9 =$



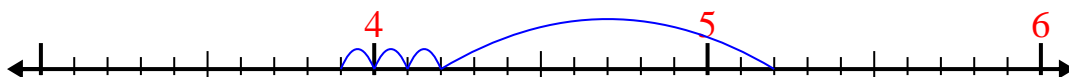
4)  $8,1 - 3,7 =$



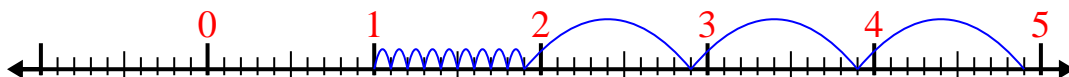
5)  $4,5 - 2,3 =$



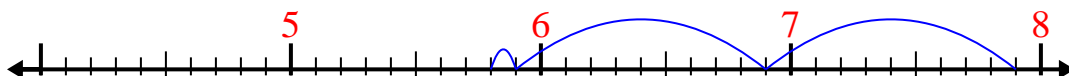
6)  $5,2 - 1,3 =$



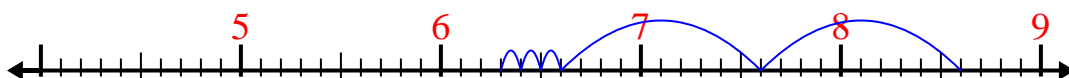
7)  $4,9 - 3,9 =$



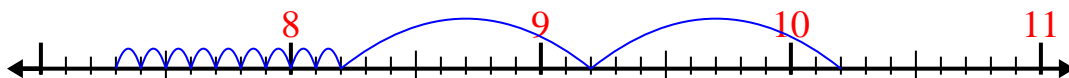
8)  $7,9 - 2,1 =$



9)  $8,6 - 2,3 =$



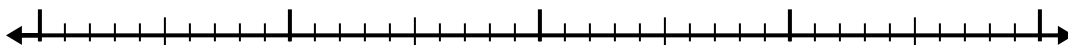
10)  $10,2 - 2,9 =$

**Risposte**1. 7,42. 5,43. 4,74. 4,45. 2,26. 3,97. 18. 5,89. 6,310. 7,3

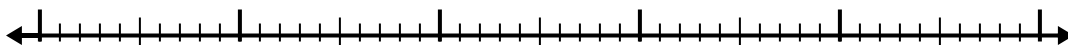


Usa la linea dei numeri per risolvere ogni problema.


1)  $7 - 2,6 =$



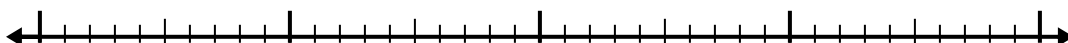
2)  $6,2 - 2,7 =$




3)  $2,5 - 1,2 =$



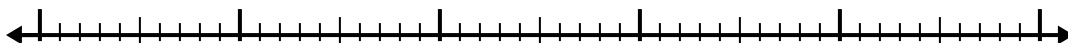
4)  $5,2 - 1,9 =$



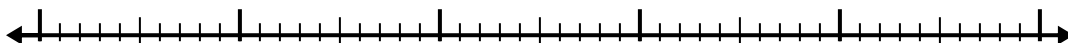
5)  $12,3 - 3,4 =$



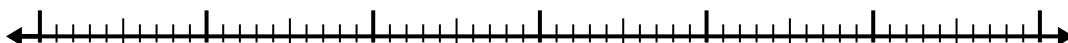
6)  $11 - 2,7 =$




7)  $8 - 2,7 =$




8)  $5 - 3,1 =$



9)  $10,9 - 2,3 =$



10)  $5,1 - 1,1 =$

**Risposte**

1. \_\_\_\_\_

2. \_\_\_\_\_

3. \_\_\_\_\_

4. \_\_\_\_\_

5. \_\_\_\_\_

6. \_\_\_\_\_

7. \_\_\_\_\_

8. \_\_\_\_\_

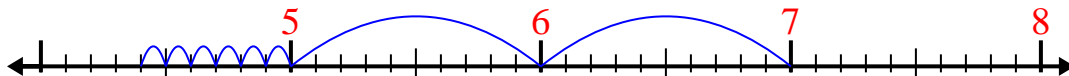
9. \_\_\_\_\_

10. \_\_\_\_\_

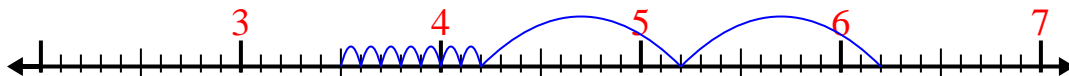


Usa la linea dei numeri per risolvere ogni problema.

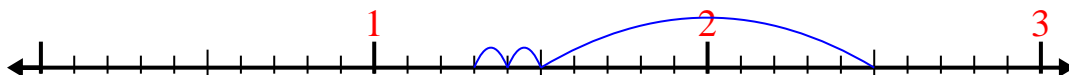
1)  $7 - 2,6 =$



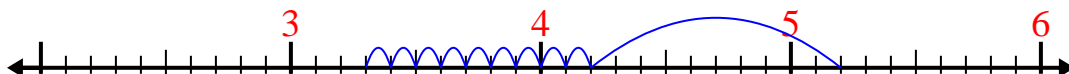
2)  $6,2 - 2,7 =$



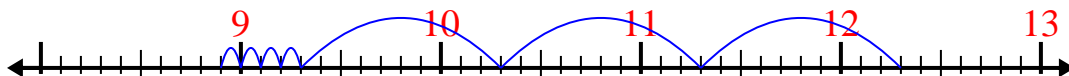
3)  $2,5 - 1,2 =$



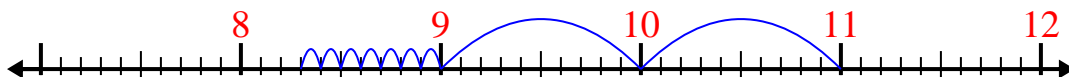
4)  $5,2 - 1,9 =$



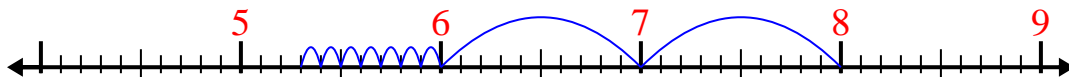
5)  $12,3 - 3,4 =$



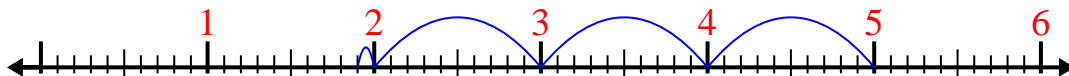
6)  $11 - 2,7 =$



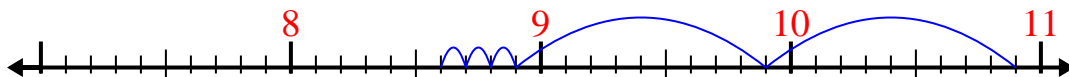
7)  $8 - 2,7 =$



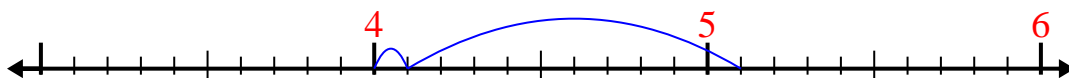
8)  $5 - 3,1 =$



9)  $10,9 - 2,3 =$



10)  $5,1 - 1,1 =$


**Risposte**1. 4,42. 3,53. 1,34. 3,35. 8,96. 8,37. 5,38. 1,99. 8,610. 4



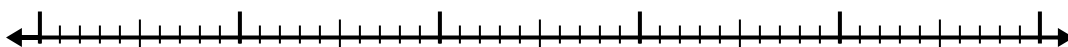


Usa la linea dei numeri per risolvere ogni problema.

1)  $9,7 - 3,2 =$



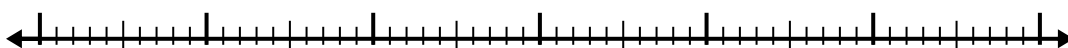
2)  $9,1 - 3,8 =$



3)  $4,2 - 1,1 =$



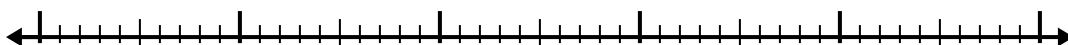
4)  $11,6 - 3,2 =$



5)  $6,9 - 1,2 =$




6)  $4,8 - 2,8 =$



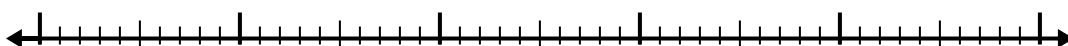
7)  $6 - 1,8 =$



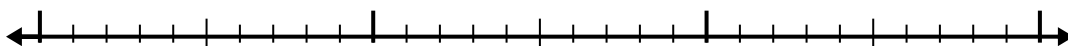
8)  $8 - 1,4 =$



9)  $8,2 - 3,9 =$



10)  $2,5 - 1,4 =$

**Risposte**

1. \_\_\_\_\_

2. \_\_\_\_\_

3. \_\_\_\_\_

4. \_\_\_\_\_

5. \_\_\_\_\_

6. \_\_\_\_\_

7. \_\_\_\_\_

8. \_\_\_\_\_

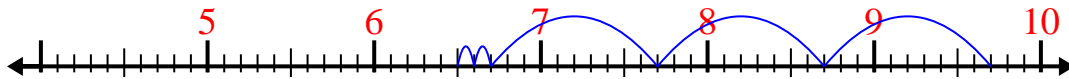
9. \_\_\_\_\_

10. \_\_\_\_\_




Usa la linea dei numeri per risolvere ogni problema.

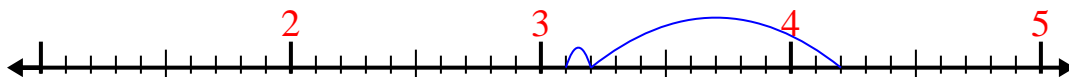
1)  $9,7 - 3,2 =$



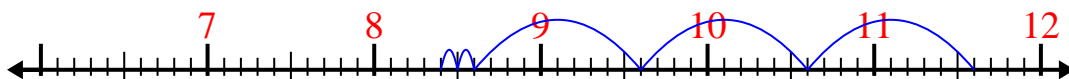
2)  $9,1 - 3,8 =$



3)  $4,2 - 1,1 =$



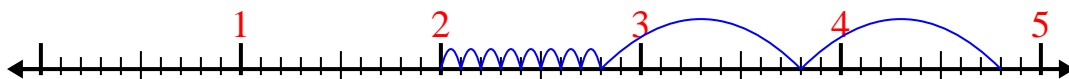
4)  $11,6 - 3,2 =$



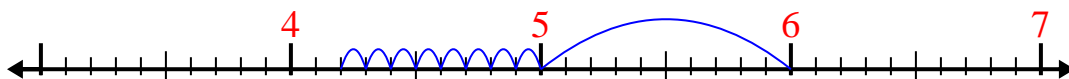
5)  $6,9 - 1,2 =$



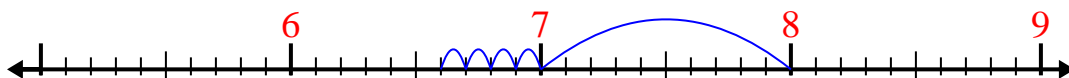
6)  $4,8 - 2,8 =$



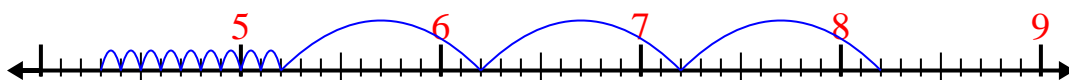
7)  $6 - 1,8 =$



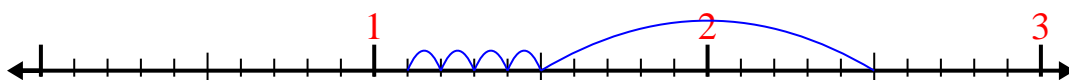
8)  $8 - 1,4 =$



9)  $8,2 - 3,9 =$



10)  $2,5 - 1,4 =$




**Risposte**

1. 6,5
2. 5,3
3. 3,1
4. 8,4
5. 5,7
6. 2
7. 4,2
8. 6,6
9. 4,3
10. 1,1

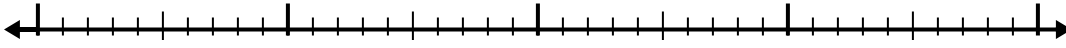


Usa la linea dei numeri per risolvere ogni problema.

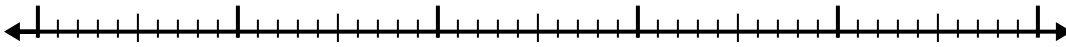
1)  $9,1 - 3,6 =$



2)  $8,1 - 1,6 =$



3)  $6,7 - 3,2 =$



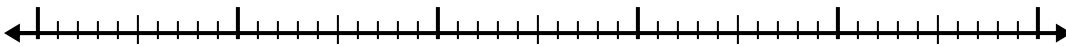
4)  $10,3 - 2,6 =$



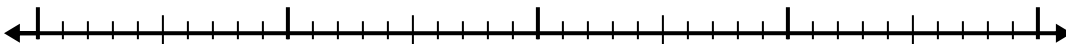
5)  $5,8 - 1,9 =$



6)  $8,2 - 2,3 =$




7)  $5,9 - 1,6 =$




8)  $11,2 - 2,9 =$



9)  $10,5 - 3,5 =$



10)  $8 - 2,4 =$

**Risposte**

1. \_\_\_\_\_

2. \_\_\_\_\_

3. \_\_\_\_\_

4. \_\_\_\_\_

5. \_\_\_\_\_

6. \_\_\_\_\_

7. \_\_\_\_\_

8. \_\_\_\_\_

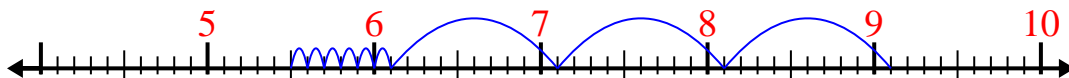
9. \_\_\_\_\_

10. \_\_\_\_\_

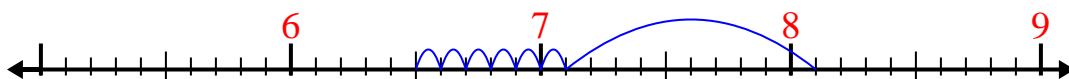


Usa la linea dei numeri per risolvere ogni problema.

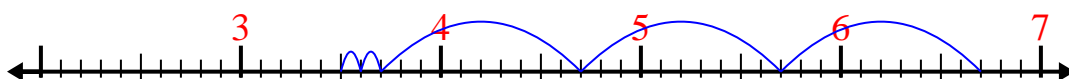
1)  $9,1 - 3,6 =$



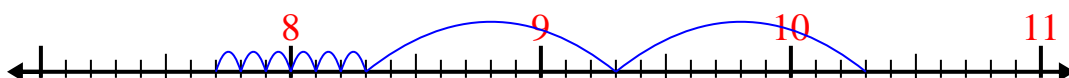
2)  $8,1 - 1,6 =$



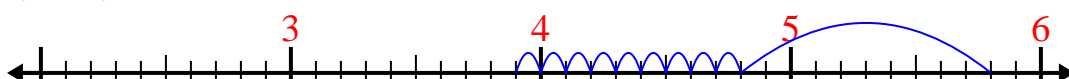
3)  $6,7 - 3,2 =$



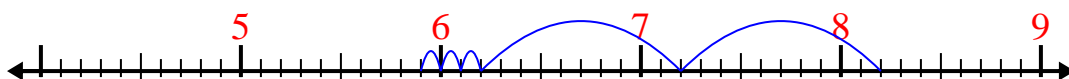
4)  $10,3 - 2,6 =$



5)  $5,8 - 1,9 =$



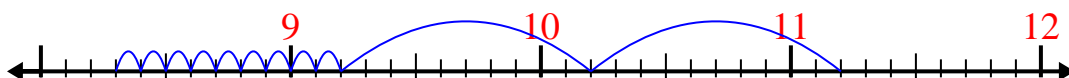
6)  $8,2 - 2,3 =$



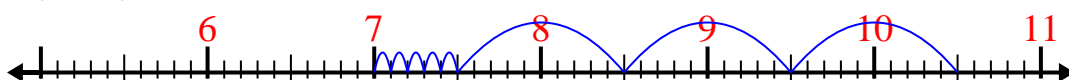
7)  $5,9 - 1,6 =$



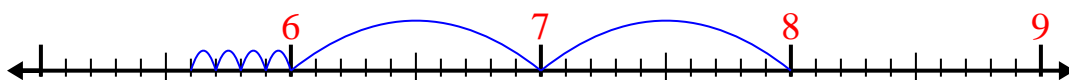
8)  $11,2 - 2,9 =$



9)  $10,5 - 3,5 =$



10)  $8 - 2,4 =$

**Risposte**1. 5,52. 6,53. 3,54. 7,75. 3,96. 5,97. 4,38. 8,39. 710. 5,6