


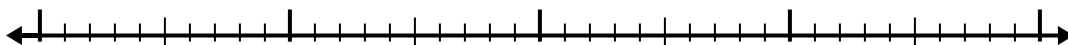


Usa la linea dei numeri per risolvere ogni problema.


1)  $2,5 - 1,3 =$



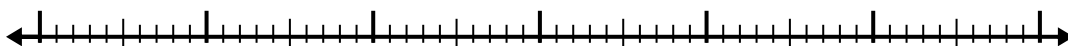
2)  $10,8 - 2,4 =$



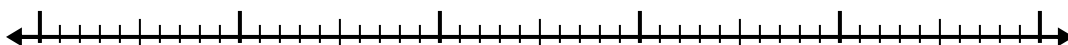
3)  $4,5 - 1,7 =$



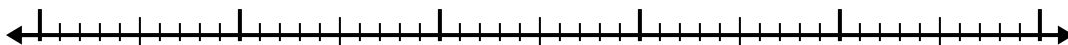
4)  $9,9 - 3,8 =$



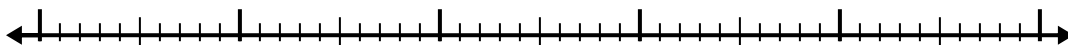
5)  $4,4 - 2,5 =$



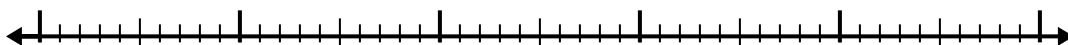
6)  $9,7 - 2,4 =$



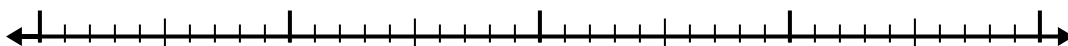
7)  $12,6 - 3,7 =$



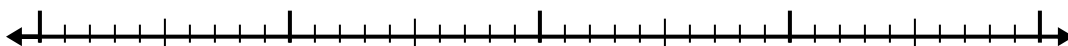
8)  $6,2 - 2,7 =$



9)  $7,7 - 1,6 =$



10)  $6,5 - 2,1 =$

**Risposte**

1. \_\_\_\_\_

2. \_\_\_\_\_

3. \_\_\_\_\_

4. \_\_\_\_\_

5. \_\_\_\_\_

6. \_\_\_\_\_

7. \_\_\_\_\_

8. \_\_\_\_\_

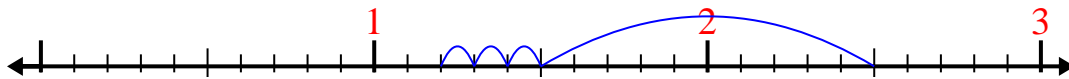
9. \_\_\_\_\_

10. \_\_\_\_\_

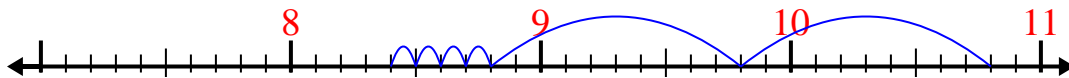


Usa la linea dei numeri per risolvere ogni problema.

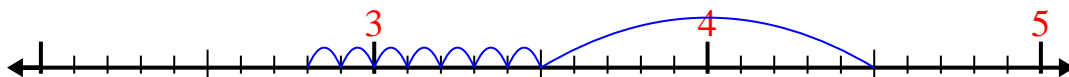
1)  $2,5 - 1,3 =$



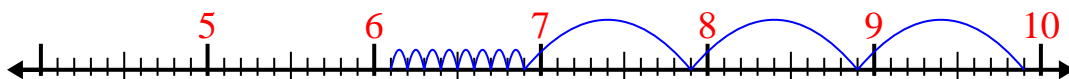
2)  $10,8 - 2,4 =$



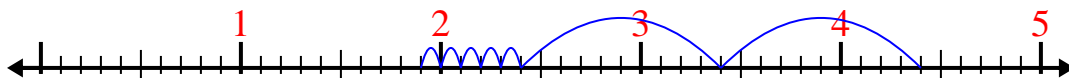
3)  $4,5 - 1,7 =$



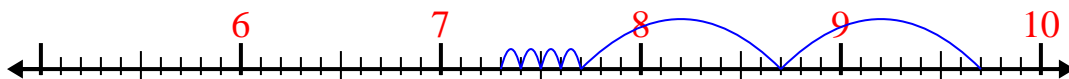
4)  $9,9 - 3,8 =$



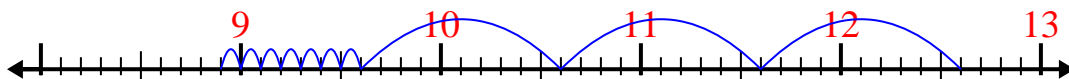
5)  $4,4 - 2,5 =$



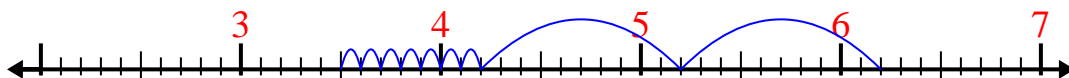
6)  $9,7 - 2,4 =$



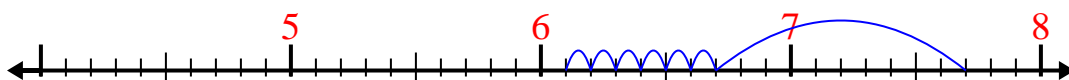
7)  $12,6 - 3,7 =$



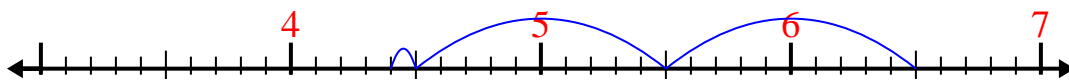
8)  $6,2 - 2,7 =$



9)  $7,7 - 1,6 =$



10)  $6,5 - 2,1 =$

**Risposte**1. 1,22. 8,43. 2,84. 6,15. 1,96. 7,37. 8,98. 3,59. 6,110. 4,4