


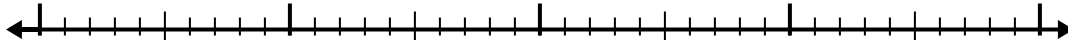


Usa la linea dei numeri per risolvere ogni problema.

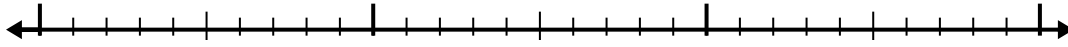
1) $5,5 - 3,4 =$



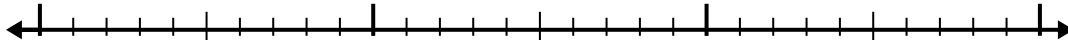
2) $4,6 - 2,1 =$



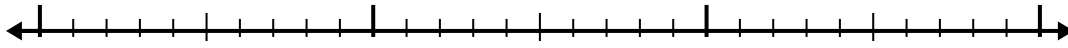
3) $8,1 - 1,2 =$



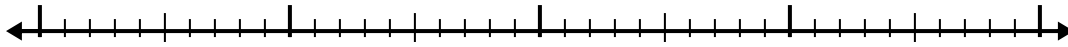
4) $8,1 - 1,3 =$



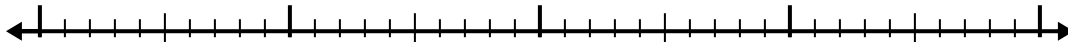
5) $8,9 - 1,8 =$



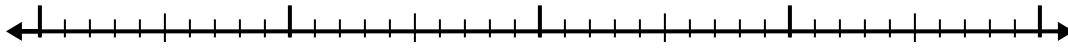
6) $5,9 - 2,1 =$



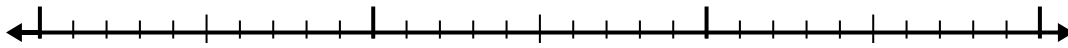
7) $9,3 - 2,1 =$



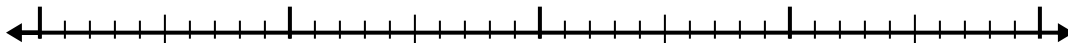
8) $7,8 - 1,8 =$



9) $5,6 - 1,1 =$



10) $6 - 2,7 =$



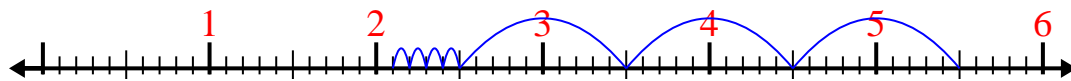
Risposte

- 1. _____
- 2. _____
- 3. _____
- 4. _____
- 5. _____
- 6. _____
- 7. _____
- 8. _____
- 9. _____
- 10. _____

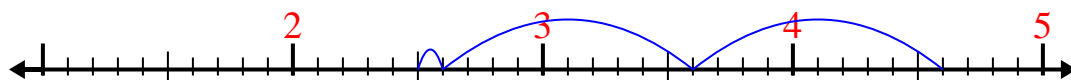


Usa la linea dei numeri per risolvere ogni problema.

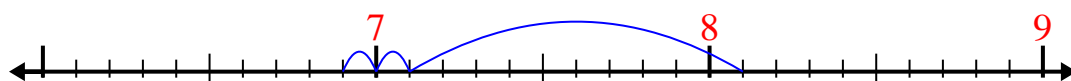
1) $5,5 - 3,4 =$



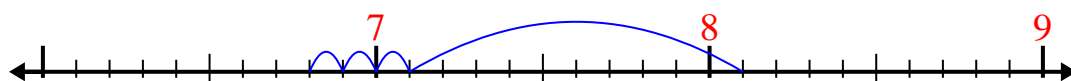
2) $4,6 - 2,1 =$



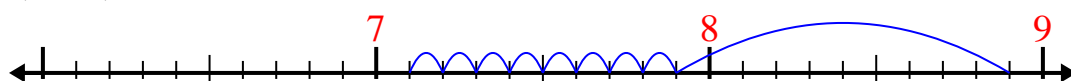
3) $8,1 - 1,2 =$



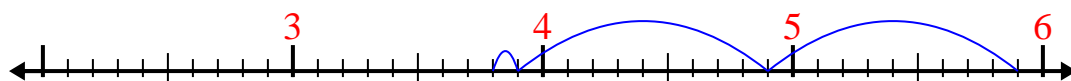
4) $8,1 - 1,3 =$



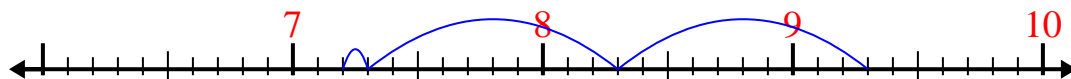
5) $8,9 - 1,8 =$



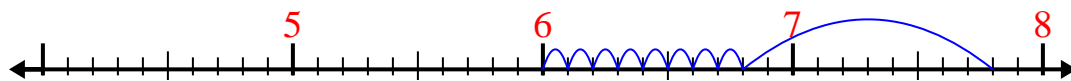
6) $5,9 - 2,1 =$



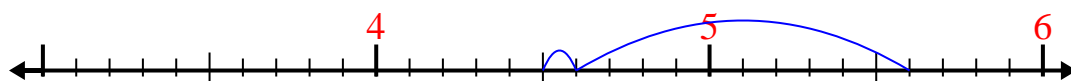
7) $9,3 - 2,1 =$



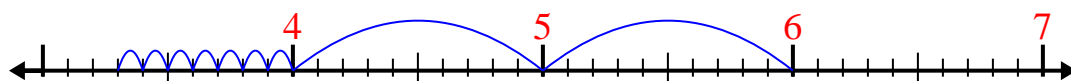
8) $7,8 - 1,8 =$



9) $5,6 - 1,1 =$



10) $6 - 2,7 =$

**Risposte**1. 2,12. 2,53. 6,94. 6,85. 7,16. 3,87. 7,28. 69. 4,510. 3,3