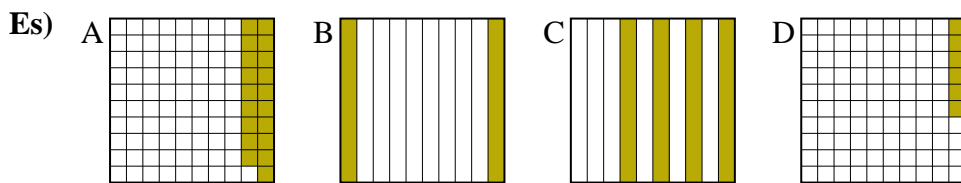




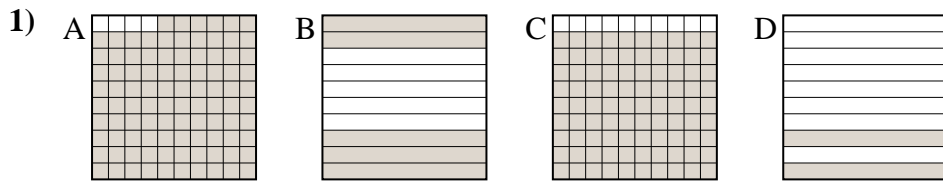
Metti in ordine i seguenti schemi dal più piccolo al più grande, in base alle parti colorate

Risposte



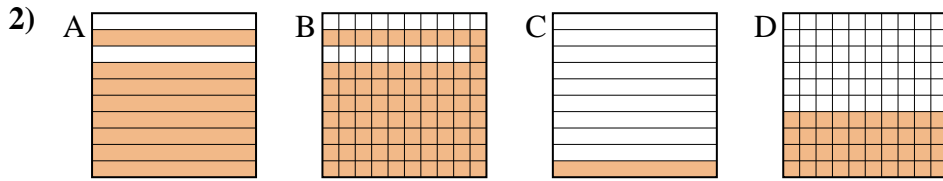
piccolo 0.06 - D
0.19 - A
0.2 - B
grande 0.4 - C

Es. **D,A,B,C**



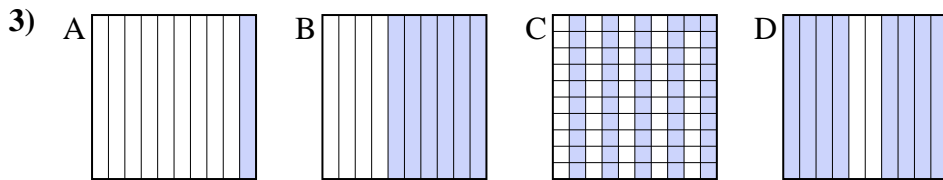
piccolo _____

grande _____



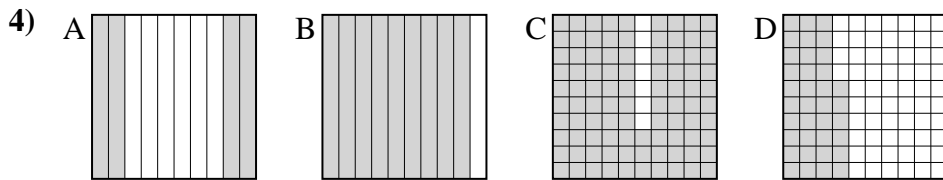
piccolo _____

grande _____



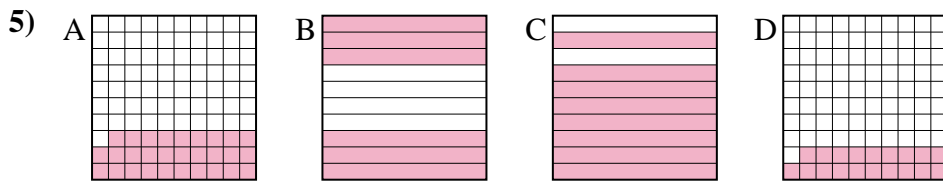
piccolo _____

grande _____



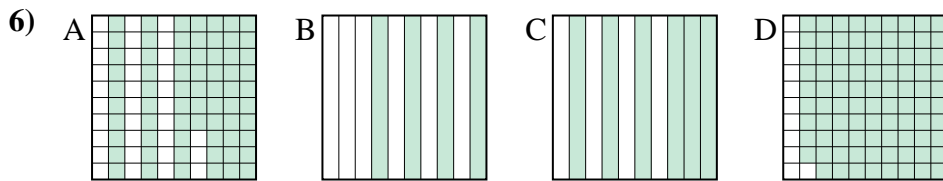
piccolo _____

grande _____



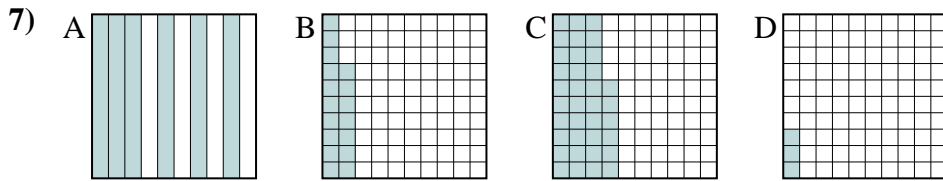
piccolo _____

grande _____



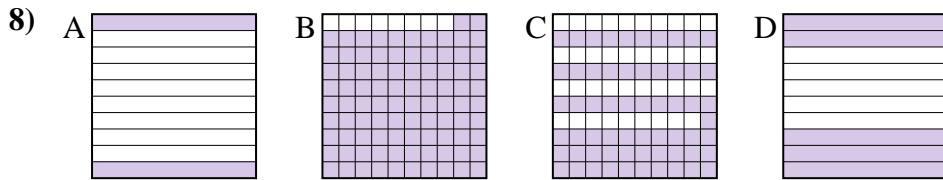
piccolo _____

grande _____



piccolo _____

grande _____



piccolo _____

grande _____

1. _____
2. _____
3. _____
4. _____
5. _____
6. _____
7. _____
8. _____



Metti in ordine i seguenti schemi dal più piccolo al più grande, in base alle parti colorate

Es)	A	B	C	D	piccolo $\frac{0.06 - D}{0.19 - A}$	
					grande $\frac{0.4 - C}$	
1)	A	B	C	D	piccolo $\frac{0.2 - D}{0.5 - B}$	
					grande $\frac{0.96 - A}{0.9 - C}$	
2)	A	B	C	D	piccolo $\frac{0.1 - C}{0.4 - D}$	
					grande $\frac{0.81 - B}{0.8 - A}$	
3)	A	B	C	D	piccolo $\frac{0.1 - A}{0.51 - C}$	
					grande $\frac{0.6 - B}{0.8 - D}$	
4)	A	B	C	D	piccolo $\frac{0.36 - D}{0.4 - A}$	
					grande $\frac{0.93 - C}{0.9 - B}$	
5)	A	B	C	D	piccolo $\frac{0.19 - D}{0.29 - A}$	
					grande $\frac{0.6 - B}{0.8 - C}$	
6)	A	B	C	D	piccolo $\frac{0.4 - B}{0.6 - C}$	
					grande $\frac{0.67 - A}{0.89 - D}$	
7)	A	B	C	D	piccolo $\frac{0.03 - D}{0.17 - B}$	
					grande $\frac{0.36 - C}{0.6 - A}$	
8)	A	B	C	D	piccolo $\frac{0.2 - A}{0.5 - D}$	
					grande $\frac{0.61 - C}{0.92 - B}$	

Risposte

- Es. D,A,B,C
1. D,B,C,A
2. C,D,A,B
3. A,C,B,D
4. D,A,B,C
5. D,A,B,C
6. B,C,A,D
7. D,B,C,A
8. A,D,C,B