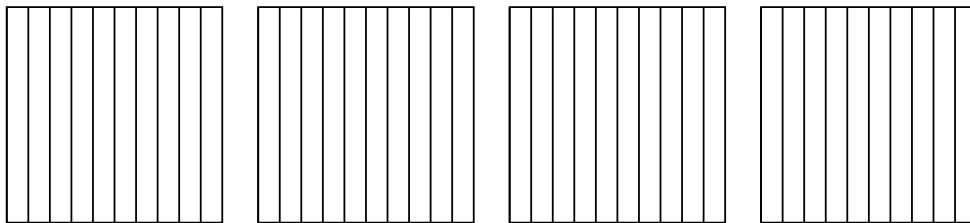


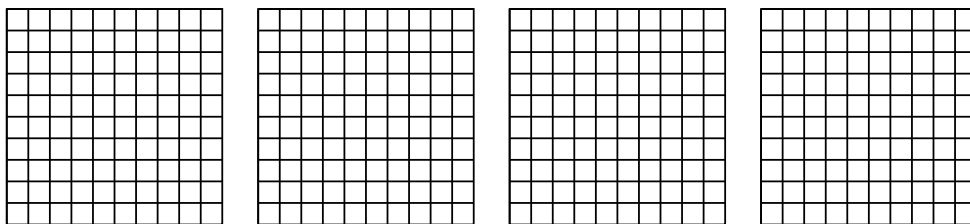


Usa il modello visivo per risolvere ogni problema.


1) $4 \times 0,5 =$



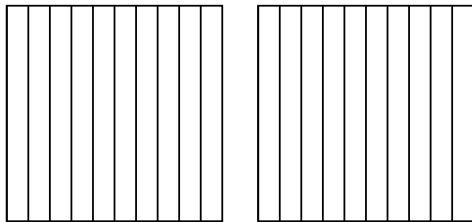
2) $4 \times 0,92 =$



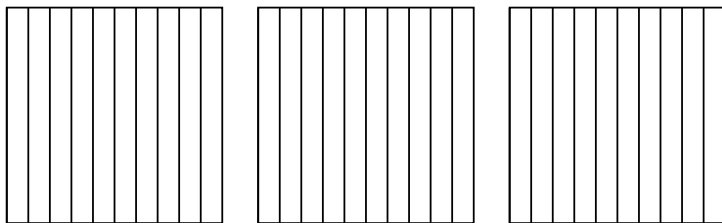
3) $3 \times 0,36 =$



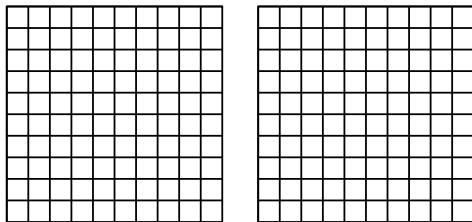
4) $2 \times 0,2 =$



5) $3 \times 0,6 =$



6) $2 \times 0,44 =$



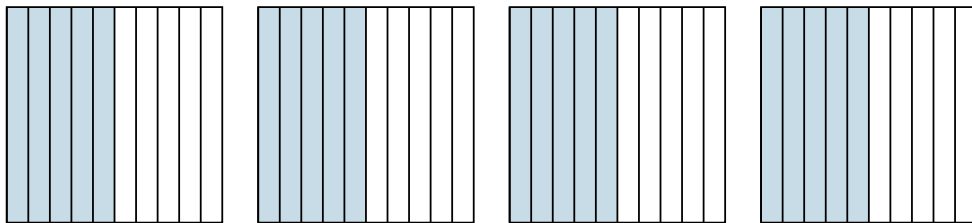
Risposte

- 1. _____
- 2. _____
- 3. _____
- 4. _____
- 5. _____
- 6. _____

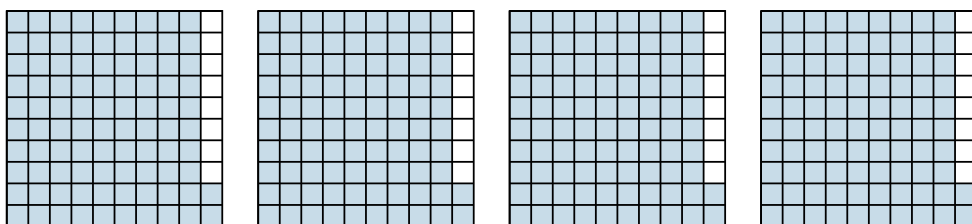


Usa il modello visivo per risolvere ogni problema.

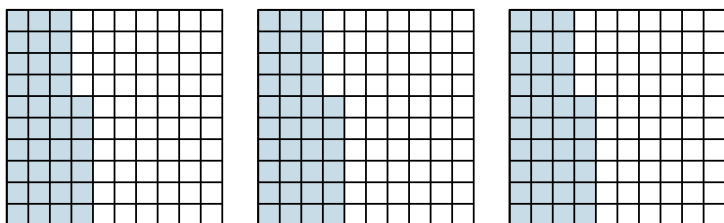
1) $4 \times 0,5 =$



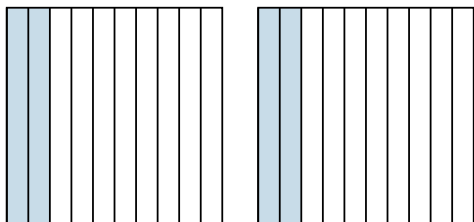
2) $4 \times 0,92 =$



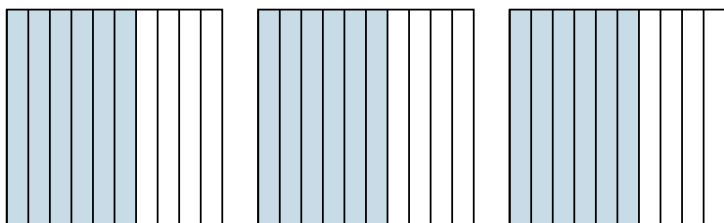
3) $3 \times 0,36 =$



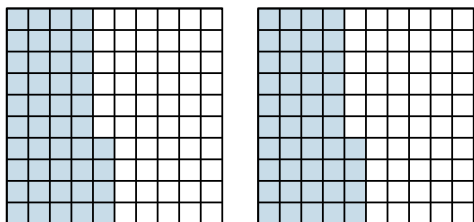
4) $2 \times 0,2 =$



5) $3 \times 0,6 =$



6) $2 \times 0,44 =$



Risposte

1. $\frac{20}{10} = 2$

2. $\frac{368}{100} = 3,68$

3. $\frac{108}{100} = 1,08$

4. $\frac{4}{10} = 0,4$

5. $\frac{18}{10} = 1,8$

6. $\frac{88}{100} = 0,88$