



Usa il blocco a sinistra per trovare il valore dell'insieme di blocchi a destra.

**Risposte**

1) = 1

1. \_\_\_\_\_

2) = 1

2. \_\_\_\_\_

3) = 1

3. \_\_\_\_\_

4) = 1

4. \_\_\_\_\_

5) = 1

5. \_\_\_\_\_

6) = 1

6. \_\_\_\_\_

7) = 1

7. \_\_\_\_\_

8) = 1

8. \_\_\_\_\_

9) = 1

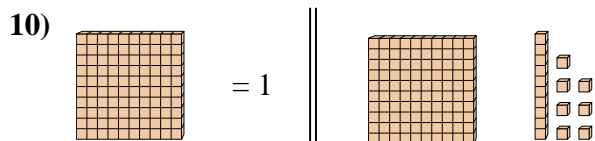
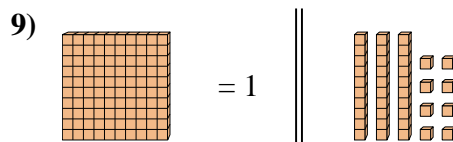
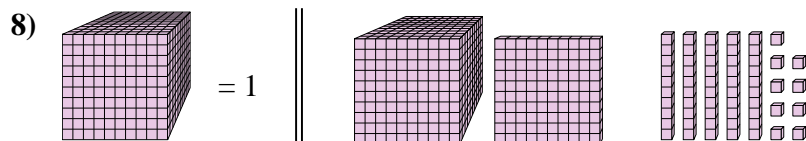
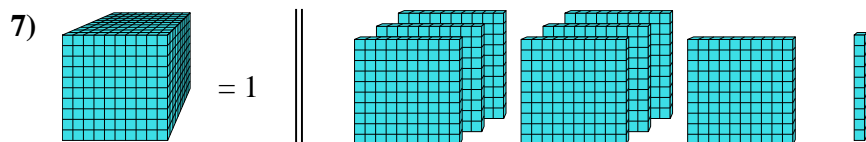
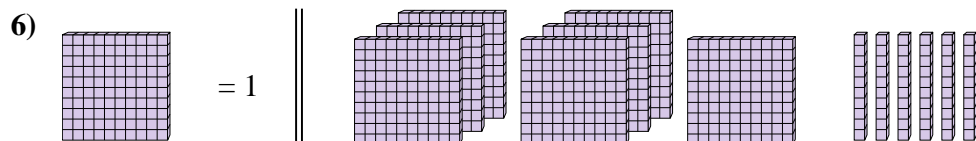
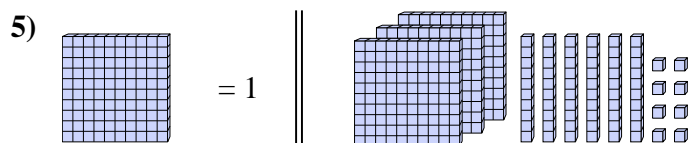
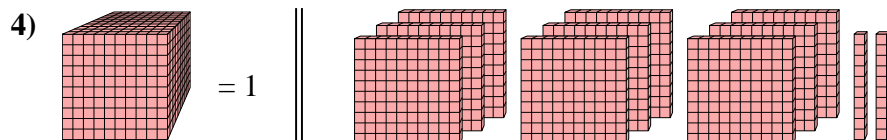
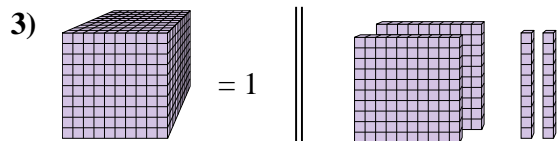
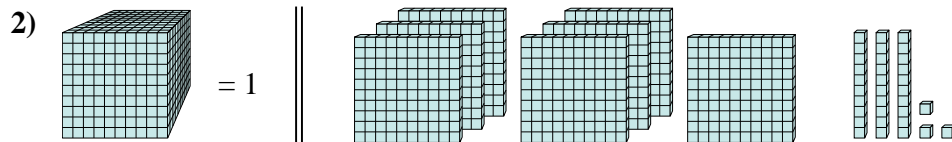
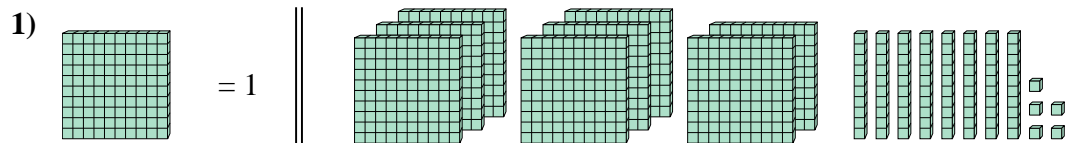
9. \_\_\_\_\_

10) = 1

10. \_\_\_\_\_



Usa il blocco a sinistra per trovare il valore dell'insieme di blocchi a destra.



**Risposte**

1. 8,85

2. 0,733

3. 0,22

4. 0,92

5. 3,68

6. 7,6

7. 0,71

8. 1,159

9. 0,38

10. 1,17