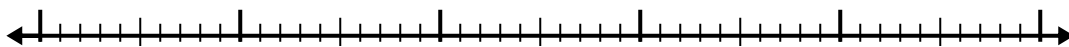


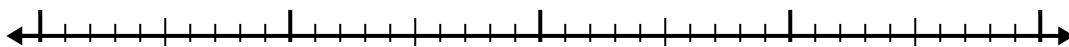


Usa la linea dei numeri per risolvere ogni problema.

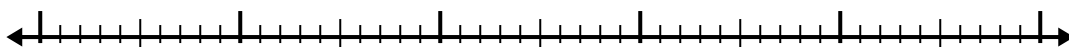
1) $5.5 + 3.3 =$



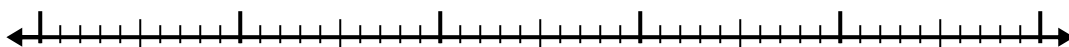
2) $1.3 + 2.3 =$




3) $2.3 + 2.2 =$




4) $1.1 + 2.2 =$



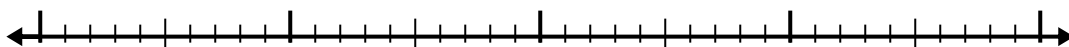
5) $8.5 + 1.6 =$




6) $8.2 + 1.6 =$



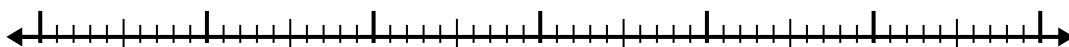
7) $2.9 + 1.4 =$



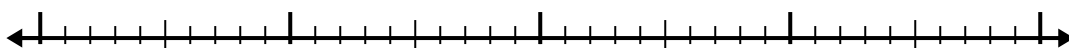
8) $2.5 + 1.1 =$



9) $5.6 + 3.2 =$



10) $4.8 + 2.5 =$

**Risposte**

1. _____

2. _____

3. _____

4. _____

5. _____

6. _____

7. _____

8. _____

9. _____

10. _____

