



Conta la quantità dei diversi oggetti.

**Risposte**

1)



1. \_\_\_\_\_

2. \_\_\_\_\_

2)



3. \_\_\_\_\_

4. \_\_\_\_\_

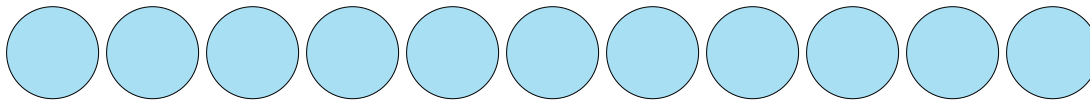
3)



5. \_\_\_\_\_

6. \_\_\_\_\_


4)



7. \_\_\_\_\_

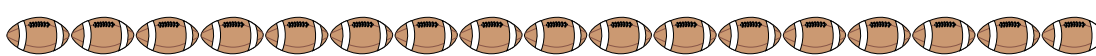
8. \_\_\_\_\_

5)



9. \_\_\_\_\_

6)



7)



8)



9)





Conta la quantità dei diversi oggetti.


1)



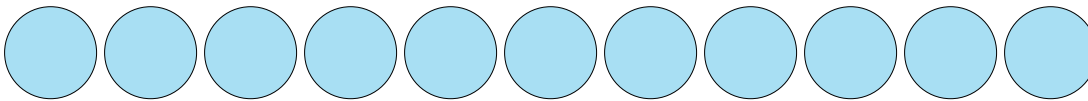
2)




3)



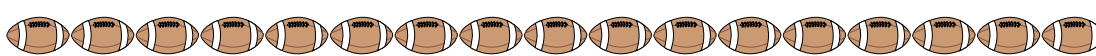
4)



5)



6)



7)



8)



9)

**Risposte**1. **7**2. **14**3. **14**4. **11**5. **14**6. **17**7. **5**8. **11**9. **4**