



Determina quale lettera meglio rappresenta il volume.

Risposte

Milliliter

Un mililitro equivale a unas 20 gotas de agua.



Liter


Muchas botellas grandes de refrescos tienen 1 o 2 litros.

1 Liter = 1,000 Milliliters



1. _____
2. _____
3. _____
4. _____
5. _____
6. _____
7. _____
8. _____
9. _____

1)



Serbatoio di benzina in un'auto

- A. 15 millilitri
- B. 70 millilitri
- C. 3 litri
- D. 60 litri

2)



Liquido che tiene un cucchiaino

- A. 500 millilitri
- B. 5 millilitri
- C. 1 litri
- D. 5 litri

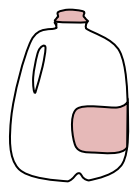
3)



Shampoo in bottiglia

- A. 1 milliliter
- B. 20 litri
- C. 1.5 litri
- D. 20 millilitri


4)



Gallone di latte

- A. 750 millilitri
- B. 1 litri
- C. 50 millilitri
- D. 3.75 litri

5)



Il contagocce tiene

- A. 1000 millilitri
- B. 500 millilitri
- C. 2 millilitri
- D. 2 litri

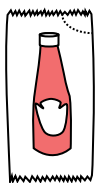
6)



Ciotola di cereali

- A. 475 millilitri
- B. 50 millilitri
- C. 1 milliliter
- D. 2 litri

7)



Ketchup in un pacchetto

- A. 50 millilitri
- B. 1 milliliter
- C. 1 litri
- D. 500 millilitri


8)



Dentifricio in tubetto

- A. 5 millilitri
- B. 1 litri
- C. 120 millilitri
- D. 2 litri

9)



Acqua in una vaschetta del ghiaccio

- A. 2 millilitri
- B. 0.5 litri
- C. 2 litri



Determina quale lettera meglio rappresenta il volume.

Milliliter

Un millilitro equivale a unas 20 gotas de agua.


**Liter**

Muchas botellas grandes de refrescos tienen 1 o 2 litros.

1 Liter = 1,000 Milliliters

**Risposte**1. **D**2. **B**3. **C**4. **D**5. **C**6. **A**7. **B**8. **C**9. **B**

1)



Serbatoio di benzina in un'auto

- A. 15 millilitri
- B. 70 millilitri
- C. 3 litri
- D. 60 litri

2)



Liquido che tiene un cucchiaio

- A. 500 millilitri
- B. 5 millilitri
- C. 1 litri
- D. 5 litri

3)



Shampoo in bottiglia

- A. 1 milliliter
- B. 20 litri
- C. 1.5 litri
- D. 20 millilitri


4)



Gallone di latte

- A. 750 millilitri
- B. 1 litri
- C. 50 millilitri
- D. 3.75 litri

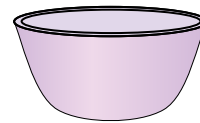
5)



Il contagocce tiene

- A. 1000 millilitri
- B. 500 millilitri
- C. 2 millilitri
- D. 2 litri

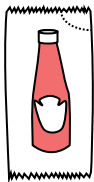
6)



Ciotola di cereali

- A. 475 millilitri
- B. 50 millilitri
- C. 1 milliliter
- D. 2 litri

7)



Ketchup in un pacchetto

- A. 50 millilitri
- B. 1 milliliter
- C. 1 litri
- D. 500 millilitri


8)



Dentifricio in tubetto

- A. 5 millilitri
- B. 1 litri
- C. 120 millilitri
- D. 2 litri

9)



Acqua in una vaschetta del ghiaccio

- A. 2 millilitri
- B. 0.5 litri
- C. 2 litri