


**Determina quale lettera meglio rappresenta il volume.****Risposte****Milliliter**

Un millilitro equivale a una 20 gotas de agua.

**Liter**

Muchas botellas grandes de refrescos tienen 1 o 2 litros.

1 Liter = 1,000 Milliliters



1. \_\_\_\_\_
2. \_\_\_\_\_
3. \_\_\_\_\_
4. \_\_\_\_\_
5. \_\_\_\_\_
6. \_\_\_\_\_
7. \_\_\_\_\_
8. \_\_\_\_\_
9. \_\_\_\_\_

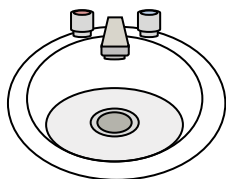
1)



Colla in una bottiglia

- A. 5 litri
- B. 120 millilitri
- C. 2 litri
- D. 3 millilitri


2)



Acqua nel lavandino del bagno

- A. 10 millilitri
- B. 7.5 litri
- C. 500 millilitri
- D. 2 litri


3)



Shampoo in bottiglia

- A. 20 litri
- B. 1 milliliter
- C. 1.5 litri
- D. 20 millilitri

4)



Ghiacciaia

- A. 20 millilitri
- B. 100 millilitri
- C. 200 millilitri
- D. 100 litri


5)



Liquido in una tazza da tè

- A. 250 millilitri
- B. 2 litri
- C. 2 millilitri
- D. 5 litri


6)



Il contagocce tiene

- A. 1000 millilitri
- B. 2 millilitri
- C. 500 millilitri
- D. 2 litri

7)



Sabbia tiene una carriola

- A. 50 millilitri
- B. 3 litri
- C. 170 litri
- D. 500 millilitri


8)



Ketchup in un pacchetto

- A. 500 millilitri
- B. 1 milliliter
- C. 1 litri
- D. 50 millilitri

9)



Serbatoio di benzina in un'auto

- A. 60 litri
- B. 70 millilitri
- C. 15 millilitri
- D. 3 litri



Determina quale lettera meglio rappresenta il volume.

**Milliliter**

Un millilitro equivale a unas 20 gotas de agua.

**Liter**

Muchas botellas grandes de refrescos tienen 1 o 2 litros.

1 Liter = 1,000 Milliliters

**Risposte**1. **B**2. **B**3. **C**4. **D**5. **A**6. **B**7. **C**8. **B**9. **A**

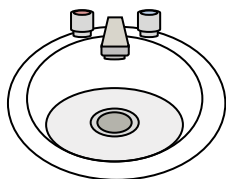
1)



Colla in una bottiglia

- A. 5 litri
- B. 120 millilitri
- C. 2 litri
- D. 3 millilitri


2)



Acqua nel lavandino del bagno

- A. 10 millilitri
- B. 7.5 litri
- C. 500 millilitri
- D. 2 litri


3)



Shampoo in bottiglia

- A. 20 litri
- B. 1 milliliter
- C. 1.5 litri
- D. 20 millilitri

4)



Ghiacciaia

- A. 20 millilitri
- B. 100 millilitri
- C. 200 millilitri
- D. 100 litri


5)



Liquido in una tazza da tè

- A. 250 millilitri
- B. 2 litri
- C. 2 millilitri
- D. 5 litri


6)



Il contagocce tiene

- A. 1000 millilitri
- B. 2 millilitri
- C. 500 millilitri
- D. 2 litri

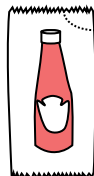
7)



Sabbia tiene una carriola

- A. 50 millilitri
- B. 3 litri
- C. 170 litri
- D. 500 millilitri


8)



Ketchup in un pacchetto

- A. 500 millilitri
- B. 1 milliliter
- C. 1 litri
- D. 50 millilitri

9)



Serbatoio di benzina in un'auto

- A. 60 litri
- B. 70 millilitri
- C. 15 millilitri
- D. 3 litri