

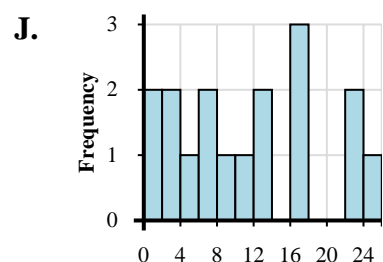
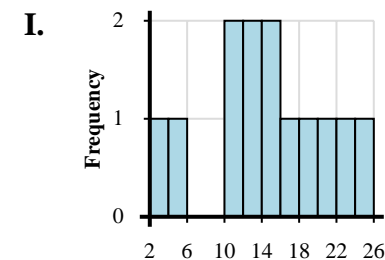
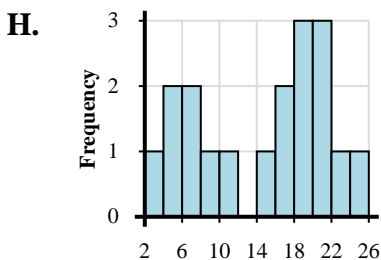
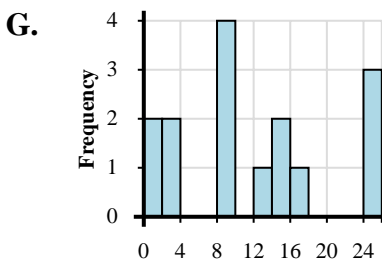
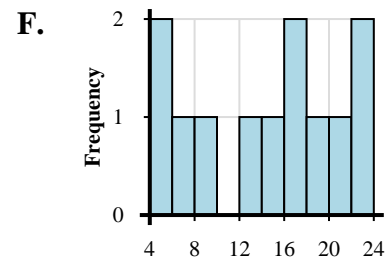
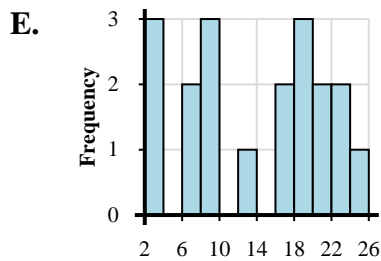
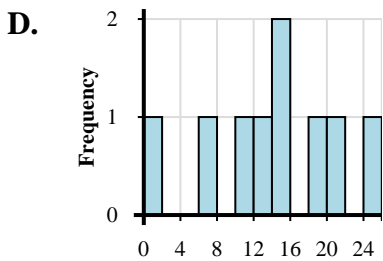
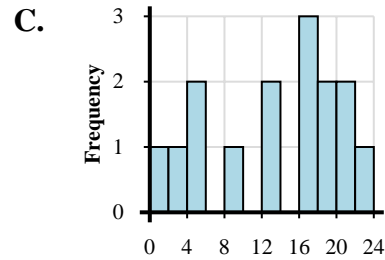
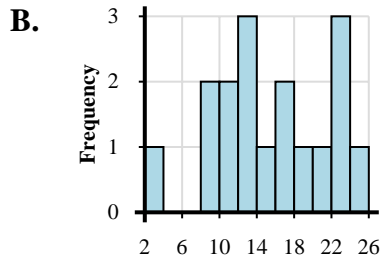
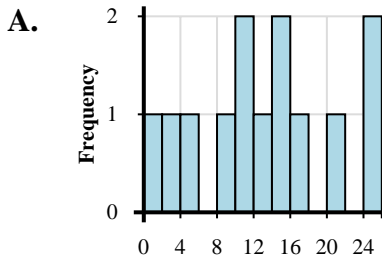


Abbina ogni set di dati al relativo istogramma.

**Risposte**

- 1) 1, 4, 3, 9, 5, 12, 13, 17, 16, 19, 17, 19, 20, 23, 21
- 2) 3, 5, 13, 13, 11, 14, 10, 17, 19, 15, 23, 24, 20
- 3) 2, 4, 6, 7, 5, 8, 10, 14, 18, 16, 18, 16, 18, 21, 22, 20, 24, 21
- 4) 4, 4, 8, 6, 13, 16, 17, 18, 15, 20, 22, 22
- 5) 4, 1, 2, 8, 14, 10, 11, 13, 14, 17, 24, 24, 21
- 6) 1, 7, 14, 14, 12, 11, 19, 24, 20
- 7) 1, 1, 3, 3, 8, 9, 8, 9, 9, 13, 14, 17, 15, 24, 24, 24
- 8) 3, 3, 3, 7, 9, 6, 9, 9, 13, 19, 19, 16, 19, 17, 24, 23, 21, 23, 20
- 9) 2, 9, 8, 13, 13, 10, 13, 10, 19, 15, 17, 16, 23, 21, 24, 23, 22
- 10) 1, 2, 3, 1, 8, 7, 5, 6, 11, 12, 13, 17, 16, 17, 22, 22, 24

1. \_\_\_\_\_
2. \_\_\_\_\_
3. \_\_\_\_\_
4. \_\_\_\_\_
5. \_\_\_\_\_
6. \_\_\_\_\_
7. \_\_\_\_\_
8. \_\_\_\_\_
9. \_\_\_\_\_
10. \_\_\_\_\_





Abbina ogni set di dati al relativo istogramma.

- 1) 1, 4, 3, 9, 5, 12, 13, 17, 16, 19, 17, 19, 20, 23, 21
- 2) 3, 5, 13, 13, 11, 14, 10, 17, 19, 15, 23, 24, 20
- 3) 2, 4, 6, 7, 5, 8, 10, 14, 18, 16, 18, 16, 18, 21, 22, 20, 24, 21
- 4) 4, 4, 8, 6, 13, 16, 17, 18, 15, 20, 22, 22
- 5) 4, 1, 2, 8, 14, 10, 11, 13, 14, 17, 24, 24, 21
- 6) 1, 7, 14, 14, 12, 11, 19, 24, 20
- 7) 1, 1, 3, 3, 8, 9, 8, 9, 9, 13, 14, 17, 15, 24, 24, 24
- 8) 3, 3, 3, 7, 9, 6, 9, 9, 13, 19, 19, 16, 19, 17, 24, 23, 21, 23, 20
- 9) 2, 9, 8, 13, 13, 10, 13, 10, 19, 15, 17, 16, 23, 21, 24, 23, 22
- 10) 1, 2, 3, 1, 8, 7, 5, 6, 11, 12, 13, 17, 16, 17, 22, 22, 24

**Risposte**

1.     **C**
2.     **I**
3.     **H**
4.     **F**
5.     **A**
6.     **D**
7.     **G**
8.     **E**
9.     **B**
10.     **J**

