

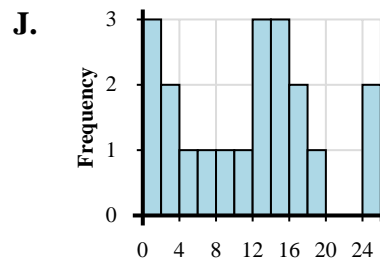
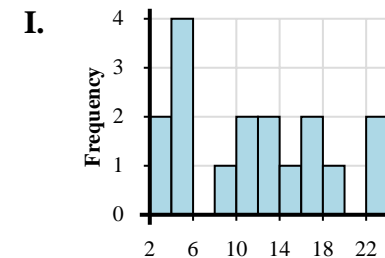
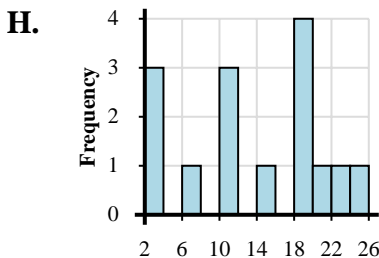
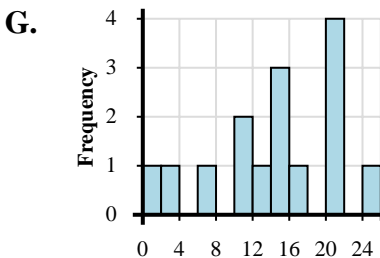
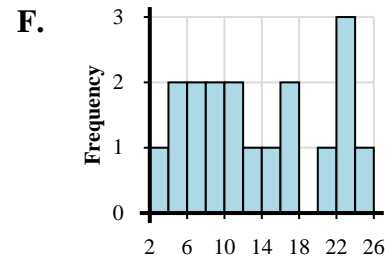
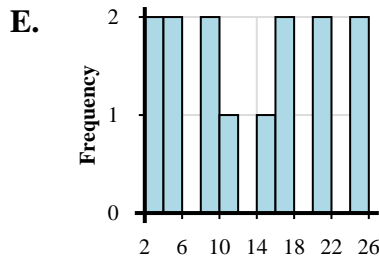
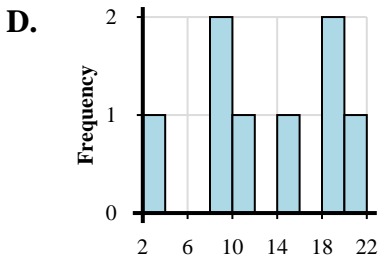
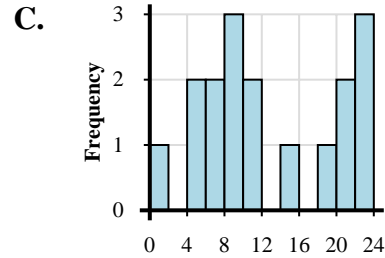
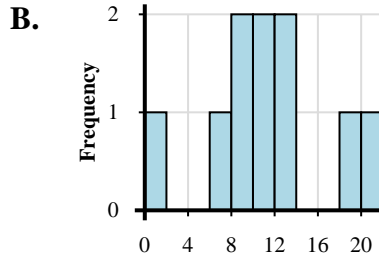
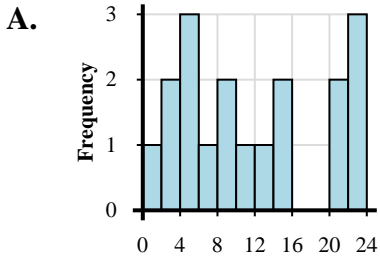


Abbina ogni set di dati al relativo istogramma.

**Risposte**

- 1) 3, 9, 8, 11, 18, 19, 15, 21
- 2) 3, 4, 4, 3, 9, 5, 5, 12, 13, 11, 10, 17, 17, 19, 15, 23, 23
- 3) 1, 8, 7, 9, 12, 12, 11, 11, 19, 21
- 4) 1, 3, 4, 4, 2, 6, 8, 5, 9, 14, 12, 10, 15, 23, 20, 22, 21, 22
- 5) 1, 3, 7, 14, 10, 13, 11, 14, 15, 16, 24, 20, 21, 21, 20
- 6) 4, 2, 9, 7, 7, 9, 5, 11, 13, 11, 15, 16, 16, 22, 24, 20, 22, 23
- 7) 3, 2, 3, 6, 10, 10, 10, 19, 18, 19, 18, 15, 23, 24, 20
- 8) 2, 3, 5, 5, 9, 9, 11, 15, 16, 17, 24, 20, 21, 24
- 9) 1, 2, 1, 3, 1, 5, 9, 7, 10, 13, 12, 14, 12, 16, 15, 15, 19, 16, 24, 24
- 10) 1, 4, 4, 7, 6, 9, 8, 9, 14, 10, 10, 18, 22, 20, 23, 20, 22

1. \_\_\_\_\_
2. \_\_\_\_\_
3. \_\_\_\_\_
4. \_\_\_\_\_
5. \_\_\_\_\_
6. \_\_\_\_\_
7. \_\_\_\_\_
8. \_\_\_\_\_
9. \_\_\_\_\_
10. \_\_\_\_\_





Abbina ogni set di dati al relativo istogramma.

- 1) 3, 9, 8, 11, 18, 19, 15, 21
- 2) 3, 4, 4, 3, 9, 5, 5, 12, 13, 11, 10, 17, 17, 19, 15, 23, 23
- 3) 1, 8, 7, 9, 12, 12, 11, 11, 19, 21
- 4) 1, 3, 4, 4, 2, 6, 8, 5, 9, 14, 12, 10, 15, 23, 20, 22, 21, 22
- 5) 1, 3, 7, 14, 10, 13, 11, 14, 15, 16, 24, 20, 21, 21, 20
- 6) 4, 2, 9, 7, 7, 9, 5, 11, 13, 11, 15, 16, 16, 22, 24, 20, 22, 23
- 7) 3, 2, 3, 6, 10, 10, 10, 19, 18, 19, 18, 15, 23, 24, 20
- 8) 2, 3, 5, 5, 9, 9, 11, 15, 16, 17, 24, 20, 21, 24
- 9) 1, 2, 1, 3, 1, 5, 9, 7, 10, 13, 12, 14, 12, 16, 15, 15, 19, 16, 24, 24
- 10) 1, 4, 4, 7, 6, 9, 8, 9, 14, 10, 10, 18, 22, 20, 23, 20, 22

**Risposte**1. **D**2. **I**3. **B**4. **A**5. **G**6. **F**7. **H**8. **E**9. **J**10. **C**