

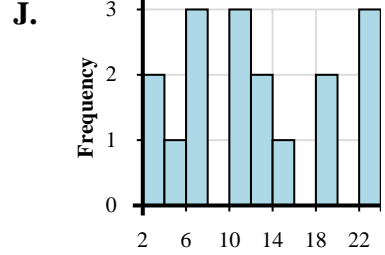
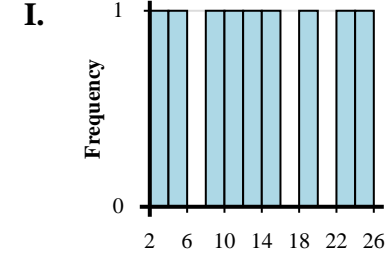
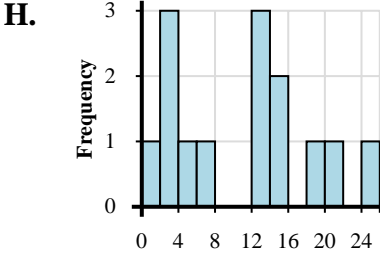
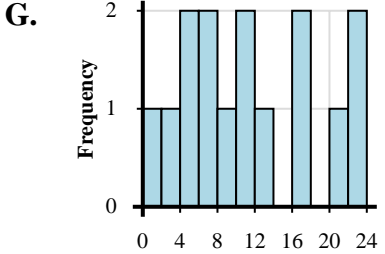
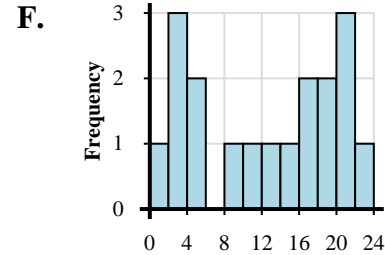
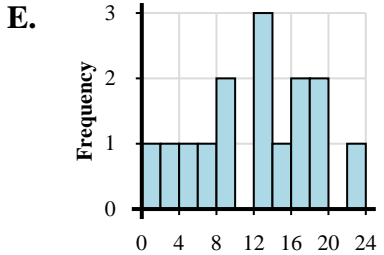
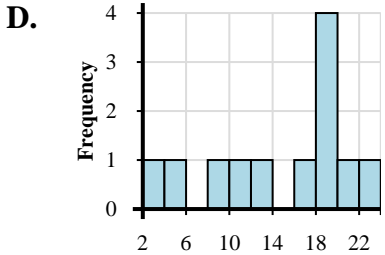
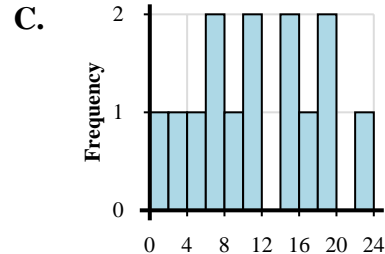
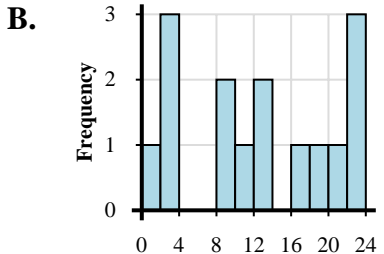
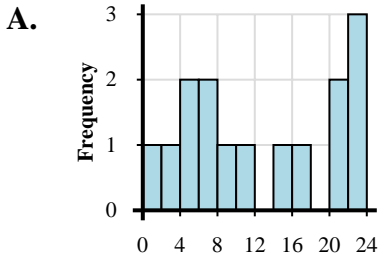


Abbina ogni set di dati al relativo istogramma.

Risposte

- 1) 3, 1, 6, 6, 5, 8, 5, 11, 14, 17, 23, 22, 21, 22, 21
- 2) 1, 2, 3, 4, 2, 7, 13, 13, 12, 15, 15, 19, 24, 21
- 3) 2, 3, 4, 2, 1, 5, 9, 12, 14, 11, 17, 19, 19, 17, 21, 20, 23, 21
- 4) 2, 4, 8, 10, 12, 15, 19, 24, 22
- 5) 2, 5, 9, 13, 11, 18, 18, 19, 19, 16, 20, 23
- 6) 1, 3, 7, 5, 6, 8, 11, 10, 14, 19, 17, 15, 19, 23
- 7) 3, 4, 2, 6, 7, 7, 12, 11, 12, 10, 10, 15, 19, 18, 23, 23, 23
- 8) 4, 2, 1, 5, 6, 8, 6, 11, 13, 10, 17, 16, 21, 22, 22
- 9) 1, 3, 3, 3, 9, 9, 11, 13, 13, 18, 16, 23, 23, 21, 23
- 10) 4, 2, 1, 9, 7, 9, 14, 13, 12, 12, 16, 19, 16, 19, 22

- 1. _____
- 2. _____
- 3. _____
- 4. _____
- 5. _____
- 6. _____
- 7. _____
- 8. _____
- 9. _____
- 10. _____





Abbina ogni set di dati al relativo istogramma.

- 1) 3, 1, 6, 6, 5, 8, 5, 11, 14, 17, 23, 22, 21, 22, 21
- 2) 1, 2, 3, 4, 2, 7, 13, 13, 12, 15, 15, 19, 24, 21
- 3) 2, 3, 4, 2, 1, 5, 9, 12, 14, 11, 17, 19, 19, 17, 21, 20, 23, 21
- 4) 2, 4, 8, 10, 12, 15, 19, 24, 22
- 5) 2, 5, 9, 13, 11, 18, 18, 19, 19, 16, 20, 23
- 6) 1, 3, 7, 5, 6, 8, 11, 10, 14, 19, 17, 15, 19, 23
- 7) 3, 4, 2, 6, 7, 7, 12, 11, 12, 10, 10, 15, 19, 18, 23, 23, 23
- 8) 4, 2, 1, 5, 6, 8, 6, 11, 13, 10, 17, 16, 21, 22, 22
- 9) 1, 3, 3, 3, 9, 9, 11, 13, 13, 18, 16, 23, 23, 21, 23
- 10) 4, 2, 1, 9, 7, 9, 14, 13, 12, 12, 16, 19, 16, 19, 22

Risposte

1. **A**
2. **H**
3. **F**
4. **I**
5. **D**
6. **C**
7. **J**
8. **G**
9. **B**
10. **E**

