

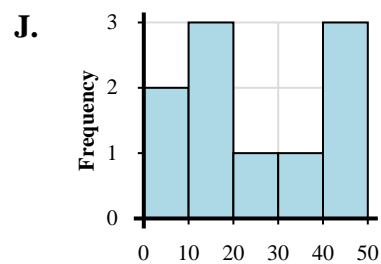
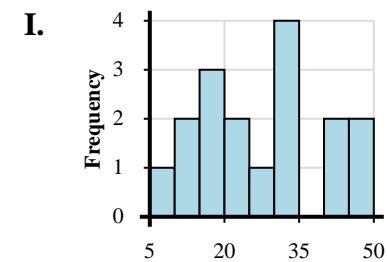
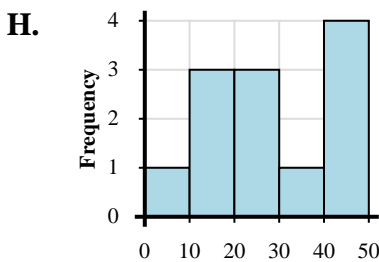
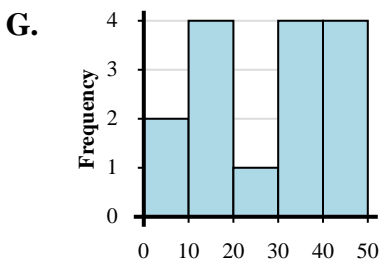
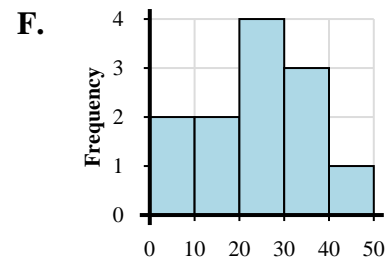
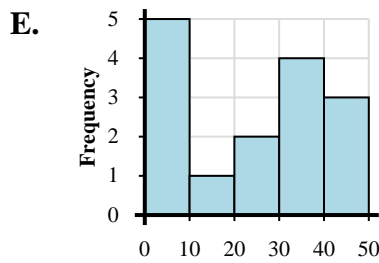
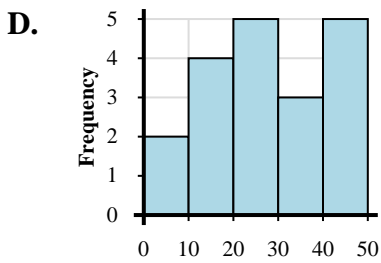
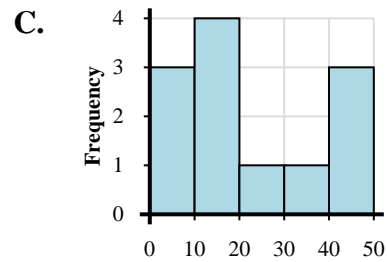
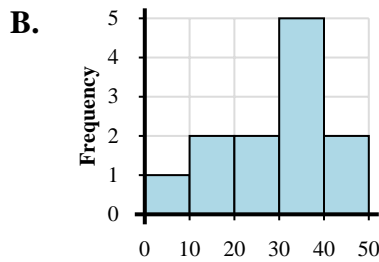
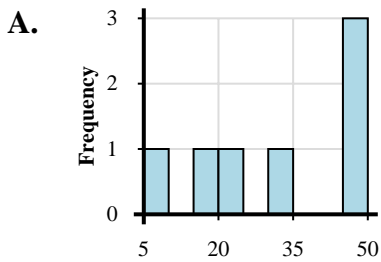


Abbina ogni set di dati al relativo istogramma.

Risposte

- 1) 8, 9, 10, 11, 24, 21, 23, 23, 38, 33, 32, 48
- 2) 4, 3, 12, 16, 16, 20, 30, 46, 49, 42
- 3) 2, 3, 6, 10, 16, 17, 16, 27, 37, 40, 42, 43
- 4) 3, 19, 15, 22, 28, 30, 32, 35, 33, 32, 42, 46
- 5) 3, 7, 14, 12, 16, 11, 20, 25, 27, 20, 29, 36, 39, 39, 40, 44, 48, 45, 46
- 6) 5, 5, 6, 3, 1, 13, 26, 23, 37, 35, 35, 33, 45, 46, 42
- 7) 1, 11, 10, 14, 29, 29, 26, 34, 45, 47, 42, 44
- 8) 1, 2, 18, 14, 11, 15, 29, 37, 36, 37, 33, 43, 48, 41, 49
- 9) 9, 18, 21, 34, 48, 48, 46
- 10) 8, 18, 10, 17, 11, 19, 23, 23, 28, 32, 34, 32, 33, 47, 42, 40, 45

1. _____
2. _____
3. _____
4. _____
5. _____
6. _____
7. _____
8. _____
9. _____
10. _____





Abbina ogni set di dati al relativo istogramma.

- 1) 8, 9, 10, 11, 24, 21, 23, 23, 38, 33, 32, 48
- 2) 4, 3, 12, 16, 16, 20, 30, 46, 49, 42
- 3) 2, 3, 6, 10, 16, 17, 16, 27, 37, 40, 42, 43
- 4) 3, 19, 15, 22, 28, 30, 32, 35, 33, 32, 42, 46
- 5) 3, 7, 14, 12, 16, 11, 20, 25, 27, 20, 29, 36, 39, 39, 40, 44, 48, 45, 46
- 6) 5, 5, 6, 3, 1, 13, 26, 23, 37, 35, 35, 33, 45, 46, 42
- 7) 1, 11, 10, 14, 29, 29, 26, 34, 45, 47, 42, 44
- 8) 1, 2, 18, 14, 11, 15, 29, 37, 36, 37, 33, 43, 48, 41, 49
- 9) 9, 18, 21, 34, 48, 48, 46
- 10) 8, 18, 10, 17, 11, 19, 23, 23, 28, 32, 34, 32, 33, 47, 42, 40, 45

Risposte

1. **F**
2. **J**
3. **C**
4. **B**
5. **D**
6. **E**
7. **H**
8. **G**
9. **A**
10. **I**

