

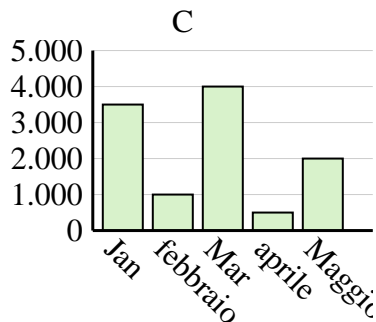
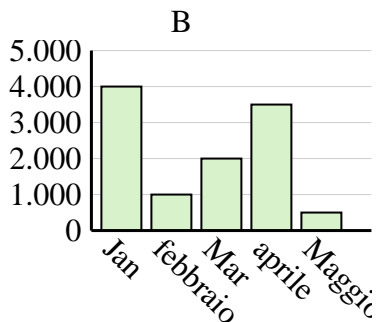
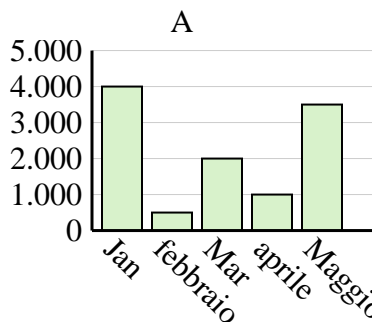


Determina quale grafico (A, B o C) rappresenta meglio le informazioni date nella tabella

Risposte

1)

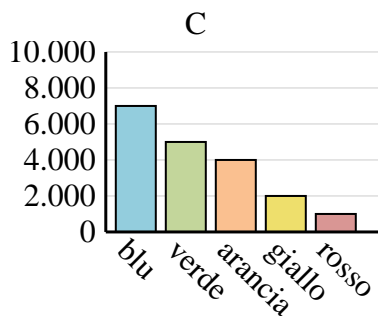
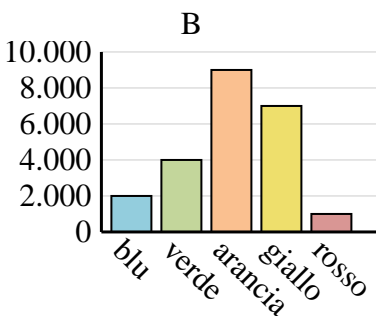
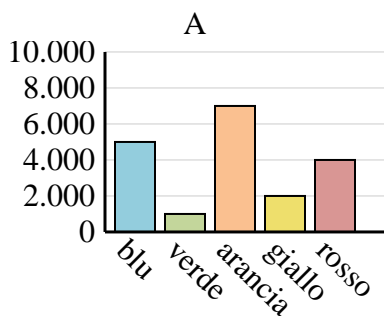
Saldi	Jan	febbraio	Mar	aprile	Maggio
Mese	4.000	1.000	2.000	3.500	500



1. _____
2. _____
3. _____
4. _____

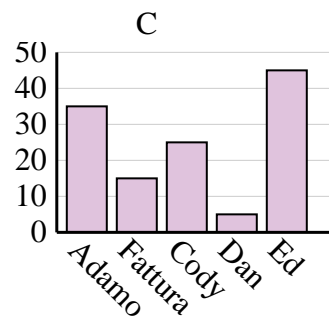
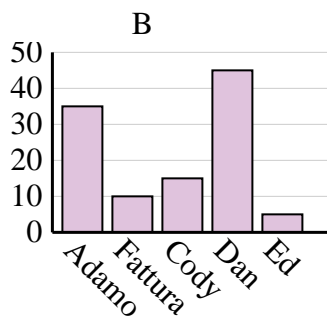
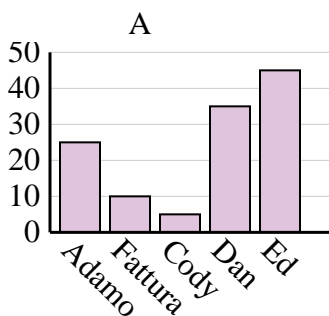
2)

Colore preferito	blu	verde	arancia	giallo	rosso
Le persone	5.000	1.000	7.000	2.000	4.000



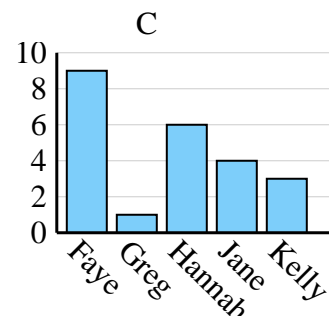
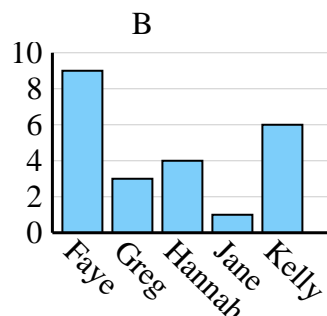
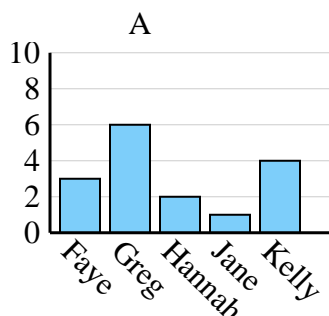
3)

Nome	Adamo	Fattura	Cody	Dan	Ed
Punti	25	10	5	35	45



4)

Nome	Faye	Greg	Hannah	Jane	Kelly
Stati in cui vivevano	3	6	2	1	4



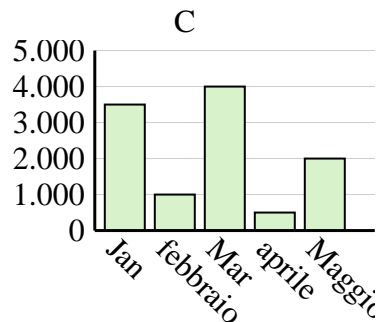
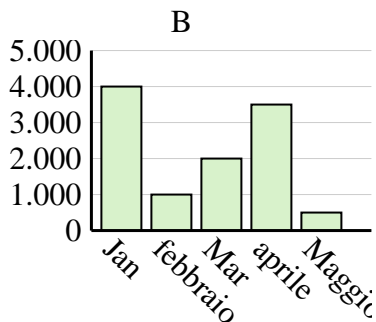
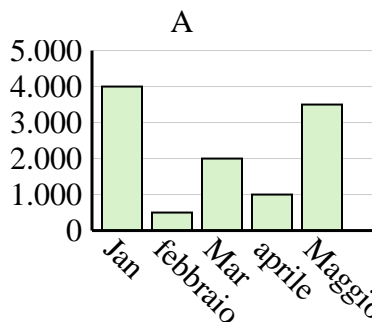


Determina quale grafico (A, B o C) rappresenta meglio le informazioni date nella tabella

Risposte

1)

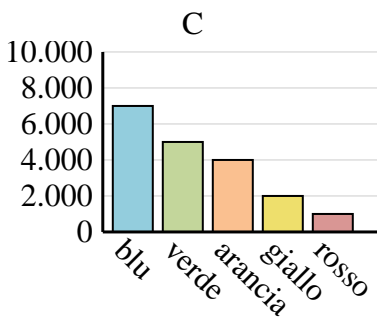
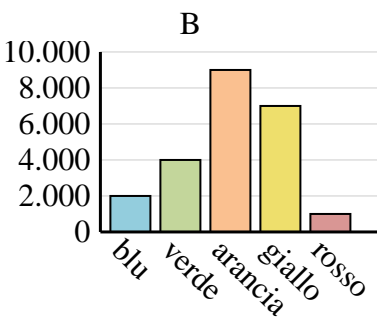
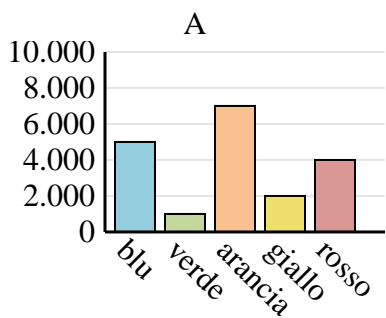
Saldi	Jan	febbraio	Mar	aprile	Maggio
Mese	4.000	1.000	2.000	3.500	500



1. **B**
2. **A**
3. **A**
4. **A**

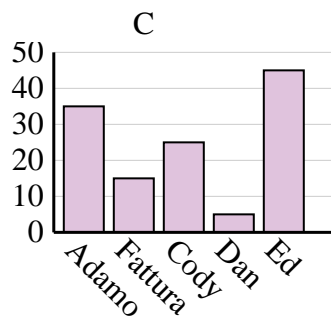
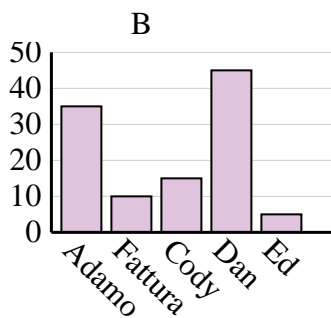
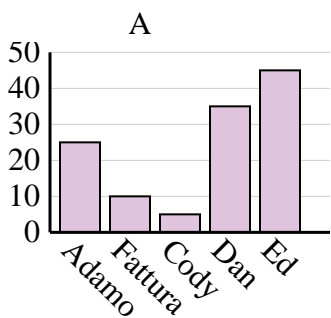
2)

Colore preferito	blu	verde	arancia	giallo	rosso
Le persone	5.000	1.000	7.000	2.000	4.000



3)

Nome	Adamo	Fattura	Cody	Dan	Ed
Punti	25	10	5	35	45



4)

Nome	Faye	Greg	Hannah	Jane	Kelly
Stati in cui vivevano	3	6	2	1	4

