

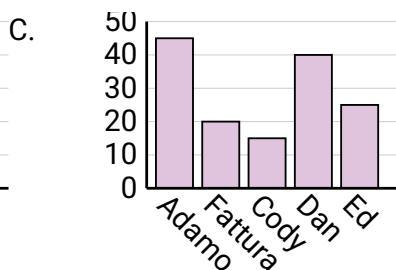
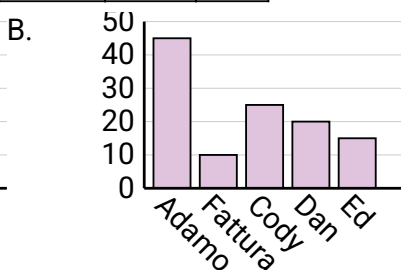
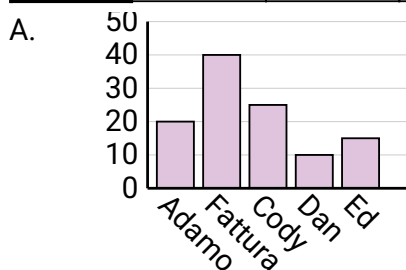


Determina quale grafico (A, B o C) rappresenta meglio le informazioni date nella tabella

**Risposte**

1)

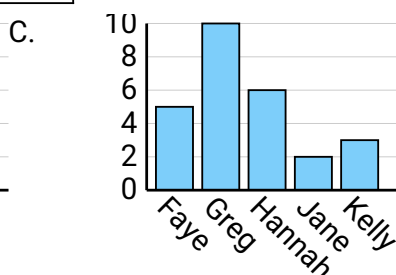
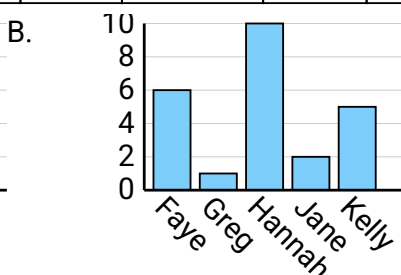
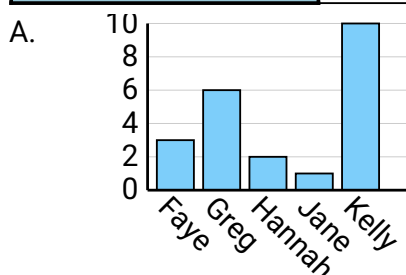
Nome	Adamo	Fattura	Cody	Dan	Ed
Punti	45	10	25	20	15



1. \_\_\_\_\_
2. \_\_\_\_\_
3. \_\_\_\_\_
4. \_\_\_\_\_

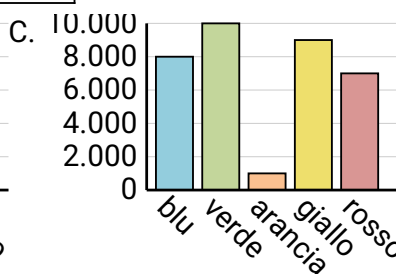
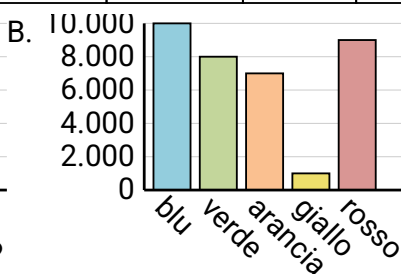
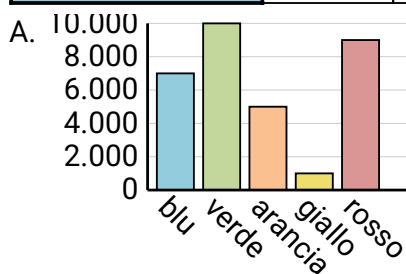
2)

Nome	Faye	Greg	Hannah	Jane	Kelly
Stati in cui vivevano	3	6	2	1	10



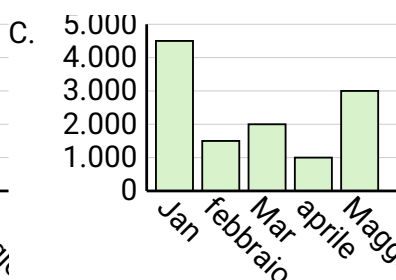
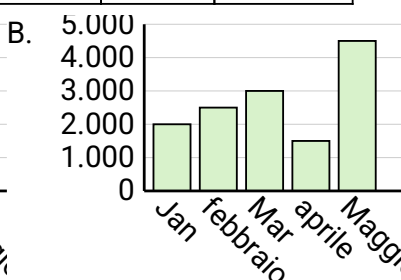
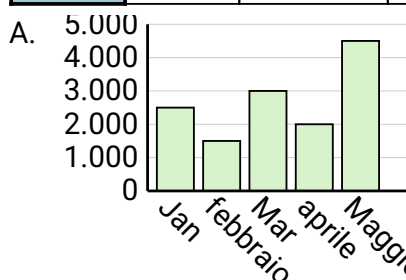
3)

Colore preferito	blu	verde	arancia	giallo	rosso
Le persone	10.000	8.000	7.000	1.000	9.000



4)

Saldi	Jan	febbraio	Mar	aprile	Maggio
Mese	2.500	1.500	3.000	2.000	4.500



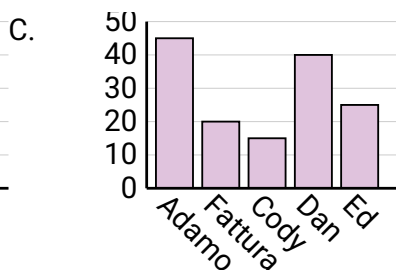
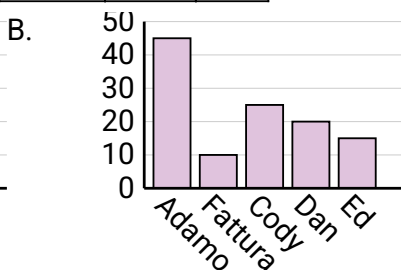
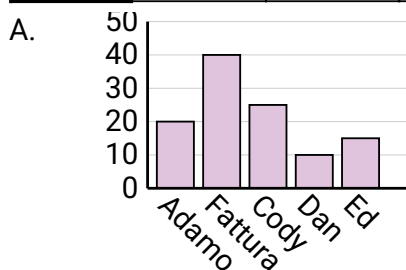


Determina quale grafico (A, B o C) rappresenta meglio le informazioni date nella tabella

**Risposte**

1)

Nome	Adamo	Fattura	Cody	Dan	Ed
Punti	45	10	25	20	15



1. **B**

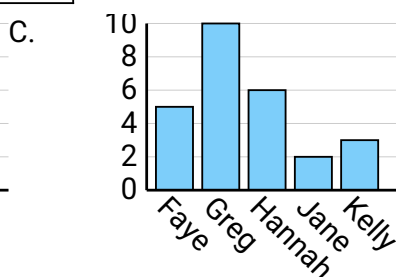
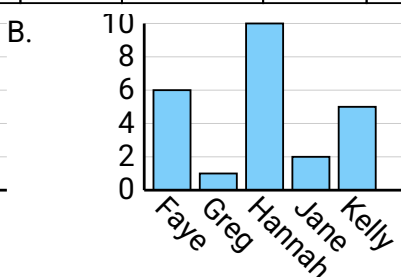
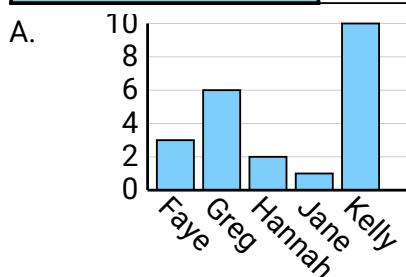
2. **A**

3. **B**

4. **A**

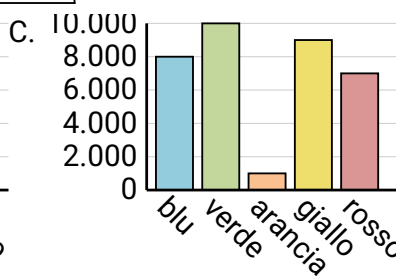
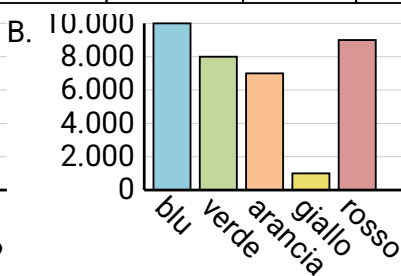
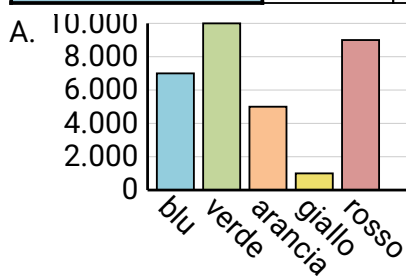
2)

Nome	Faye	Greg	Hannah	Jane	Kelly
Stati in cui vivevano	3	6	2	1	10



3)

Colore preferito	blu	verde	arancia	giallo	rosso
Le persone	10.000	8.000	7.000	1.000	9.000



4)

Saldi	Jan	febbraio	Mar	aprile	Maggio
Mese	2.500	1.500	3.000	2.000	4.500

