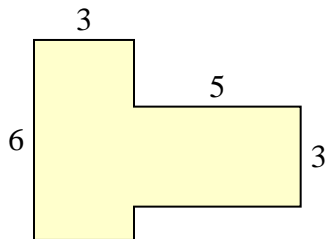




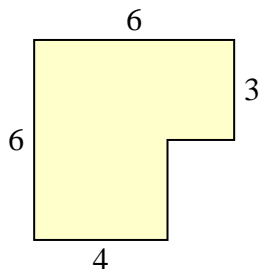
Trova l'area di ciascuna forma, Le misure sono in millimetri (mm). Non fare l'equivalenza.

Risposte

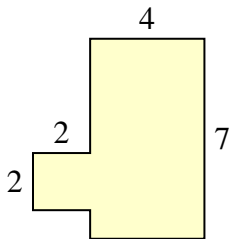
1)



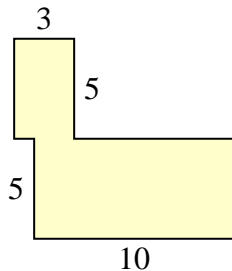
2)



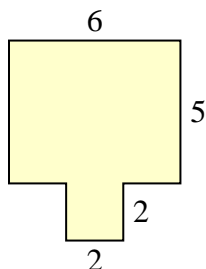
3)



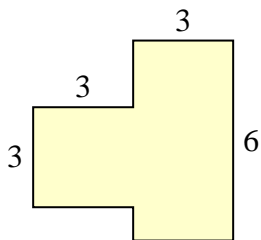
4)



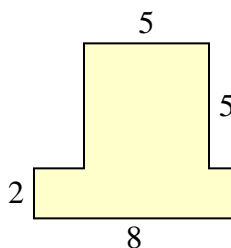
5)



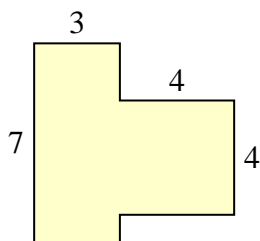
6)



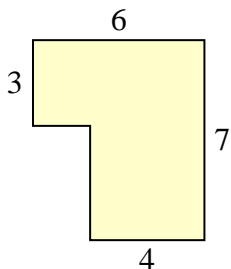
7)



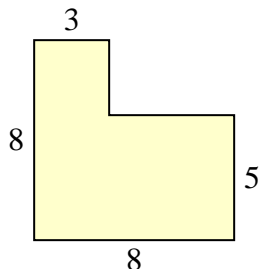
8)



9)



10)



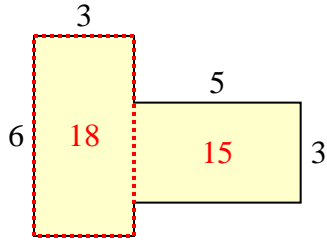
- 1. _____
- 2. _____
- 3. _____
- 4. _____
- 5. _____
- 6. _____
- 7. _____
- 8. _____
- 9. _____
- 10. _____



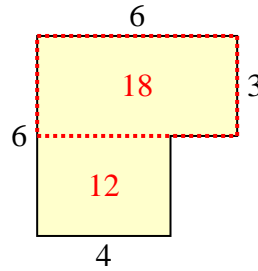
Trova l'area di ciascuna forma, Le misure sono in millimetri (mm). Non fare l'equivalenza.

Risposte

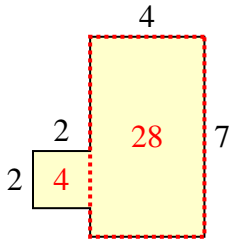
1)



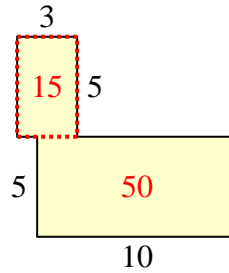
2)

1. 33 mm²2. 30 mm²3. 32 mm²4. 65 mm²

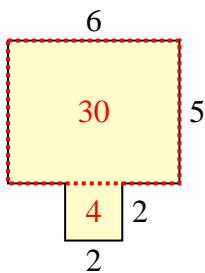
3)



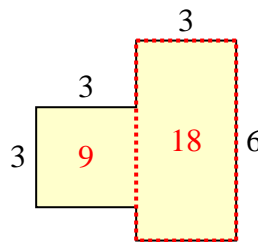
4)

5. 34 mm²6. 27 mm²7. 41 mm²8. 37 mm²

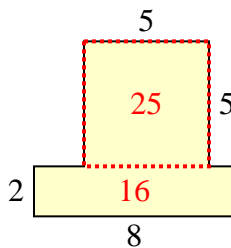
5)



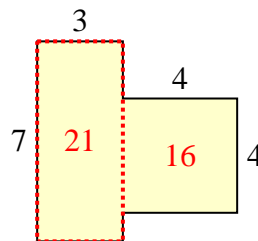
6)

9. 34 mm²10. 49 mm²

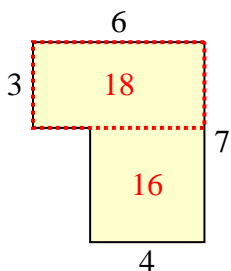
7)



8)



9)



10)

