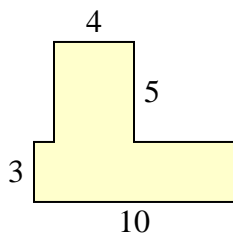




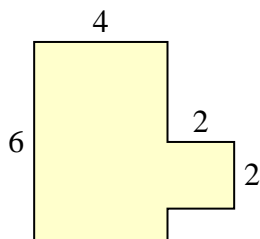
Trova l'area di ciascuna forma, Le misure sono in millimetri (mm). Non fare l'equivalenza.

**Risposte**

1)



2)



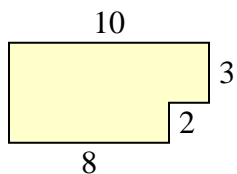
1. \_\_\_\_\_

2. \_\_\_\_\_

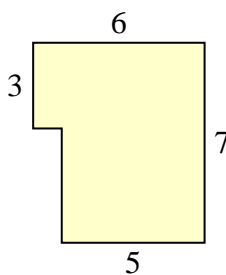
3. \_\_\_\_\_

4. \_\_\_\_\_

3)



4)



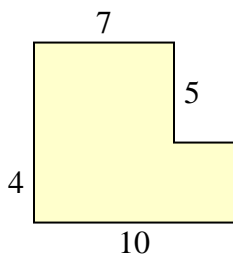
5. \_\_\_\_\_

6. \_\_\_\_\_

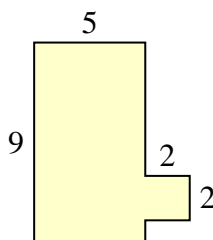
7. \_\_\_\_\_

8. \_\_\_\_\_

5)



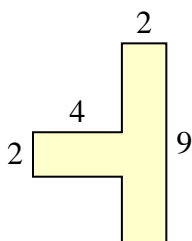
6)



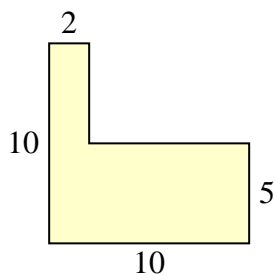
9. \_\_\_\_\_

10. \_\_\_\_\_

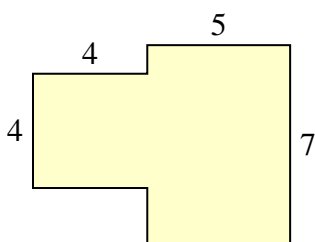
7)



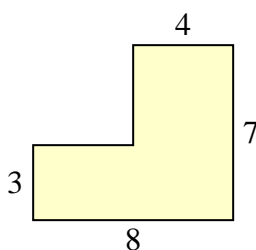
8)



9)

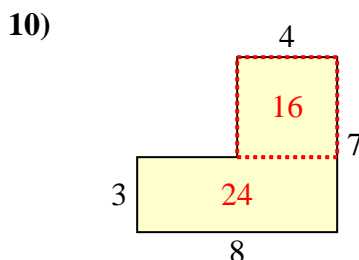
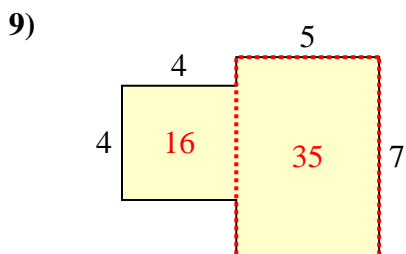
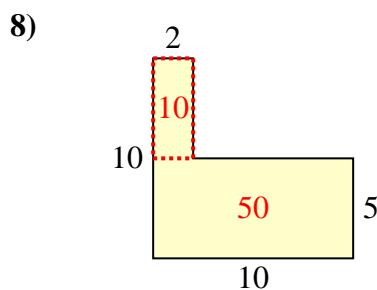
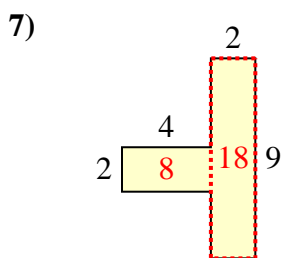
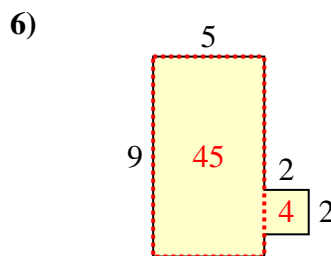
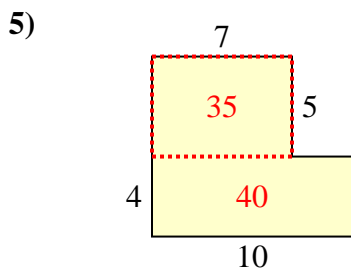
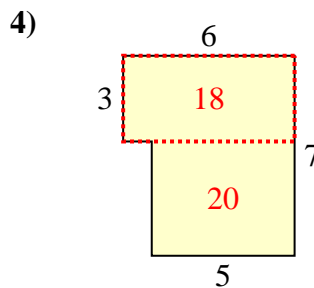
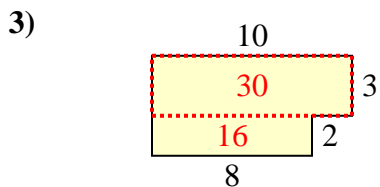
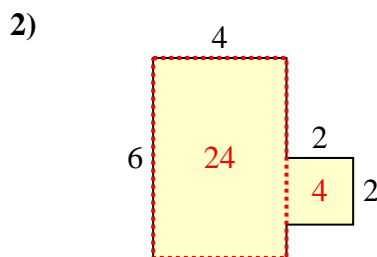
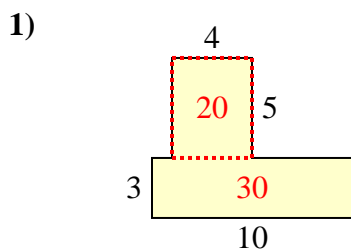


10)





Trova l'area di ciascuna forma, Le misure sono in millimetri (mm). Non fare l'equivalenza.

**Risposte**

1. 50 mm<sup>2</sup>
2. 28 mm<sup>2</sup>
3. 46 mm<sup>2</sup>
4. 38 mm<sup>2</sup>
5. 75 mm<sup>2</sup>
6. 49 mm<sup>2</sup>
7. 26 mm<sup>2</sup>
8. 60 mm<sup>2</sup>
9. 51 mm<sup>2</sup>
10. 40 mm<sup>2</sup>