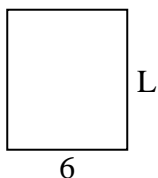




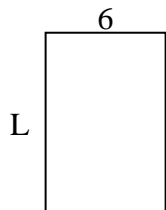
Calcola il valore di 'L'.

Risposte


1) Area = $42u^2$



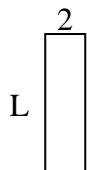
2) Area = $54u^2$



3) Area = $24u^2$



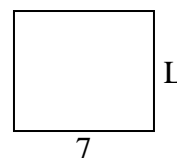
4) Area = $14u^2$



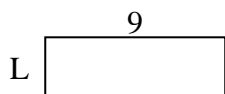
5) Area = $10u^2$



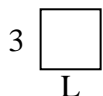
6) Area = $42u^2$



7) Area = $27u^2$



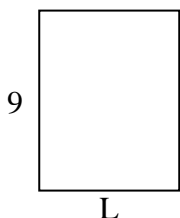
8) Area = $9u^2$



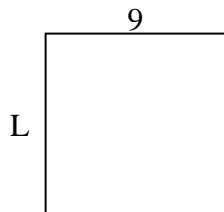
9) Area = $36u^2$



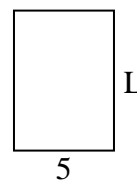
10) Area = $63u^2$



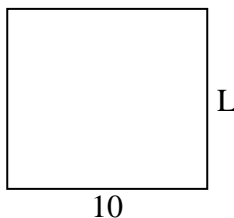
11) Area = $81u^2$




12) Area = $35u^2$



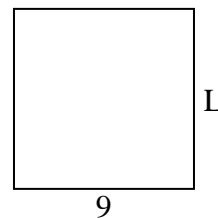
13) Area = $90u^2$



14) Area = $24u^2$



15) Area = $81u^2$



1. _____

2. _____

3. _____

4. _____

5. _____

6. _____

7. _____

8. _____

9. _____

10. _____

11. _____

12. _____

13. _____

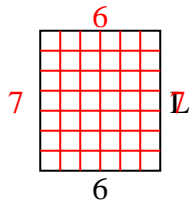
14. _____

15. _____

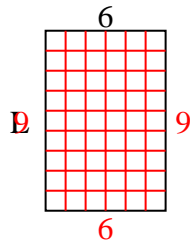


Calcola il valore di 'L'.

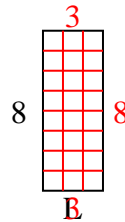
1) Area = $42u^2$



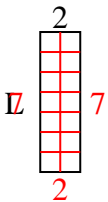
2) Area = $54u^2$



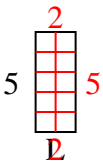
3) Area = $24u^2$



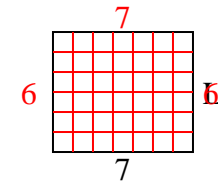
4) Area = $14u^2$



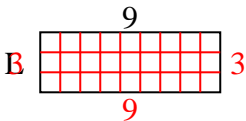
5) Area = $10u^2$



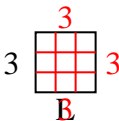
6) Area = $42u^2$



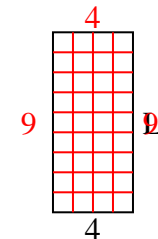
7) Area = $27u^2$



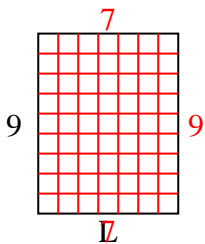
8) Area = $9u^2$



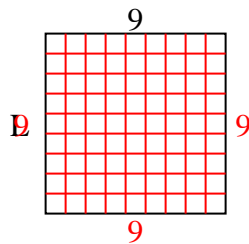
9) Area = $36u^2$



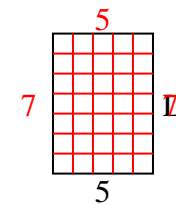
10) Area = $63u^2$



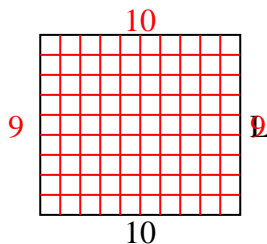
11) Area = $81u^2$



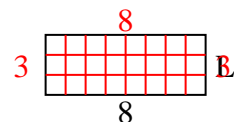
12) Area = $35u^2$



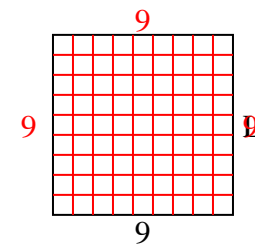
13) Area = $90u^2$



14) Area = $24u^2$



15) Area = $81u^2$

**Risposte**1. 72. 93. 34. 75. 26. 67. 38. 39. 910. 711. 912. 713. 914. 315. 9