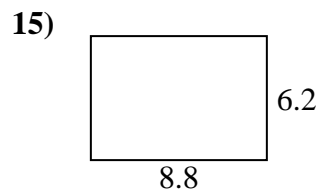
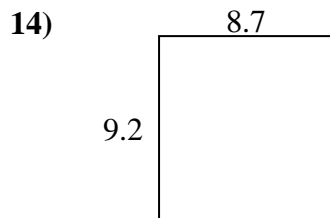
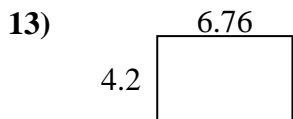
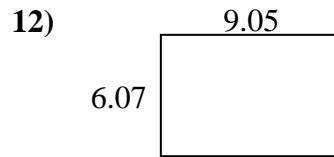
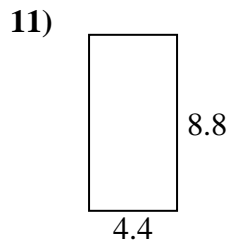
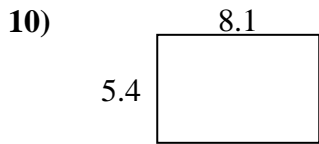
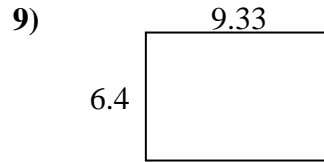
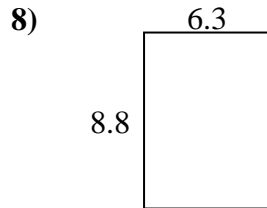
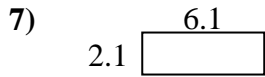
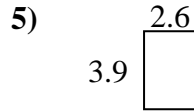
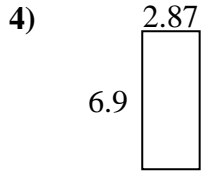
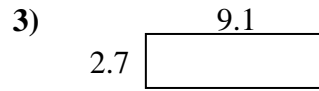
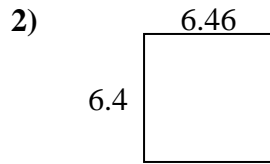
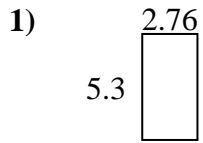




Trova il perimetro e l'area di ogni figura. Rispondi al decimo più vicino.

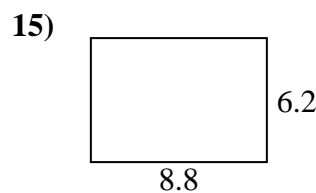
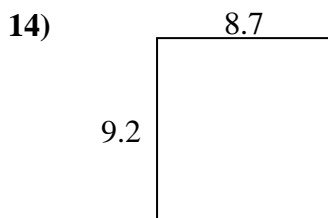
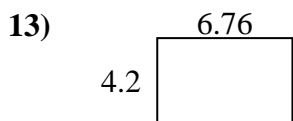
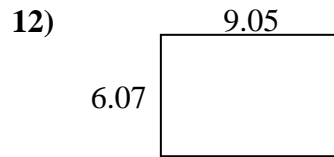
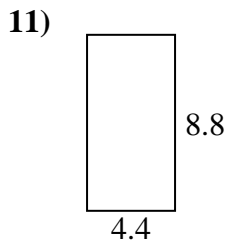
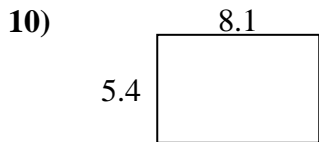
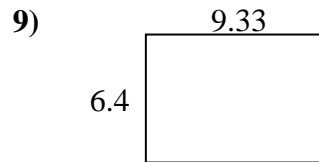
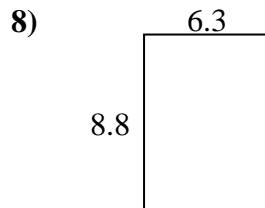
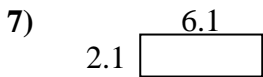
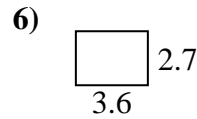
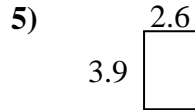
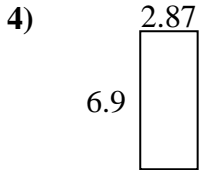
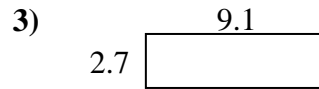
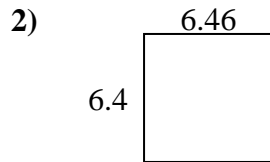
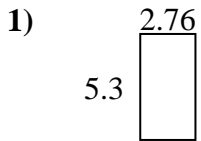


**Risposte**

1. \_\_\_\_\_
2. \_\_\_\_\_
3. \_\_\_\_\_
4. \_\_\_\_\_
5. \_\_\_\_\_
6. \_\_\_\_\_
7. \_\_\_\_\_
8. \_\_\_\_\_
9. \_\_\_\_\_
10. \_\_\_\_\_
11. \_\_\_\_\_
12. \_\_\_\_\_
13. \_\_\_\_\_
14. \_\_\_\_\_
15. \_\_\_\_\_



Trova il perimetro e l'area di ogni figura. Rispondi al decimo più vicino.

**Risposte**

1.	<u>14,6</u>	<u>16,1</u>
2.	<u>41,3</u>	<u>25,7</u>
3.	<u>24,6</u>	<u>23,6</u>
4.	<u>19,8</u>	<u>19,5</u>
5.	<u>10,1</u>	<u>13,0</u>
6.	<u>9,7</u>	<u>12,6</u>
7.	<u>12,8</u>	<u>16,4</u>
8.	<u>55,4</u>	<u>30,2</u>
9.	<u>59,7</u>	<u>31,5</u>
10.	<u>43,7</u>	<u>27,0</u>
11.	<u>38,7</u>	<u>26,4</u>
12.	<u>54,9</u>	<u>30,2</u>
13.	<u>28,4</u>	<u>21,9</u>
14.	<u>80,0</u>	<u>35,8</u>
15.	<u>54,6</u>	<u>30,0</u>