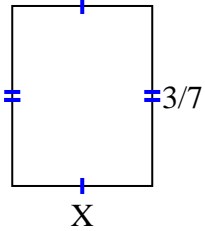


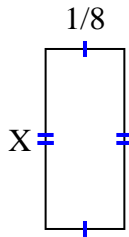


Trova il valore di X per ogni cifra. Ogni cifra è in centimetri (cm). Non in scala.

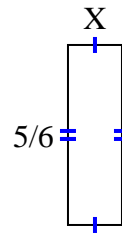
1) area = $\frac{9}{63}$ cm²



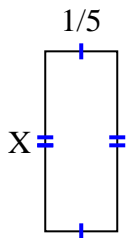
2) area = $\frac{2}{56}$ cm²



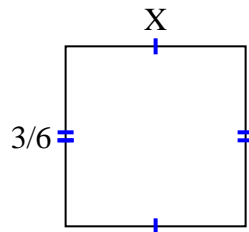
3) area = $\frac{5}{24}$ cm²



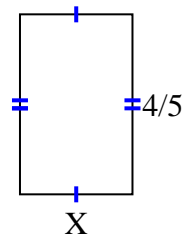
4) area = $\frac{1}{10}$ cm²



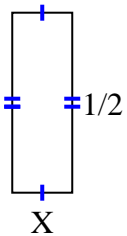
5) area = $\frac{6}{24}$ cm²



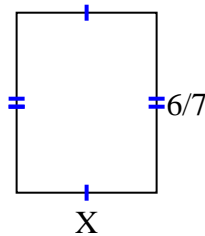
6) area = $\frac{4}{10}$ cm²



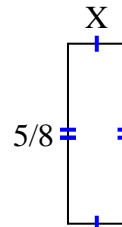
7) area = $\frac{1}{12}$ cm²



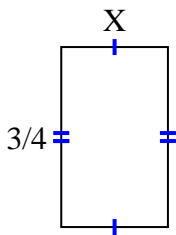
8) area = $\frac{36}{63}$ cm²



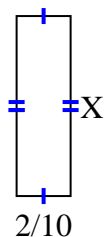
9) area = $\frac{5}{40}$ cm²



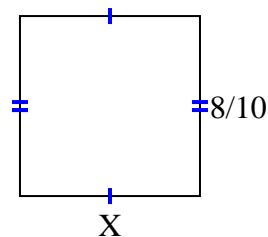
10) area = $\frac{12}{36}$ cm²



11) area = $\frac{8}{60}$ cm²



12) area = $\frac{64}{100}$ cm²



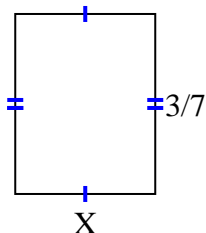
Risposte

1. _____
2. _____
3. _____
4. _____
5. _____
6. _____
7. _____
8. _____
9. _____
10. _____
11. _____
12. _____

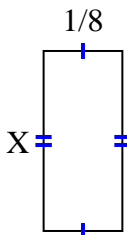


Trova il valore di X per ogni cifra. Ogni cifra è in centimetri (cm). Non in scala.

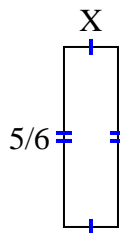
1) area = $\frac{9}{63} \text{ cm}^2$



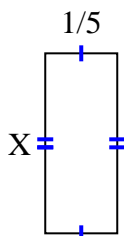
2) area = $\frac{2}{56} \text{ cm}^2$



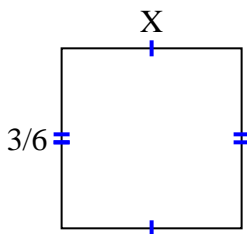
3) area = $\frac{5}{24} \text{ cm}^2$



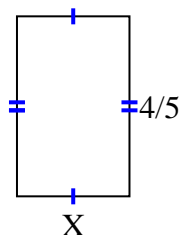
4) area = $\frac{1}{10} \text{ cm}^2$



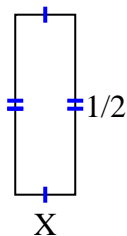
5) area = $\frac{6}{24} \text{ cm}^2$



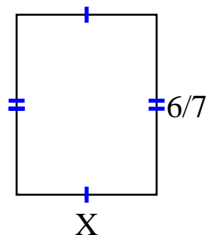
6) area = $\frac{4}{10} \text{ cm}^2$



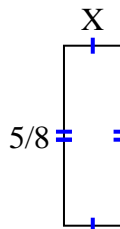
7) area = $\frac{1}{12} \text{ cm}^2$



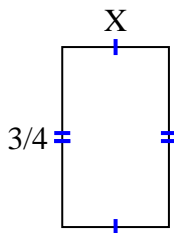
8) area = $\frac{36}{63} \text{ cm}^2$



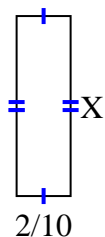
9) area = $\frac{5}{40} \text{ cm}^2$



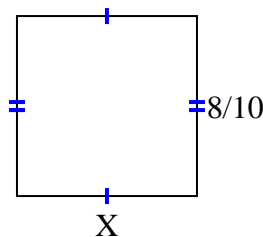
10) area = $\frac{12}{36} \text{ cm}^2$



11) area = $\frac{8}{60} \text{ cm}^2$



12) area = $\frac{64}{100} \text{ cm}^2$



Risposte

1. $\frac{3}{9}$

2. $\frac{2}{7}$

3. $\frac{1}{4}$

4. $\frac{1}{2}$

5. $\frac{2}{4}$

6. $\frac{1}{2}$

7. $\frac{1}{6}$

8. $\frac{6}{9}$

9. $\frac{1}{5}$

10. $\frac{4}{9}$

11. $\frac{4}{6}$

12. $\frac{8}{10}$