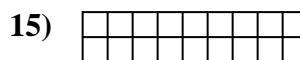
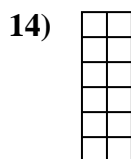
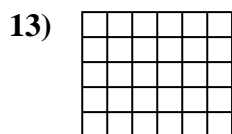
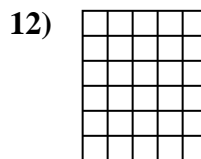
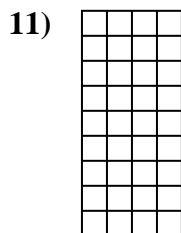

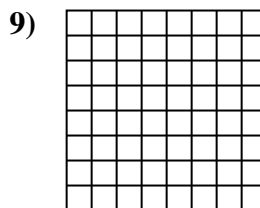


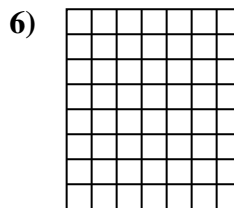
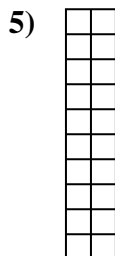

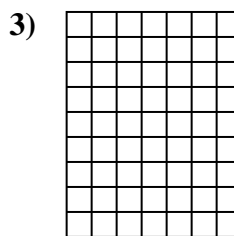
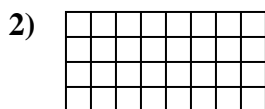





Calcola l'area. Ogni quadratino corrisponde ad 1 unità.

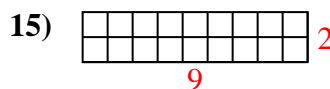
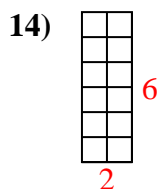
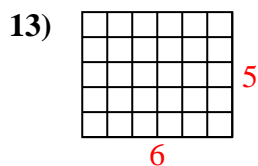
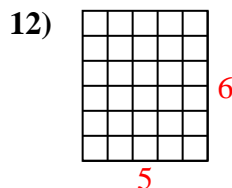
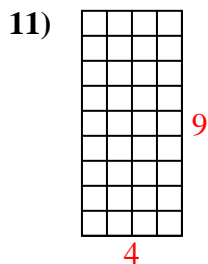
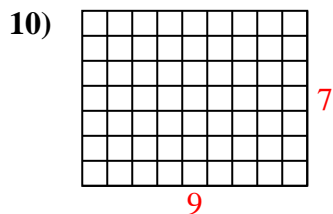
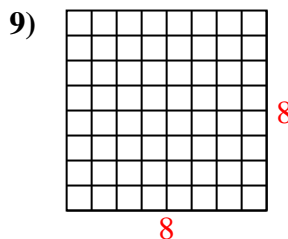
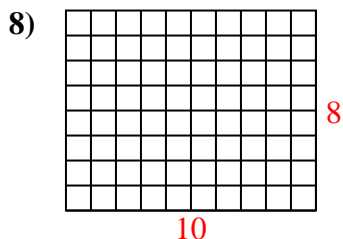
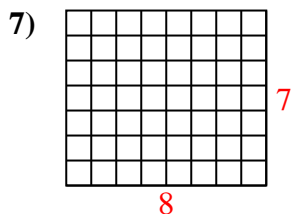
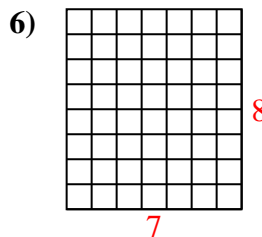
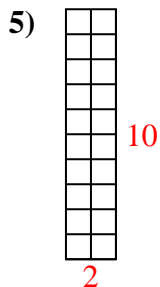
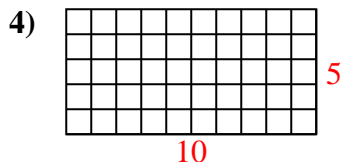
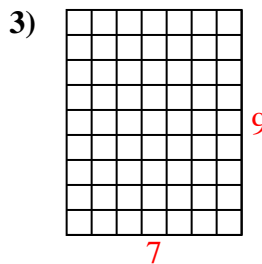
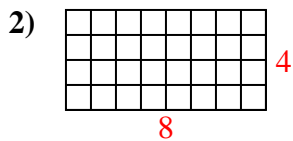
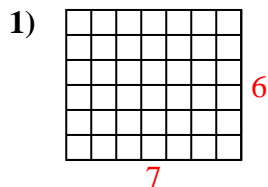


**Risposte**

1. \_\_\_\_\_
2. \_\_\_\_\_
3. \_\_\_\_\_
4. \_\_\_\_\_
5. \_\_\_\_\_
6. \_\_\_\_\_
7. \_\_\_\_\_
8. \_\_\_\_\_
9. \_\_\_\_\_
10. \_\_\_\_\_
11. \_\_\_\_\_
12. \_\_\_\_\_
13. \_\_\_\_\_
14. \_\_\_\_\_
15. \_\_\_\_\_



Calcola l'area. Ogni quadratino corrisponde ad 1 unità.



**Risposte**

1. 42 u<sup>2</sup>

2. 32 u<sup>2</sup>

3. 63 u<sup>2</sup>

4. 50 u<sup>2</sup>

5. 20 u<sup>2</sup>

6. 56 u<sup>2</sup>

7. 56 u<sup>2</sup>

8. 80 u<sup>2</sup>

9. 64 u<sup>2</sup>

10. 63 u<sup>2</sup>

11. 36 u<sup>2</sup>

12. 30 u<sup>2</sup>

13. 30 u<sup>2</sup>

14. 12 u<sup>2</sup>

15. 18 u<sup>2</sup>