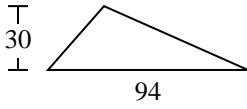


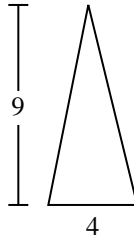


Trova l'area di ciascun traingoli. Le dimensioni non sono in scala.

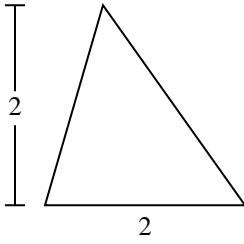
1)



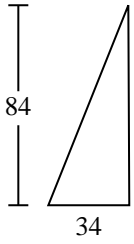
2)



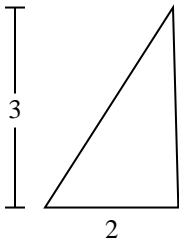
3)



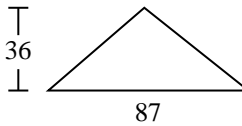
4)



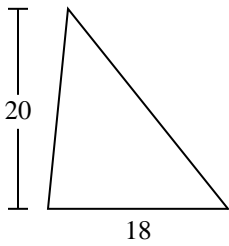
5)



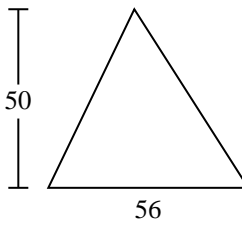
6)



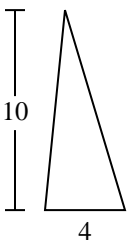
7)



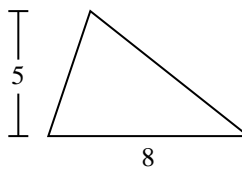
8)



9)



10)



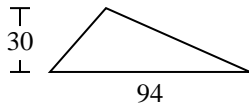
Risposte

1. _____
2. _____
3. _____
4. _____
5. _____
6. _____
7. _____
8. _____
9. _____
10. _____

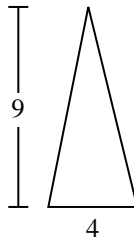


Trova l'area di ciascun traingoli. Le dimensioni non sono in scala.

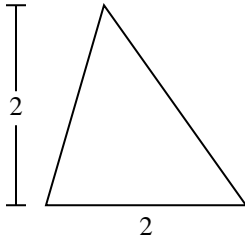
1)



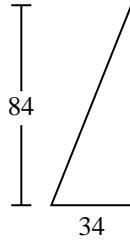
2)



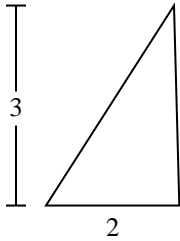
3)



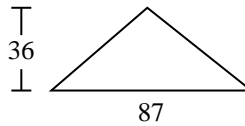
4)



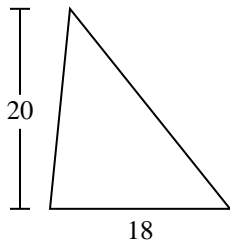
5)



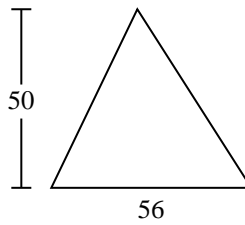
6)



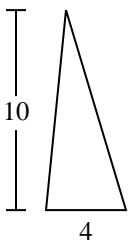
7)



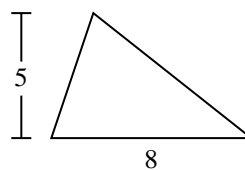
8)



9)



10)

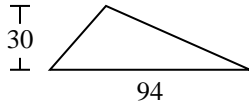
**Risposte**1. **1.410**2. **18**3. **2**4. **1.428**5. **3**6. **1.566**7. **180**8. **1.400**9. **20**10. **20**



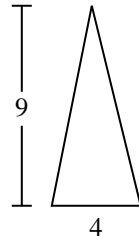
Trova l'area di ciascun traingoli. Le dimensioni non sono in scala.

180	1.428	18	1.566	1.400
3	2	20	1.410	

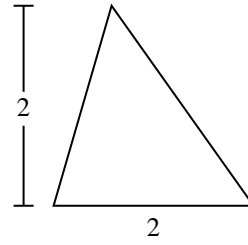
1)



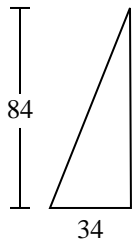
2)



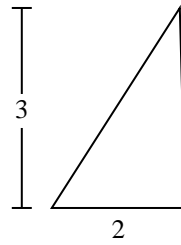
3)



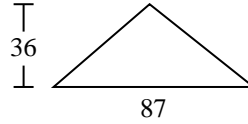
4)



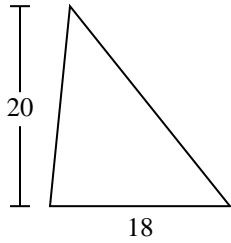
5)



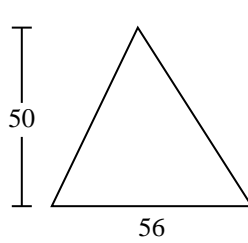
6)



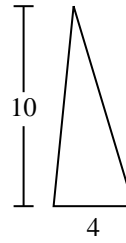
7)



8)



9)



Risposte

1. _____
2. _____
3. _____
4. _____
5. _____
6. _____
7. _____
8. _____
9. _____