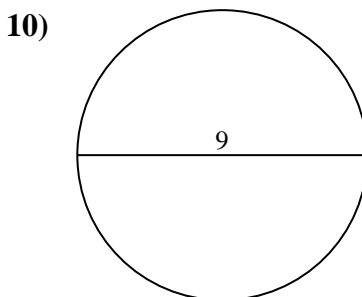
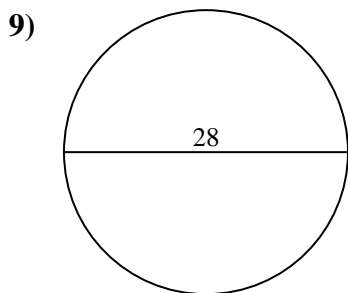
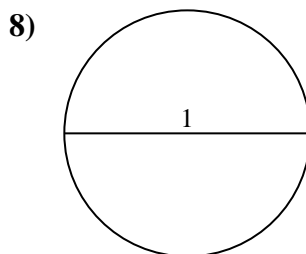
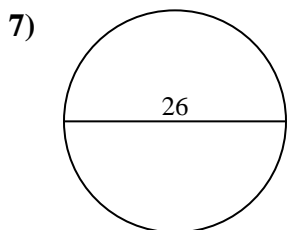
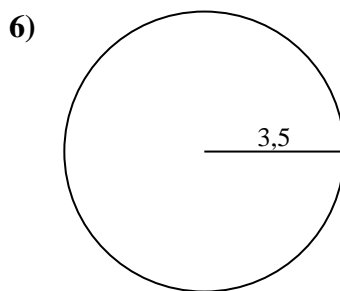
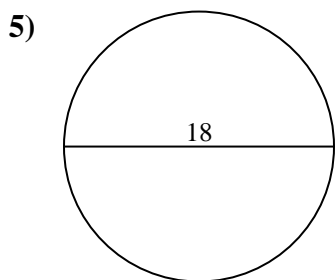
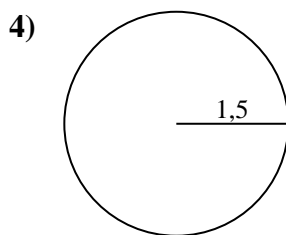
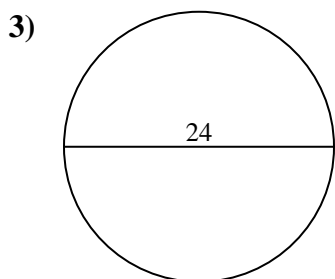
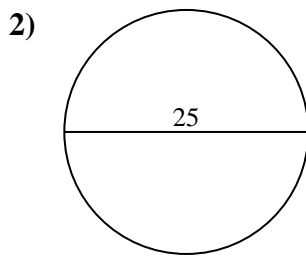
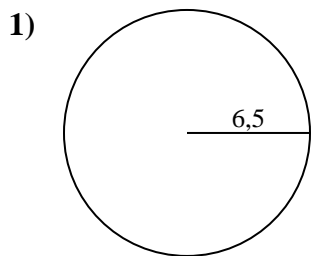




Calcola l'area di ogni cerchio. i cerchi non sono in scala.



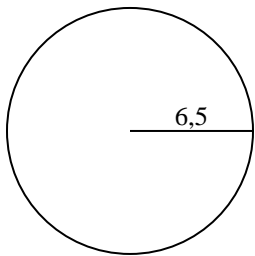
Risposte

- 1. _____
- 2. _____
- 3. _____
- 4. _____
- 5. _____
- 6. _____
- 7. _____
- 8. _____
- 9. _____
- 10. _____

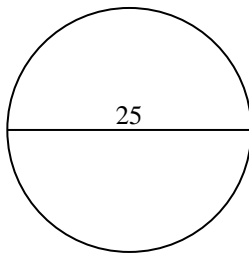


Calcola l'area di ogni cerchio. i cerchi non sono in scala.

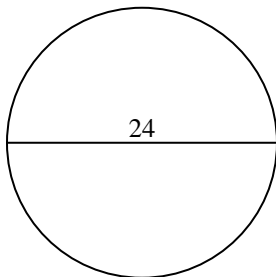
1)



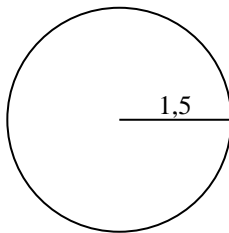
2)



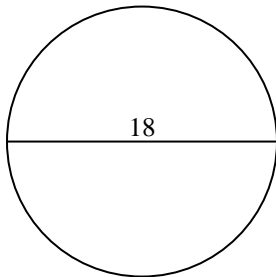
3)



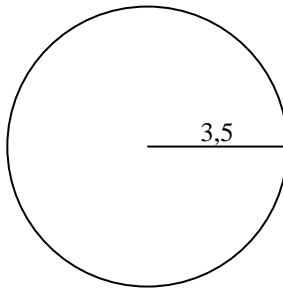
4)



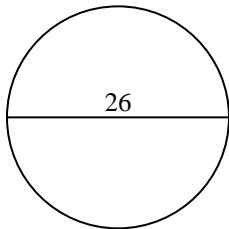
5)



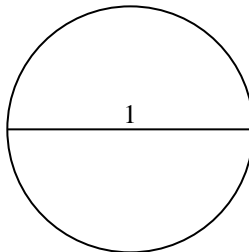
6)



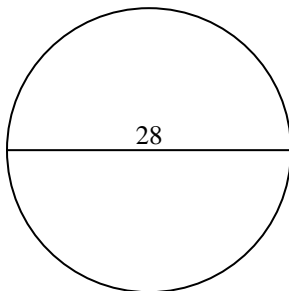
7)



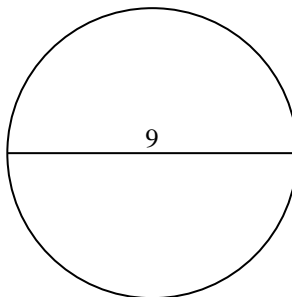
8)



9)



10)

**Risposte**1. 132,72. 490,93. 452,44. 7,15. 254,56. 38,57. 530,98. 0,89. 615,810. 63,6



Calcola l'area di ogni cerchio. i cerchi non sono in scala.

Risposte

254,5

615,8

530,9

132,7

452,4

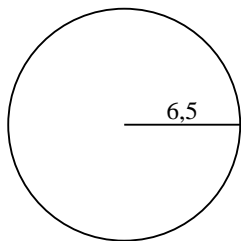
38,5

0,8

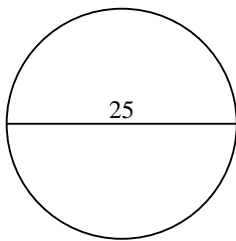
490,9

7,1

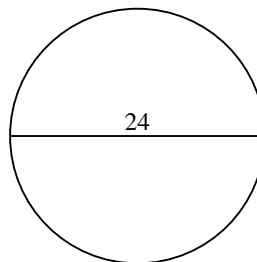
1)



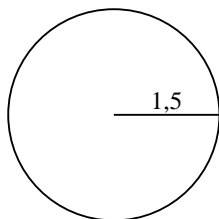
2)



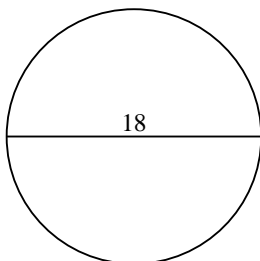
3)



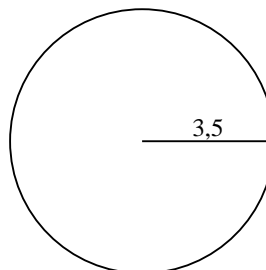
4)



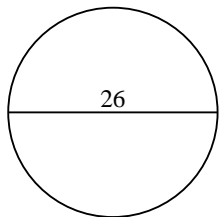
5)



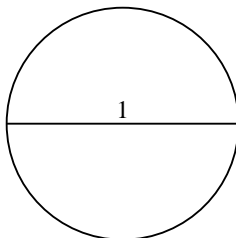
6)



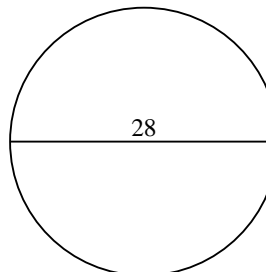
7)



8)



9)



1. _____

2. _____

3. _____

4. _____

5. _____

6. _____

7. _____

8. _____

9. _____