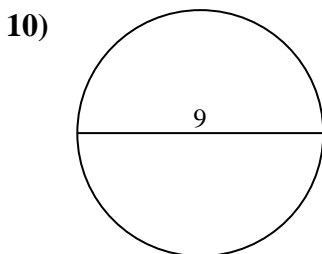
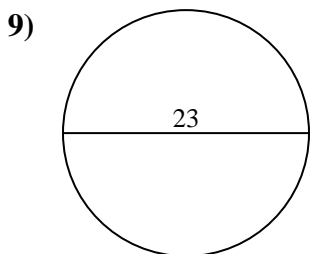
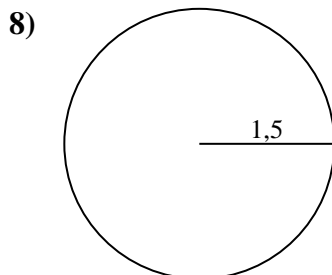
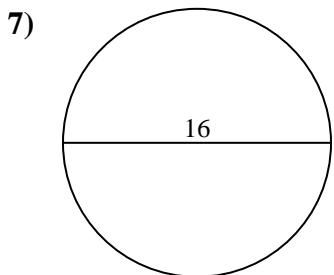
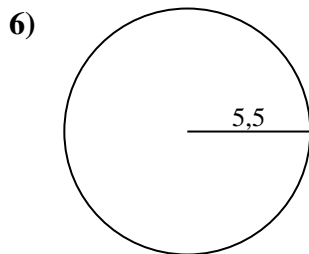
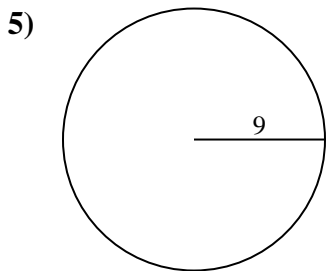
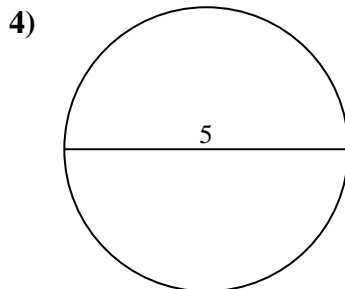
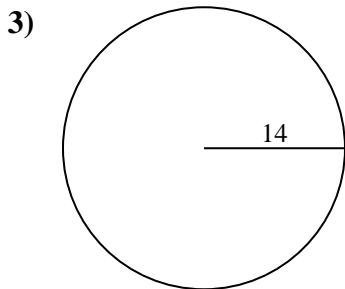
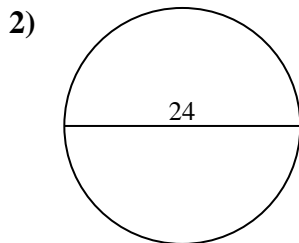
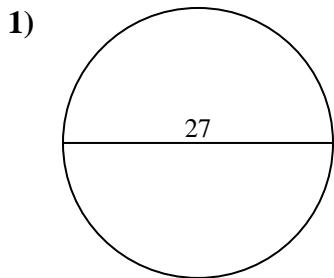




Calcola area e perimetro. Non sono in scala.

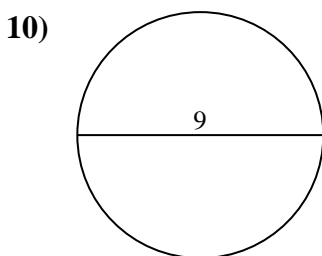
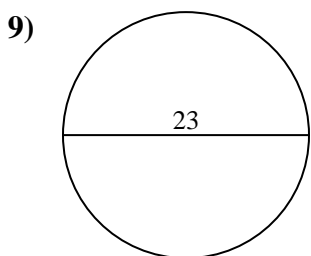
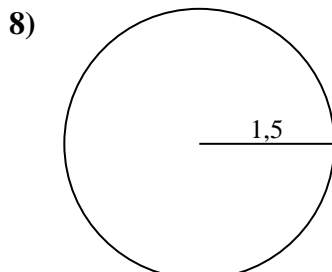
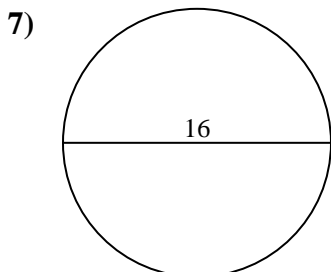
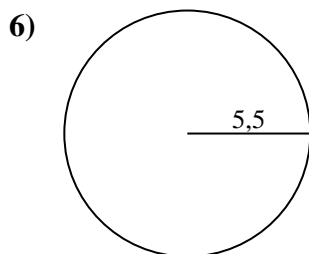
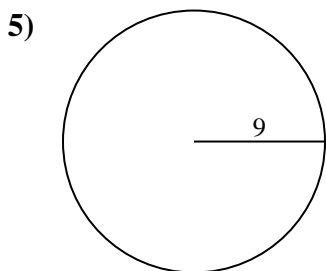
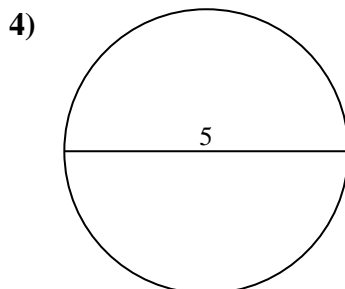
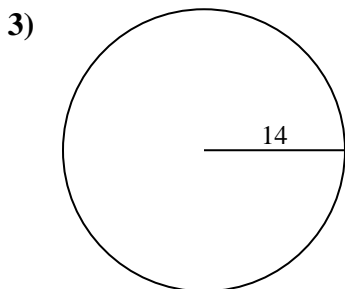
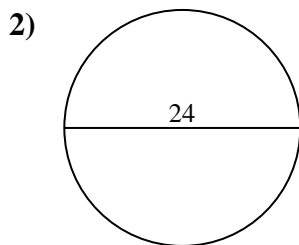
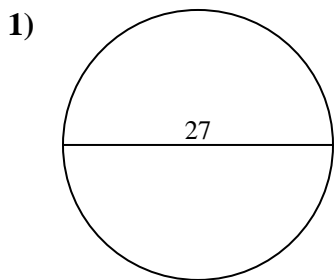


**Risposte**

- 1. \_\_\_\_\_
- 2. \_\_\_\_\_
- 3. \_\_\_\_\_
- 4. \_\_\_\_\_
- 5. \_\_\_\_\_
- 6. \_\_\_\_\_
- 7. \_\_\_\_\_
- 8. \_\_\_\_\_
- 9. \_\_\_\_\_
- 10. \_\_\_\_\_



Calcola area e perimetro. Non sono in scala.



**Risposte**

1.	<u>572,6</u>	<u>84,8</u>
2.	<u>452,4</u>	<u>75,4</u>
3.	<u>615,8</u>	<u>88</u>
4.	<u>19,6</u>	<u>15,7</u>
5.	<u>254,5</u>	<u>56,5</u>
6.	<u>95</u>	<u>34,6</u>
7.	<u>201,1</u>	<u>50,3</u>
8.	<u>7,1</u>	<u>9,4</u>
9.	<u>415,5</u>	<u>72,3</u>
10.	<u>63,6</u>	<u>28,3</u>



Calcola area e perimetro. Non sono in scala.

34,6	254,5	72,3	7,1	95
615,8	19,6	572,6	75,4	415,5
15,7	84,8	50,3	88	201,1
9,4	452,4	56,5		

**Risposte**

1. \_\_\_\_\_
2. \_\_\_\_\_
3. \_\_\_\_\_
4. \_\_\_\_\_
5. \_\_\_\_\_
6. \_\_\_\_\_
7. \_\_\_\_\_
8. \_\_\_\_\_
9. \_\_\_\_\_

