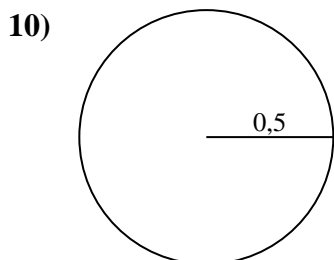
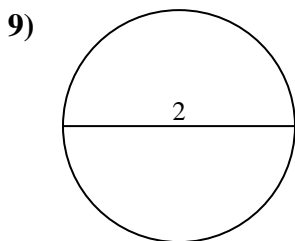
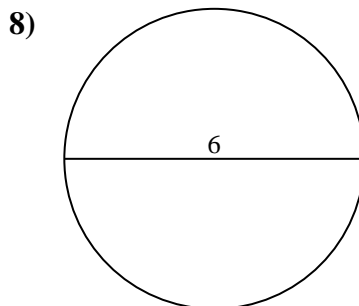
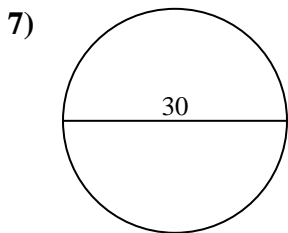
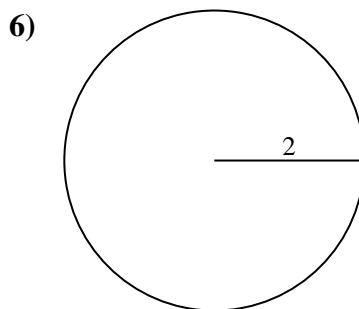
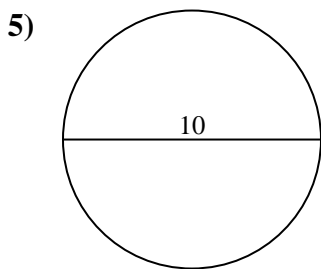
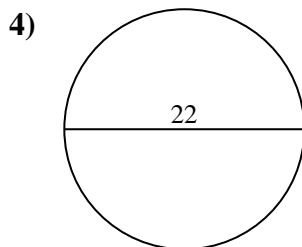
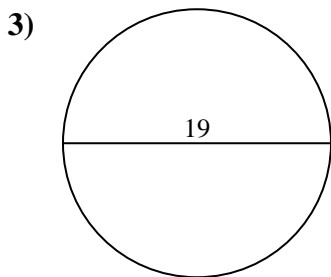
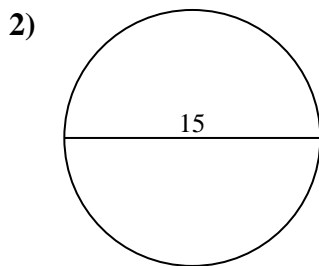
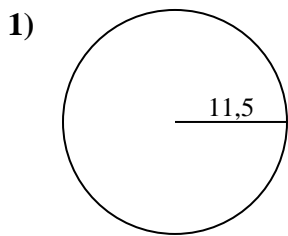




Calcola area e perimetro. Non sono in scala.

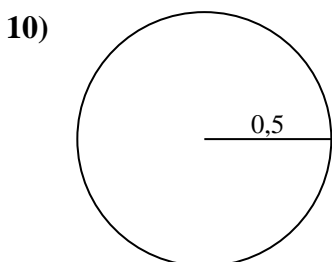
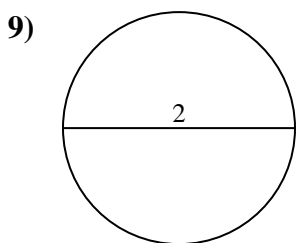
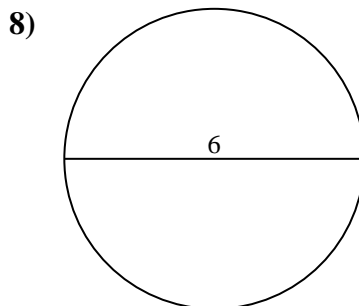
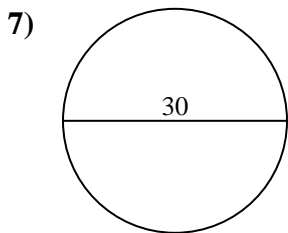
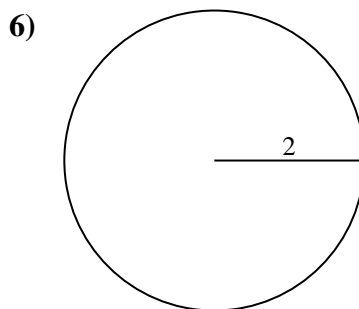
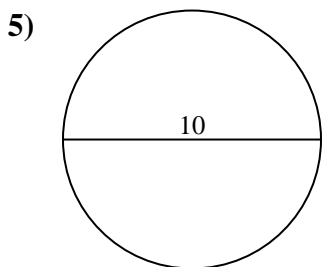
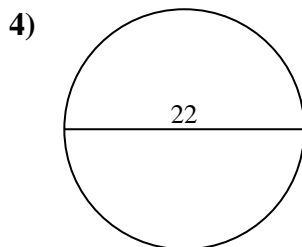
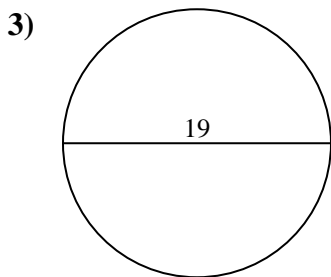
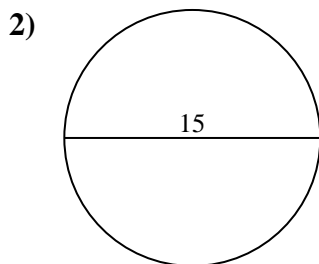
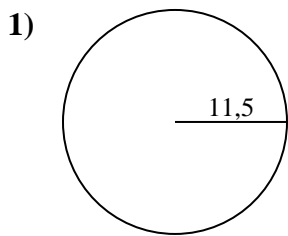


**Risposte**

- 1. \_\_\_\_\_
- 2. \_\_\_\_\_
- 3. \_\_\_\_\_
- 4. \_\_\_\_\_
- 5. \_\_\_\_\_
- 6. \_\_\_\_\_
- 7. \_\_\_\_\_
- 8. \_\_\_\_\_
- 9. \_\_\_\_\_
- 10. \_\_\_\_\_



Calcola area e perimetro. Non sono in scala.



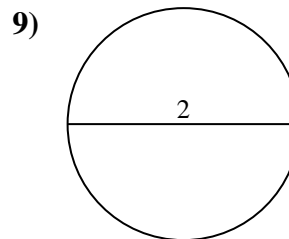
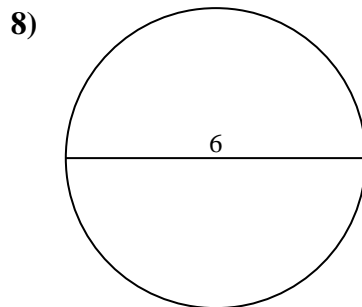
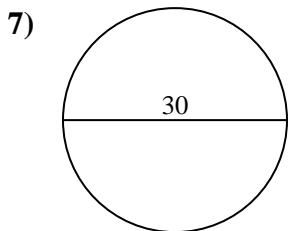
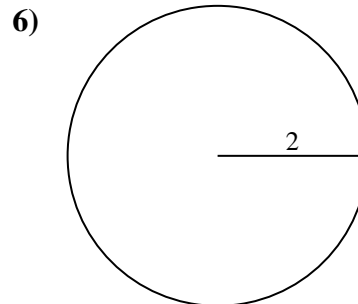
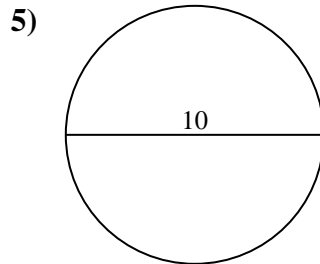
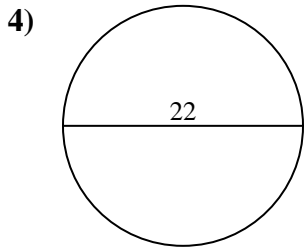
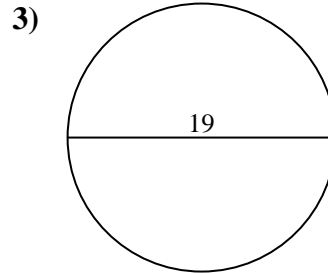
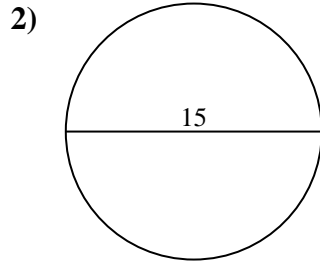
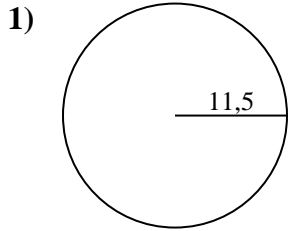
**Risposte**

1.	<u>415,5</u>	<u>72,3</u>
2.	<u>176,7</u>	<u>47,1</u>
3.	<u>283,5</u>	<u>59,7</u>
4.	<u>380,1</u>	<u>69,1</u>
5.	<u>78,5</u>	<u>31,4</u>
6.	<u>12,6</u>	<u>12,6</u>
7.	<u>706,9</u>	<u>94,2</u>
8.	<u>28,3</u>	<u>18,8</u>
9.	<u>3,1</u>	<u>6,3</u>
10.	<u>0,8</u>	<u>3,1</u>



Calcola area e perimetro. Non sono in scala.

72,3	18,8	78,5	6,3	380,1
706,9	12,6	12,6	69,1	415,5
176,7	28,3	94,2	47,1	31,4
283,5	3,1	59,7		



**Risposte**

1. \_\_\_\_\_
2. \_\_\_\_\_
3. \_\_\_\_\_
4. \_\_\_\_\_
5. \_\_\_\_\_
6. \_\_\_\_\_
7. \_\_\_\_\_
8. \_\_\_\_\_
9. \_\_\_\_\_