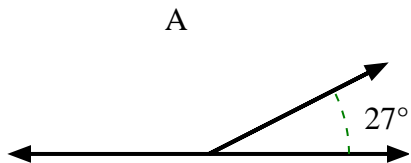


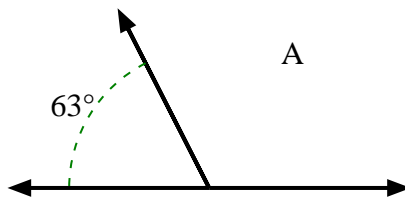


Trova il valore di 'A' nell'insieme degli angoli supplementari.

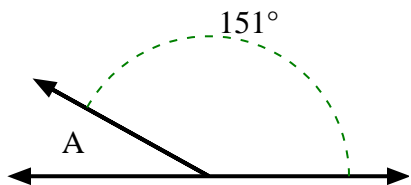
1)



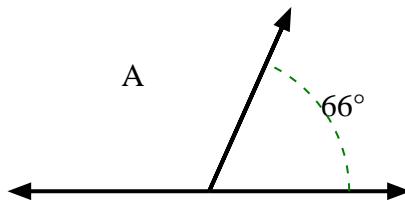
2)



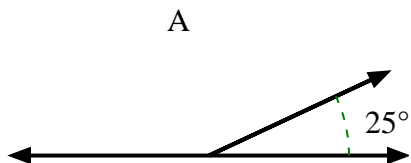
3)



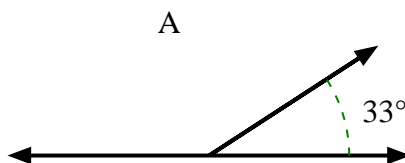
4)



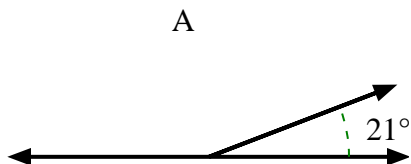
5)



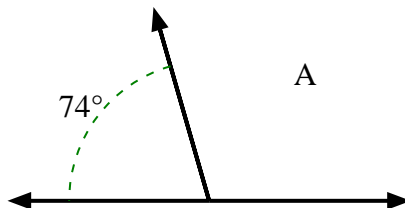
6)



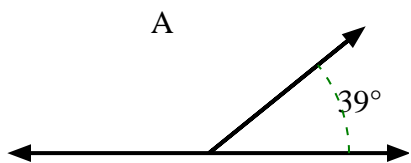
7)



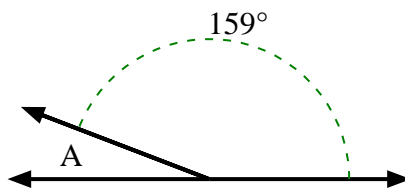
8)



9)



10)



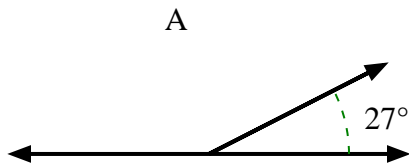
Risposte

1. _____
2. _____
3. _____
4. _____
5. _____
6. _____
7. _____
8. _____
9. _____
10. _____

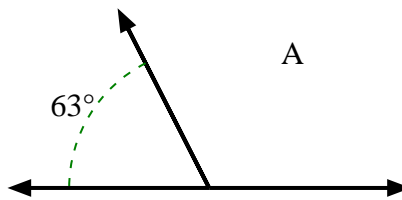


Trova il valore di 'A' nell'insieme degli angoli supplementari.

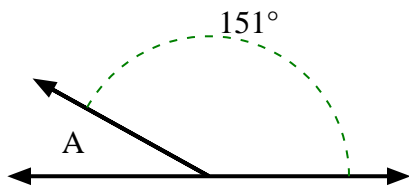
1)



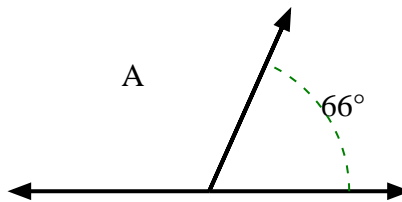
2)



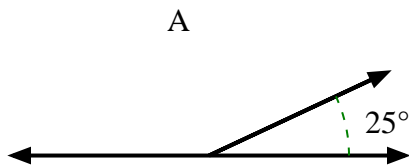
3)



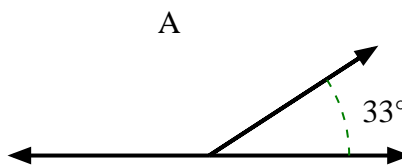
4)



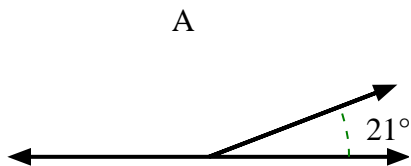
5)



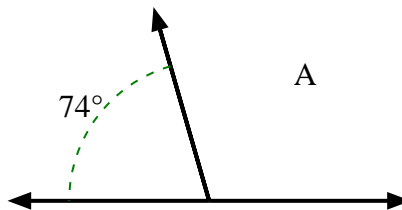
6)



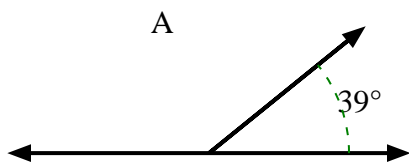
7)



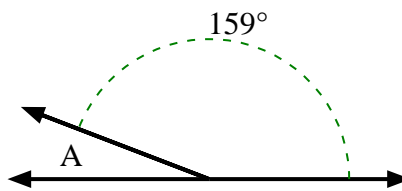
8)



9)



10)



Risposte

1. 153°
2. 117°
3. 29°
4. 114°
5. 155°
6. 147°
7. 159°
8. 106°
9. 141°
10. 21°