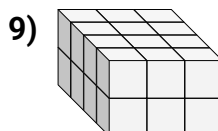
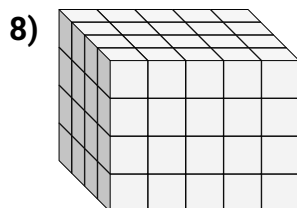
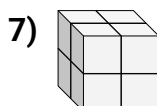
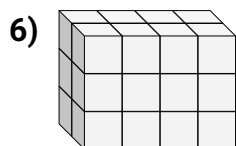
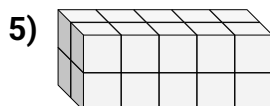
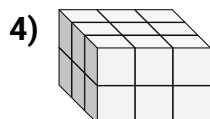
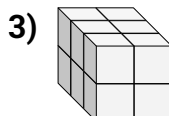
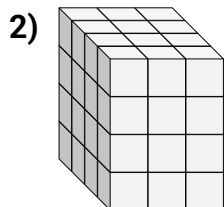
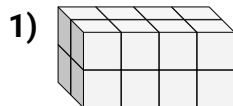
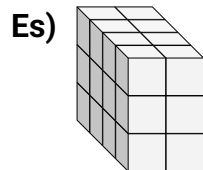




Trova la lunghezza, larghezza e altezza di ogni prisma. Poi calcola il volume.

**Risposte**Es. 4 2 3 24

1. _____

2. _____

3. _____

4. _____

5. _____

6. _____

7. _____

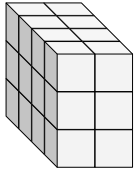
8. _____

9. _____

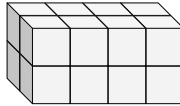


Trova la lunghezza, larghezza e altezza di ogni prisma. Poi calcola il volume.

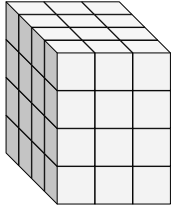
Es)



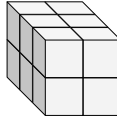
1)



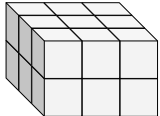
2)



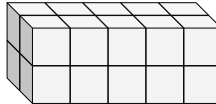
3)



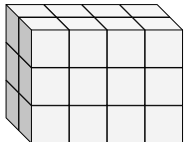
4)



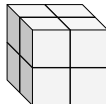
5)



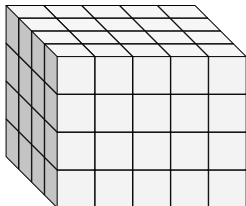
6)



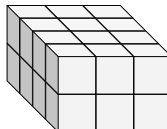
7)



8)



9)

**Risposte**Es. 4 2 3 241. 2 4 2 162. 4 3 4 483. 3 2 2 124. 3 3 2 185. 2 5 2 206. 2 4 3 247. 2 2 2 88. 4 5 4 809. 4 3 2 24