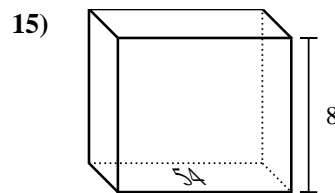
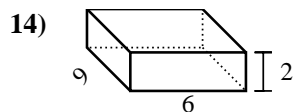
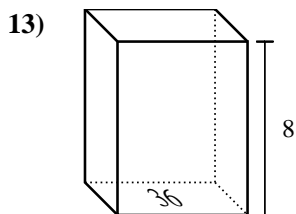
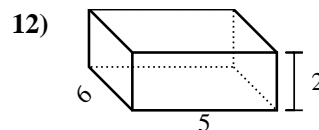
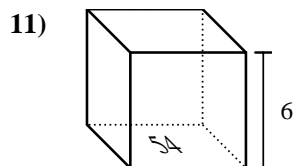
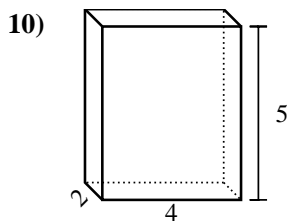
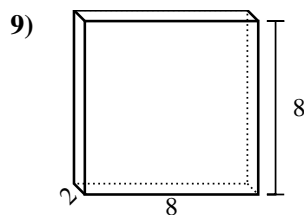
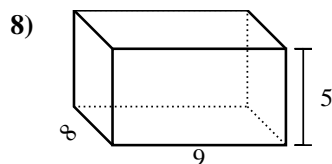
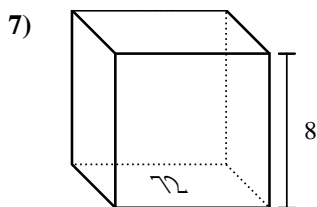
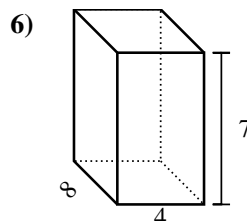
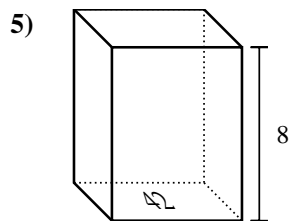
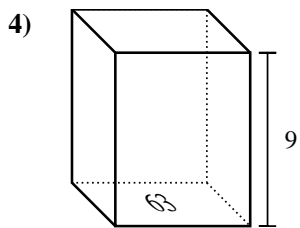
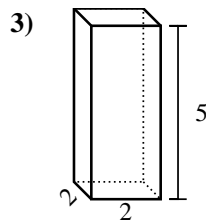
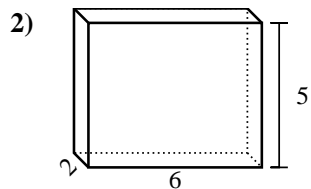
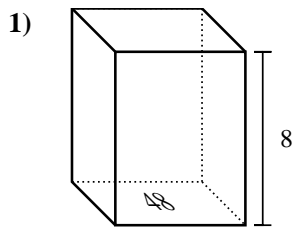


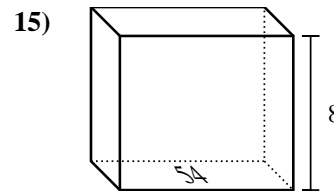
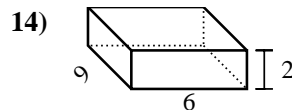
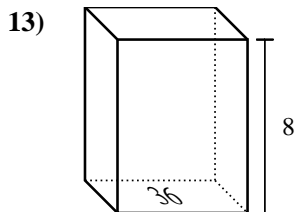
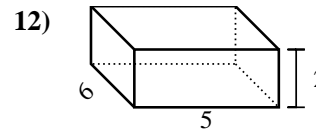
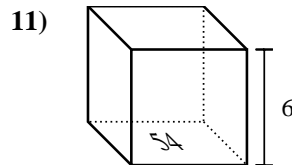
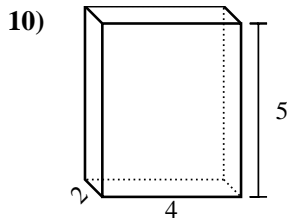
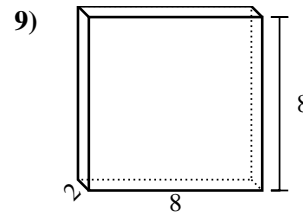
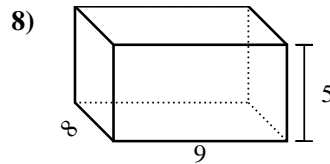
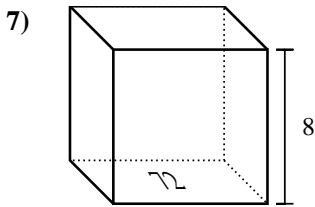
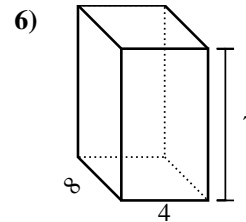
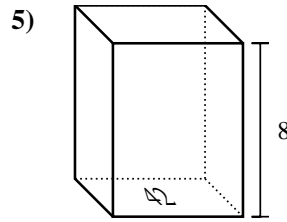
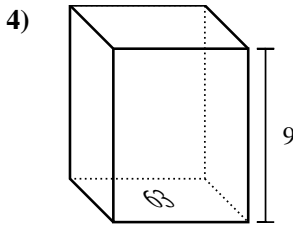
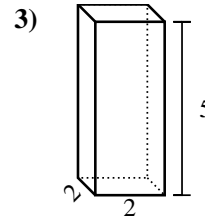
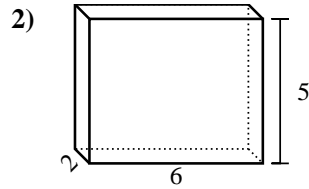
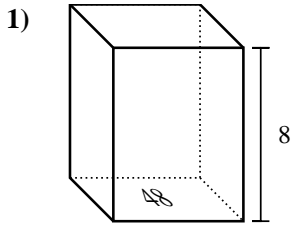


Trova il volume di ogni prisma. Ricorda $V=B \times H$ e $V=L \times P \times H$.



Risposte

1. _____
2. _____
3. _____
4. _____
5. _____
6. _____
7. _____
8. _____
9. _____
10. _____
11. _____
12. _____
13. _____
14. _____
15. _____

Trova il volume di ogni prisma. Ricorda $V=B \times H$ e $V=L \times P \times H$.**Risposte**1. 384 cm³2. 60 cm³3. 20 cm³4. 567 cm³5. 336 cm³6. 224 cm³7. 576 cm³8. 360 cm³9. 128 cm³10. 40 cm³11. 324 cm³12. 60 cm³13. 288 cm³14. 108 cm³15. 432 cm³