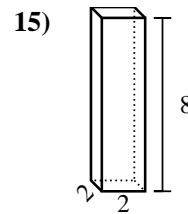
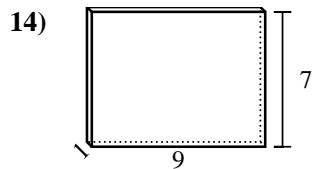
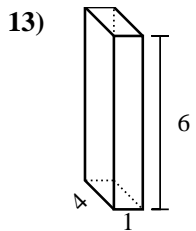
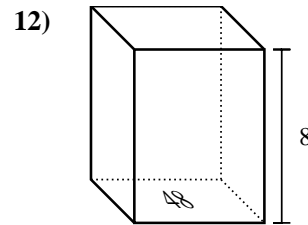
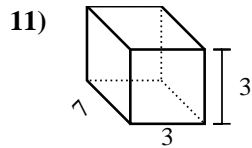
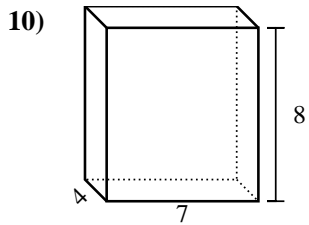
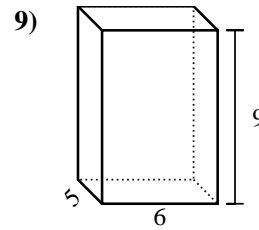
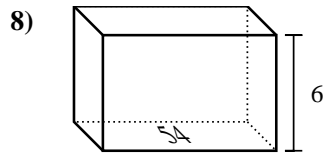
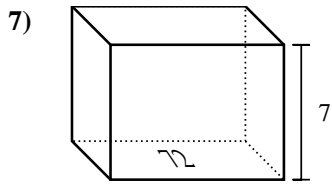
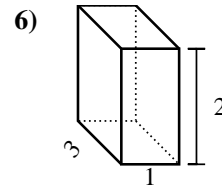
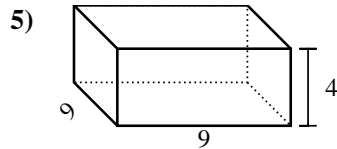
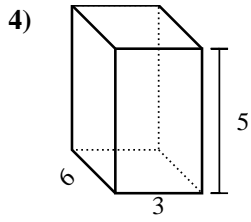
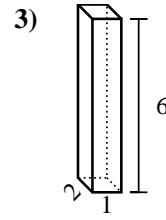
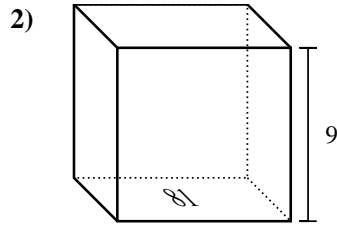
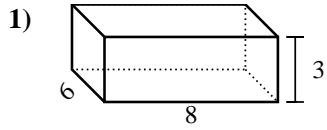


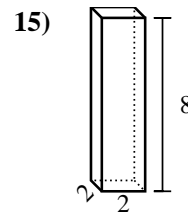
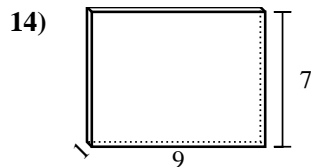
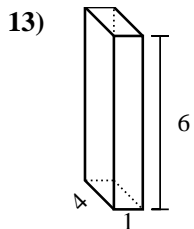
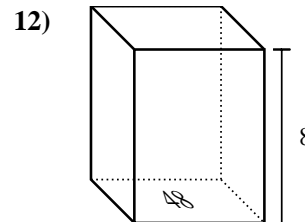
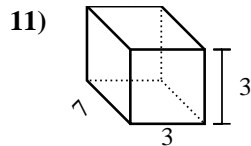
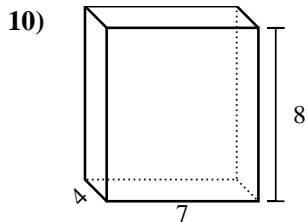
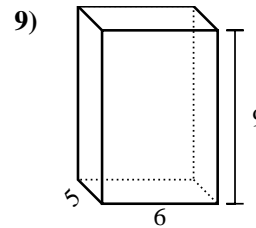
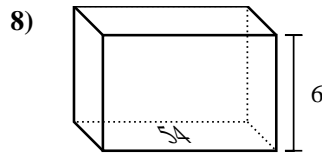
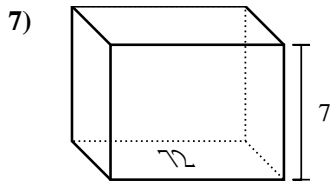
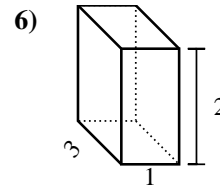
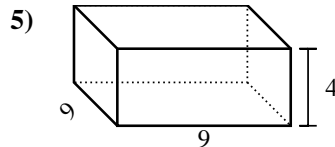
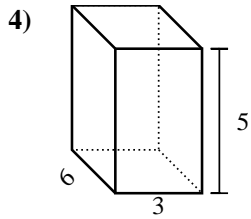
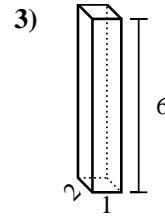
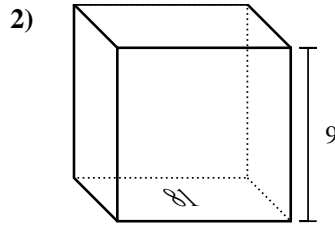
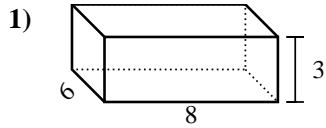


Trova il volume di ogni prisma. Ricorda $V=B \times H$ e $V=L \times P \times H$.



Risposte

1. _____
2. _____
3. _____
4. _____
5. _____
6. _____
7. _____
8. _____
9. _____
10. _____
11. _____
12. _____
13. _____
14. _____
15. _____

Trova il volume di ogni prisma. Ricorda $V=B \times H$ e $V=L \times P \times H$.**Risposte**1. **144 cm³**2. **729 cm³**3. **12 cm³**4. **90 cm³**5. **324 cm³**6. **6 cm³**7. **504 cm³**8. **324 cm³**9. **270 cm³**10. **224 cm³**11. **63 cm³**12. **384 cm³**13. **24 cm³**14. **63 cm³**15. **32 cm³**