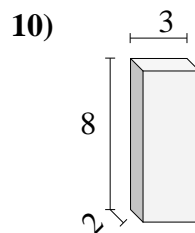
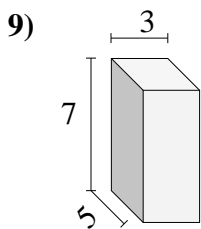
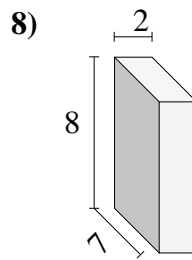
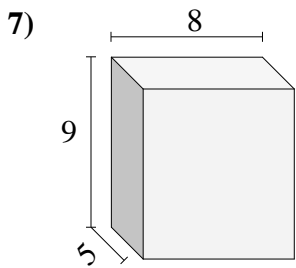
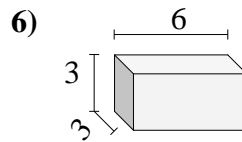
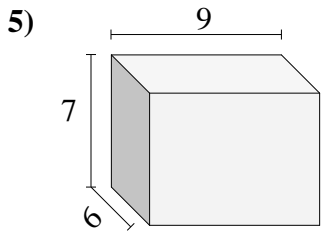
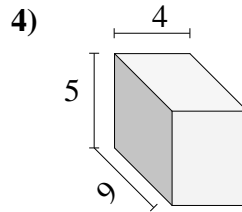
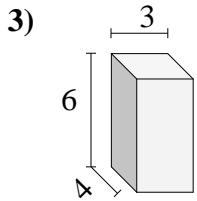
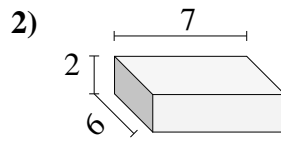
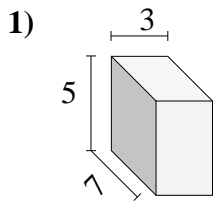




Trova il volume di ogni prisma.

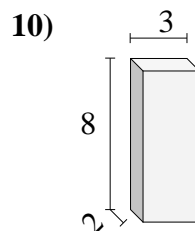
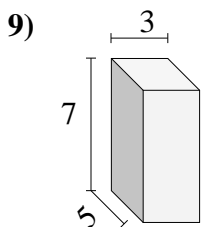
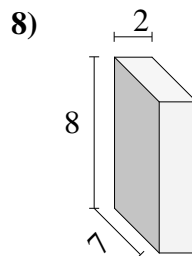
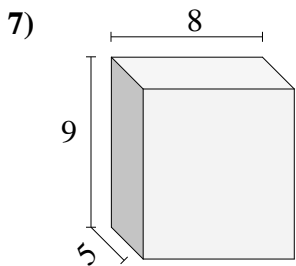
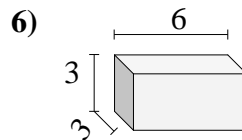
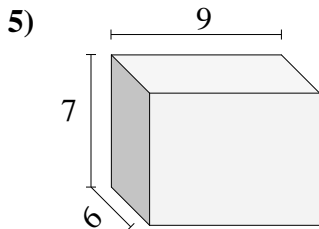
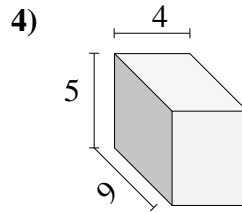
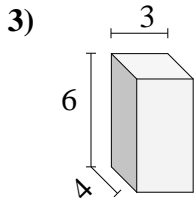
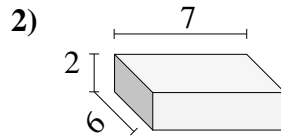
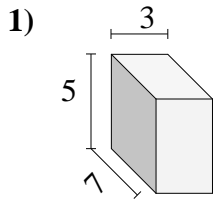


Risposte

- 1. _____
- 2. _____
- 3. _____
- 4. _____
- 5. _____
- 6. _____
- 7. _____
- 8. _____
- 9. _____
- 10. _____



Trova il volume di ogni prisma.

**Risposte**

1. 105
2. 84
3. 72
4. 180
5. 378
6. 54
7. 360
8. 112
9. 105
10. 48