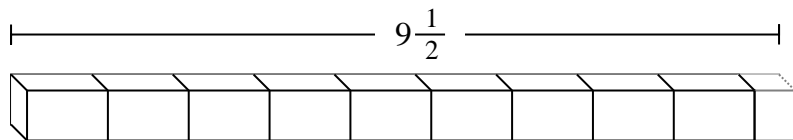


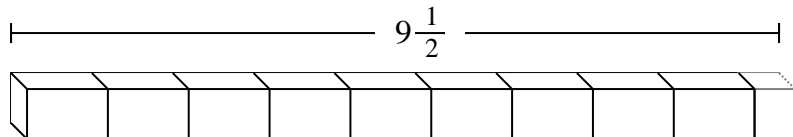


Indica il numero di piccole unità o parti frazionate che si possono ricavare dai pezzi più grandi.

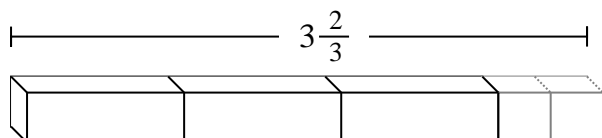
Es)



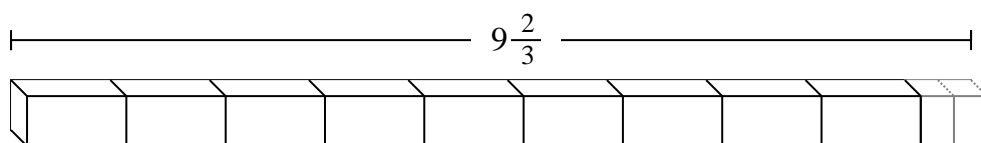
1)



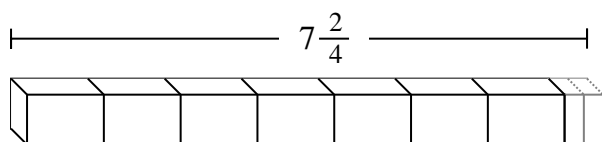
2)



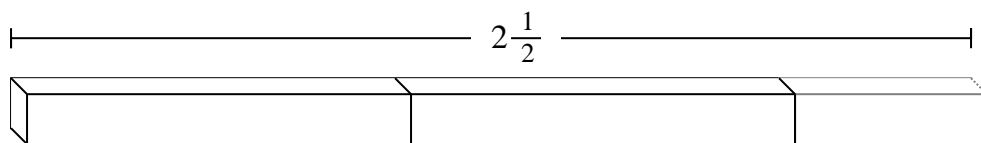
3)



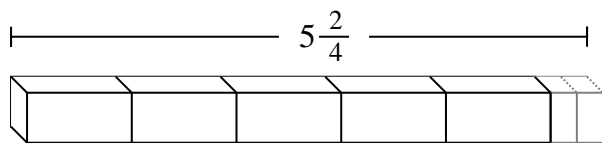
4)



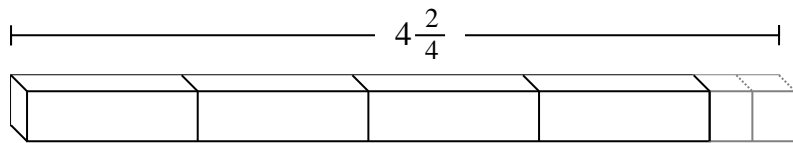
5)



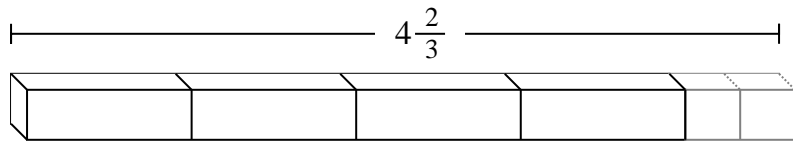
6)



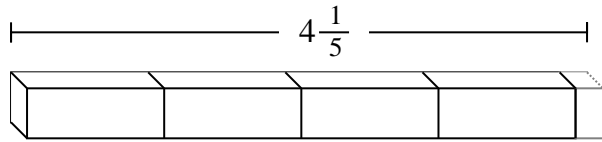
7)



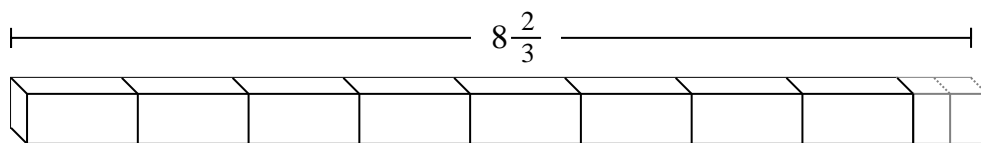
8)



9)



10)



Risposte

Es. **19**

1. _____

2. _____

3. _____

4. _____

5. _____

6. _____

7. _____

8. _____

9. _____

10. _____



Indica il numero di piccole unità o parti frazionate che si possono ricavare dai pezzi più grandi.

Es) $9\frac{1}{2}$

1) $9\frac{1}{2}$

2) $3\frac{2}{3}$

3) $9\frac{2}{3}$

4) $7\frac{2}{4}$

5) $2\frac{1}{2}$

6) $5\frac{2}{4}$

7) $4\frac{2}{4}$

8) $4\frac{2}{3}$

9) $4\frac{1}{5}$

10) $8\frac{2}{3}$

Risposte

- Es. 19
1. 19
2. 11
3. 29
4. 30
5. 5
6. 22
7. 18
8. 14
9. 21
10. 26