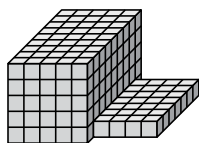




Trova il volume totale di ogni figura. La misura è in cm (non in scala).

**Risposte**

1)



1. \_\_\_\_\_

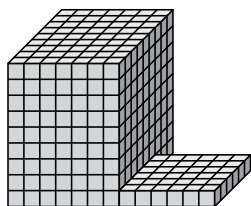
2. \_\_\_\_\_

3. \_\_\_\_\_

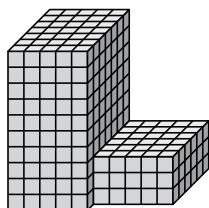
4. \_\_\_\_\_

5. \_\_\_\_\_

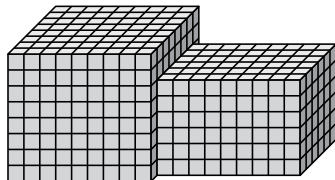
2)



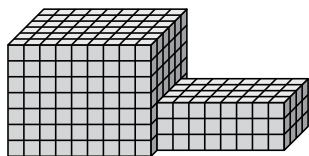
3)



4)



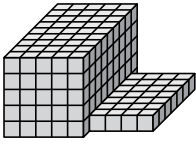
5)





Trova il volume totale di ogni figura. La misura è in cm (non in scala).

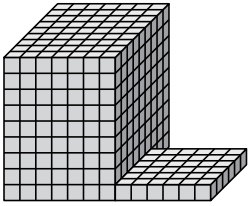
1)



$$5 \times 9 \times 5 = 225$$

$$4 \times 7 \times 1 = 28$$

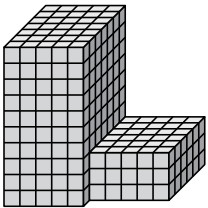
2)



$$7 \times 9 \times 9 = 567$$

$$6 \times 6 \times 1 = 36$$

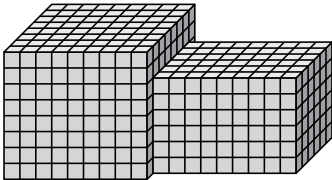
3)



$$5 \times 7 \times 10 = 350$$

$$5 \times 6 \times 3 = 90$$

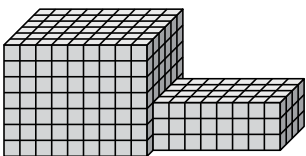
4)



$$9 \times 8 \times 8 = 576$$

$$9 \times 6 \times 6 = 324$$

5)



$$9 \times 6 \times 7 = 378$$

$$8 \times 4 \times 3 = 96$$

**Risposte**

1. 253 cm<sup>3</sup>

2. 603 cm<sup>3</sup>

3. 440 cm<sup>3</sup>

4. 900 cm<sup>3</sup>

5. 474 cm<sup>3</sup>