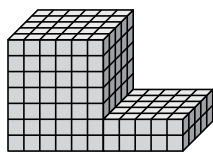




Trova il volume totale di ogni figura. La misura è in cm (non in scala).

Risposte

1)



1. _____

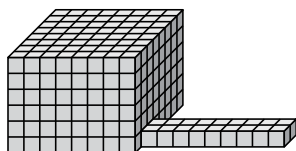
2. _____

3. _____

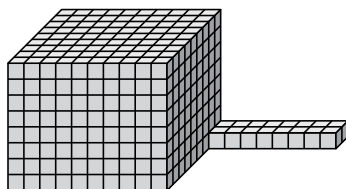
4. _____

5. _____


2)



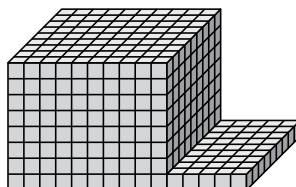
3)



4)



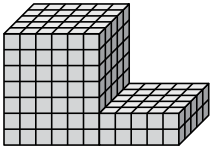
5)





Trova il volume totale di ogni figura. La misura è in cm (non in scala).

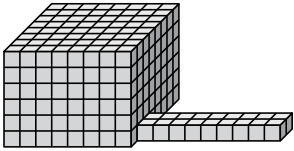
1)



$$6 \times 5 \times 7 = 210$$

$$5 \times 5 \times 2 = 50$$

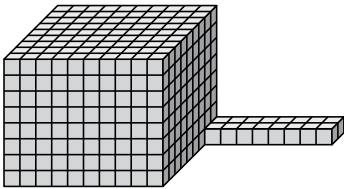
2)



$$8 \times 8 \times 6 = 384$$

$$9 \times 2 \times 1 = 18$$

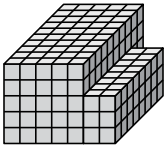
3)



$$10 \times 9 \times 8 = 720$$

$$8 \times 2 \times 1 = 16$$

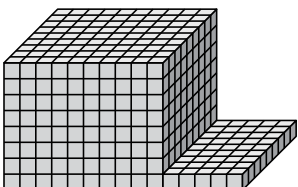
4)



$$5 \times 10 \times 5 = 250$$

$$2 \times 8 \times 3 = 48$$

5)



$$10 \times 9 \times 8 = 720$$

$$5 \times 9 \times 1 = 45$$

Risposte

1. 260 cm³

2. 402 cm³

3. 736 cm³

4. 298 cm³

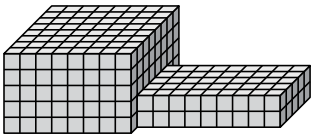
5. 765 cm³



Trova il volume totale di ogni figura. La misura è in cm (non in scala).

Risposte

1)



1. _____

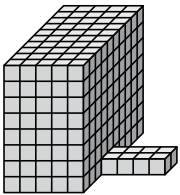
2. _____

3. _____

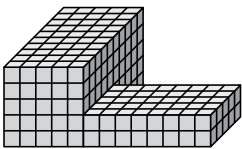
4. _____

5. _____

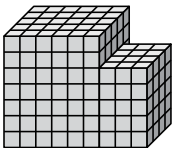
2)




3)



4)



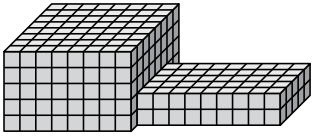
5)





Trova il volume totale di ogni figura. La misura è in cm (non in scala).

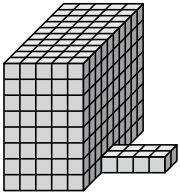
1)



$$8 \times 8 \times 5 = 320$$

$$9 \times 5 \times 2 = 90$$

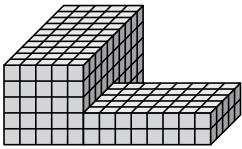
2)



$$5 \times 10 \times 8 = 400$$

$$4 \times 2 \times 1 = 8$$

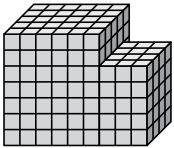
3)



$$5 \times 10 \times 5 = 250$$

$$8 \times 5 \times 2 = 80$$

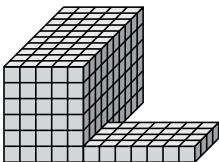
4)



$$6 \times 5 \times 7 = 210$$

$$3 \times 4 \times 5 = 60$$

5)



$$5 \times 10 \times 6 = 300$$

$$7 \times 4 \times 1 = 28$$

Risposte

1. 410 cm³

2. 408 cm³

3. 330 cm³

4. 270 cm³

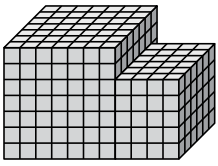
5. 328 cm³



Trova il volume totale di ogni figura. La misura è in cm (non in scala).

Risposte

1)



1. _____

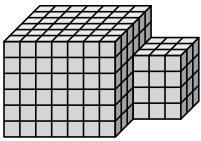
2. _____

3. _____

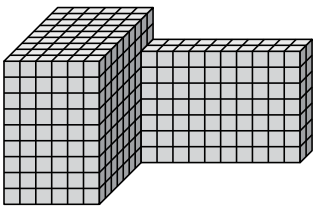
4. _____

5. _____

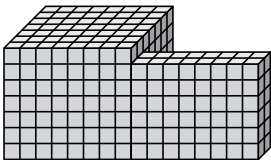
2)



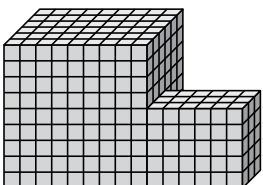
3)



4)

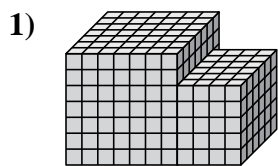


5)



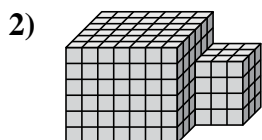


Trova il volume totale di ogni figura. La misura è in cm (non in scala).



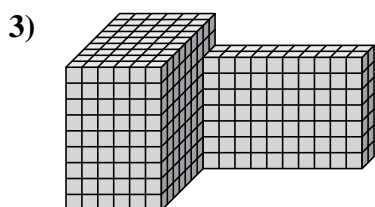
$$7 \times 7 \times 7 = 343$$

$$4 \times 6 \times 5 = 120$$



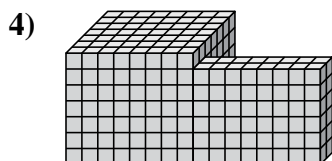
$$7 \times 6 \times 6 = 252$$

$$3 \times 3 \times 4 = 36$$



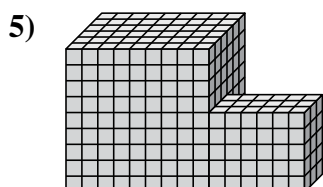
$$6 \times 9 \times 9 = 486$$

$$10 \times 2 \times 7 = 140$$



$$8 \times 7 \times 7 = 392$$

$$8 \times 2 \times 6 = 96$$



$$9 \times 6 \times 9 = 486$$

$$6 \times 3 \times 5 = 90$$

Risposte

1. 463 cm³

2. 288 cm³

3. 626 cm³

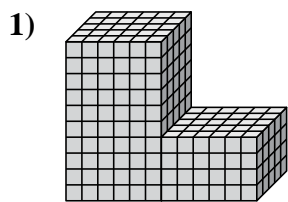
4. 488 cm³

5. 576 cm³



Trova il volume totale di ogni figura. La misura è in cm (non in scala).

Risposte



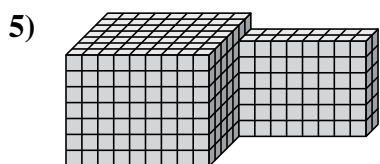
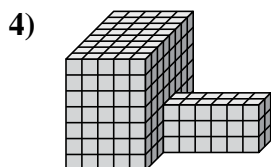
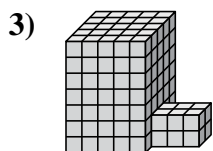
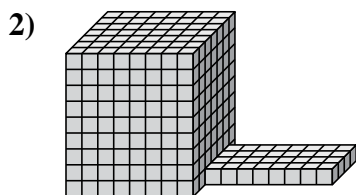
1. _____

2. _____

3. _____

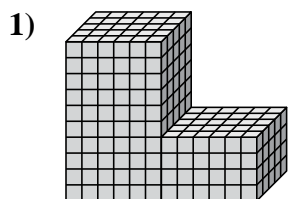
4. _____

5. _____



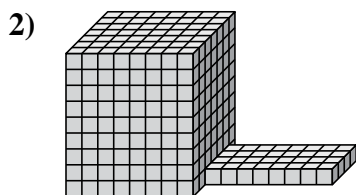


Trova il volume totale di ogni figura. La misura è in cm (non in scala).



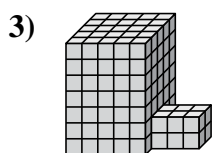
$$6 \times 5 \times 10 = 300$$

$$6 \times 5 \times 4 = 120$$



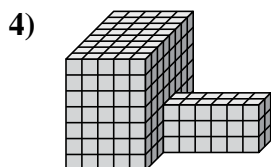
$$8 \times 7 \times 9 = 504$$

$$8 \times 4 \times 1 = 32$$



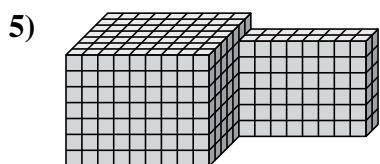
$$5 \times 5 \times 7 = 175$$

$$3 \times 2 \times 2 = 12$$



$$5 \times 8 \times 7 = 280$$

$$6 \times 2 \times 3 = 36$$



$$9 \times 7 \times 7 = 441$$

$$8 \times 2 \times 6 = 96$$

Risposte

1. 420 cm³

2. 536 cm³

3. 187 cm³

4. 316 cm³

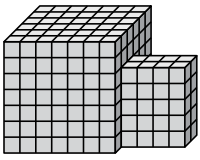
5. 537 cm³



Trova il volume totale di ogni figura. La misura è in cm (non in scala).

Risposte

1)



1. _____

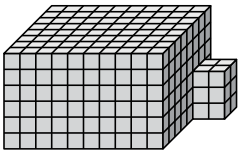
2. _____

3. _____

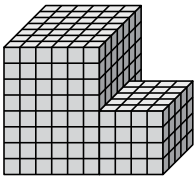
4. _____

5. _____

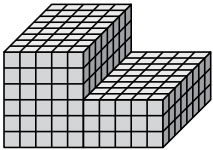
2)



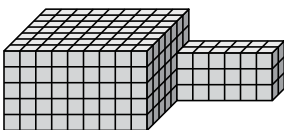
3)



4)



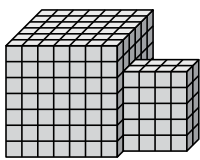
5)





Trova il volume totale di ogni figura. La misura è in cm (non in scala).

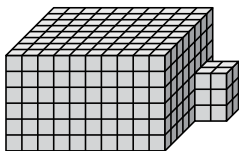
1)



$$7 \times 6 \times 7 = 294$$

$$4 \times 2 \times 5 = 40$$

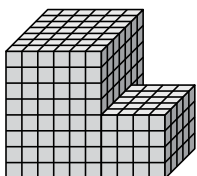
2)



$$10 \times 8 \times 6 = 480$$

$$2 \times 2 \times 3 = 12$$


3)



$$6 \times 7 \times 8 = 336$$

$$4 \times 5 \times 4 = 80$$

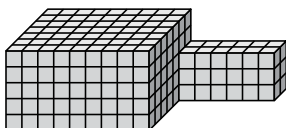
4)



$$5 \times 8 \times 6 = 240$$

$$5 \times 8 \times 3 = 120$$

5)



$$9 \times 7 \times 5 = 315$$

$$6 \times 2 \times 3 = 36$$

Risposte

1. 334 cm³

2. 492 cm³

3. 416 cm³

4. 360 cm³

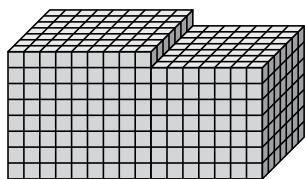
5. 351 cm³



Trova il volume totale di ogni figura. La misura è in cm (non in scala).

Risposte

1)



1. _____

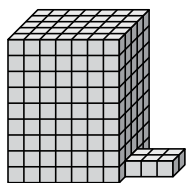
2. _____

3. _____

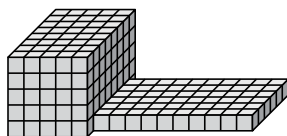
4. _____

5. _____

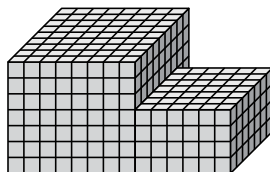
2)



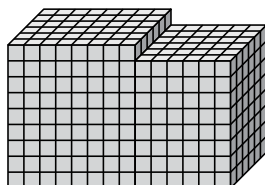
3)



4)



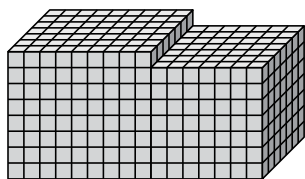
5)





Trova il volume totale di ogni figura. La misura è in cm (non in scala).

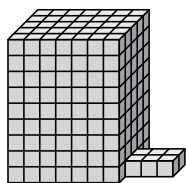
1)



$$9 \times 7 \times 8 = 504$$

$$7 \times 7 \times 7 = 343$$

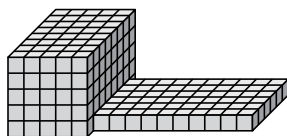
2)



$$7 \times 5 \times 9 = 315$$

$$3 \times 2 \times 1 = 6$$

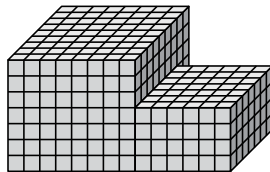
3)



$$5 \times 8 \times 5 = 200$$

$$10 \times 6 \times 1 = 60$$

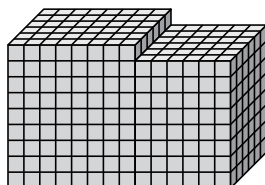
4)



$$8 \times 9 \times 7 = 504$$

$$6 \times 7 \times 4 = 168$$

5)



$$8 \times 6 \times 9 = 432$$

$$6 \times 6 \times 8 = 288$$

Risposte

1. 847 cm³

2. 321 cm³

3. 260 cm³

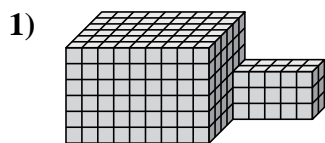
4. 672 cm³

5. 720 cm³



Trova il volume totale di ogni figura. La misura è in cm (non in scala).

Risposte



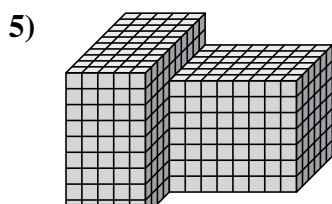
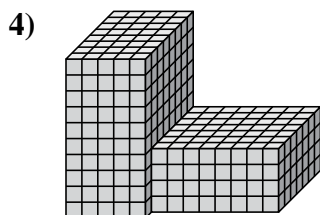
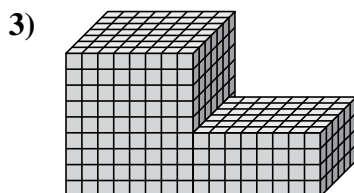
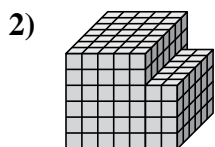
1. _____

2. _____

3. _____

4. _____

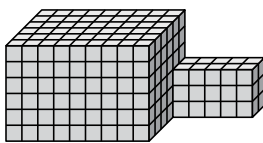
5. _____





Trova il volume totale di ogni figura. La misura è in cm (non in scala).

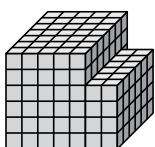
1)



$$9 \times 6 \times 6 = 324$$

$$5 \times 2 \times 3 = 30$$

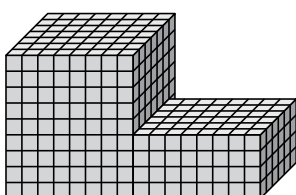
2)



$$5 \times 7 \times 6 = 210$$

$$2 \times 6 \times 4 = 48$$

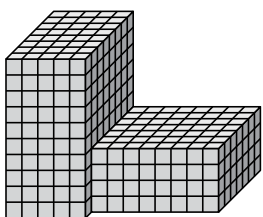
3)



$$8 \times 7 \times 9 = 504$$

$$8 \times 6 \times 4 = 192$$

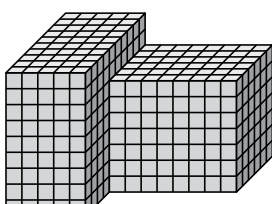
4)



$$5 \times 8 \times 10 = 400$$

$$8 \times 7 \times 4 = 224$$

5)



$$5 \times 10 \times 9 = 450$$

$$8 \times 6 \times 7 = 336$$

Risposte

1. 354 cm³

2. 258 cm³

3. 696 cm³

4. 624 cm³

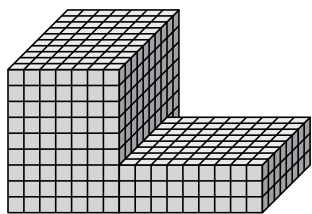
5. 786 cm³



Trova il volume totale di ogni figura. La misura è in cm (non in scala).

Risposte

1)



1. _____

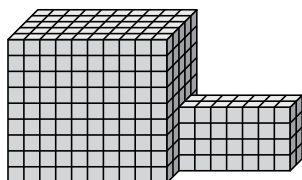
2. _____

3. _____

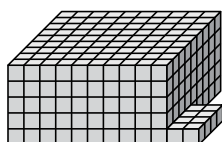
4. _____

5. _____

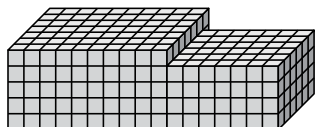
2)



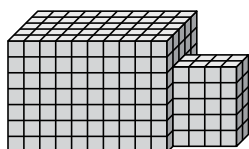
3)



4)



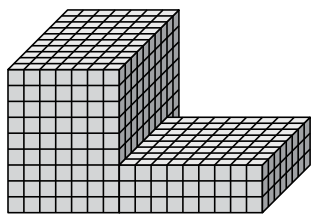
5)





Trova il volume totale di ogni figura. La misura è in cm (non in scala).

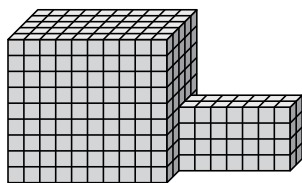
1)



$$7 \times 10 \times 9 = 630$$

$$9 \times 8 \times 3 = 216$$

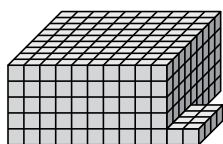
2)



$$10 \times 5 \times 9 = 450$$

$$7 \times 2 \times 4 = 56$$

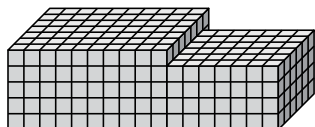
3)



$$10 \times 9 \times 5 = 450$$

$$2 \times 4 \times 1 = 8$$

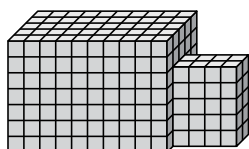
4)



$$10 \times 7 \times 5 = 350$$

$$7 \times 6 \times 4 = 168$$

5)



$$10 \times 5 \times 7 = 350$$

$$4 \times 2 \times 5 = 40$$

Risposte

1. 846 cm³

2. 506 cm³

3. 458 cm³

4. 518 cm³

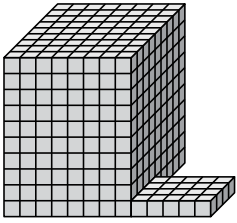
5. 390 cm³



Trova il volume totale di ogni figura. La misura è in cm (non in scala).

Risposte

1)



1. _____

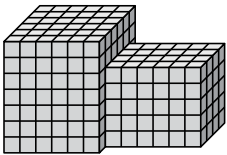
2. _____

3. _____

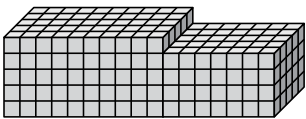
4. _____

5. _____

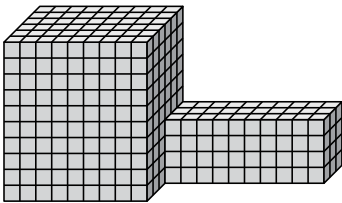
2)



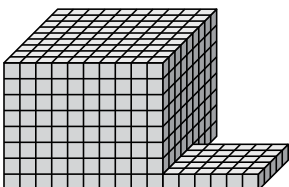
3)



4)



5)

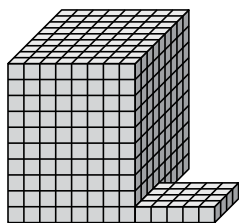




Trova il volume totale di ogni figura. La misura è in cm (non in scala).

Risposte

1)

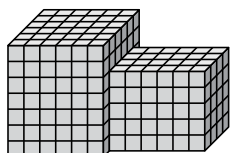


$$8 \times 9 \times 10 = 720$$

$$5 \times 4 \times 1 = 20$$

1. 740 cm³

2)

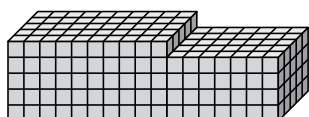


$$6 \times 6 \times 7 = 252$$

$$6 \times 4 \times 5 = 120$$

2. 372 cm³

3)

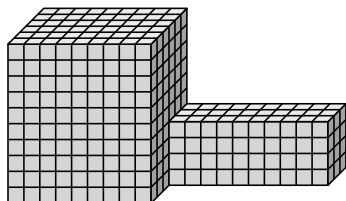


$$10 \times 5 \times 5 = 250$$

$$7 \times 5 \times 4 = 140$$

3. 390 cm³

4)

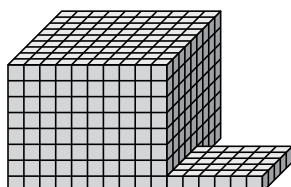


$$9 \times 6 \times 10 = 540$$

$$10 \times 3 \times 4 = 120$$

4. 660 cm³

5)



$$10 \times 9 \times 8 = 720$$

$$6 \times 5 \times 1 = 30$$

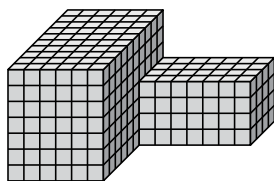
5. 750 cm³



Trova il volume totale di ogni figura. La misura è in cm (non in scala).

Risposte

1)



1. _____

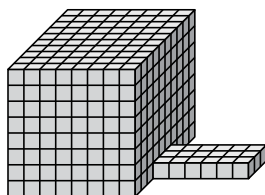
2. _____

3. _____

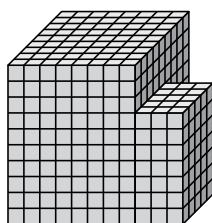
4. _____

5. _____

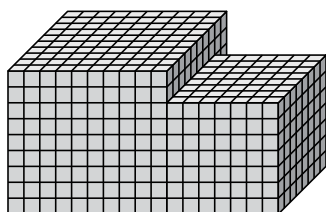
2)



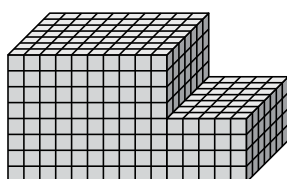
3)



4)



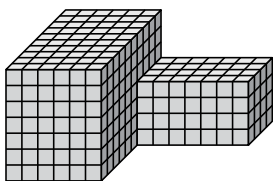
5)





Trova il volume totale di ogni figura. La misura è in cm (non in scala).

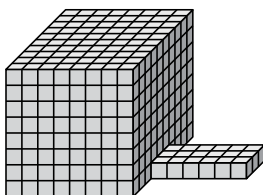
1)



$$6 \times 10 \times 7 = 420$$

$$7 \times 4 \times 4 = 112$$

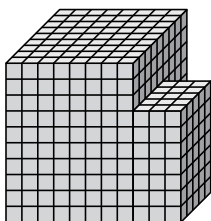
2)



$$8 \times 10 \times 8 = 640$$

$$6 \times 3 \times 1 = 18$$

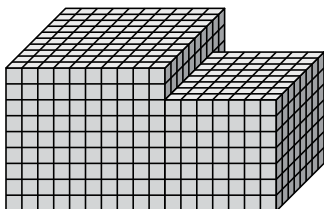
3)



$$8 \times 9 \times 10 = 720$$

$$3 \times 5 \times 7 = 105$$

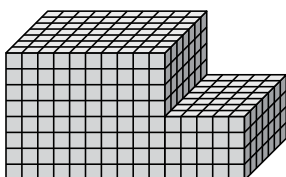
4)



$$10 \times 10 \times 9 = 900$$

$$7 \times 8 \times 7 = 392$$

5)



$$10 \times 7 \times 8 = 560$$

$$5 \times 7 \times 4 = 140$$

Risposte

1. 532 cm³

2. 658 cm³

3. 825 cm³

4. 1292 cm³

5. 700 cm³