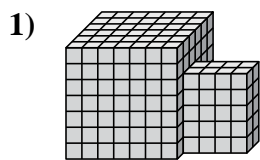




Trova il volume totale di ogni figura. La misura è in cm (non in scala).

Risposte



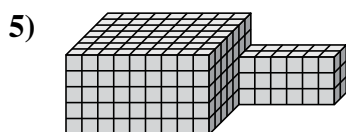
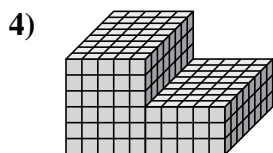
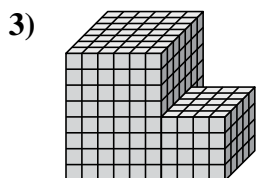
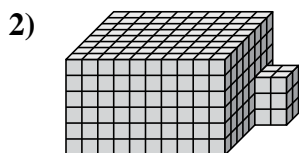
1. _____

2. _____

3. _____

4. _____

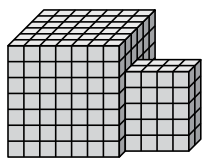
5. _____





Trova il volume totale di ogni figura. La misura è in cm (non in scala).

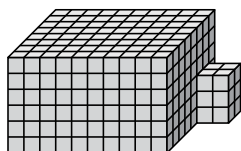
1)



$$7 \times 6 \times 7 = 294$$

$$4 \times 2 \times 5 = 40$$

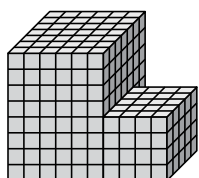
2)



$$10 \times 8 \times 6 = 480$$

$$2 \times 2 \times 3 = 12$$


3)



$$6 \times 7 \times 8 = 336$$

$$4 \times 5 \times 4 = 80$$

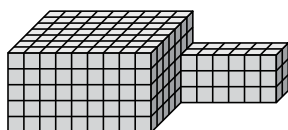
4)



$$5 \times 8 \times 6 = 240$$

$$5 \times 8 \times 3 = 120$$

5)



$$9 \times 7 \times 5 = 315$$

$$6 \times 2 \times 3 = 36$$

Risposte

1. 334 cm³

2. 492 cm³

3. 416 cm³

4. 360 cm³

5. 351 cm³