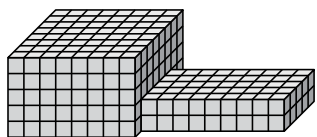




Trova il volume totale di ogni figura. La misura è in cm (non in scala).

Risposte

1)



1. _____

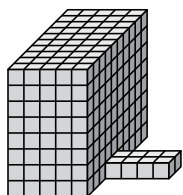
2. _____

3. _____


4. _____

5. _____

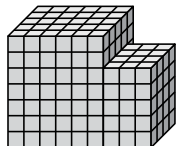
2)



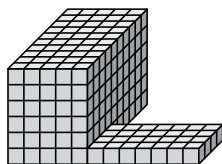
3)



4)



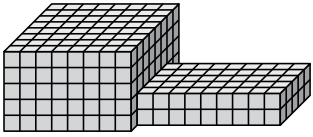
5)





Trova il volume totale di ogni figura. La misura è in cm (non in scala).

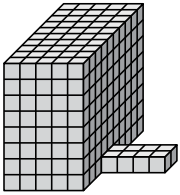
1)



$$8 \times 8 \times 5 = 320$$

$$9 \times 5 \times 2 = 90$$

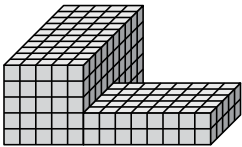
2)



$$5 \times 10 \times 8 = 400$$

$$4 \times 2 \times 1 = 8$$

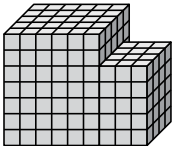
3)



$$5 \times 10 \times 5 = 250$$

$$8 \times 5 \times 2 = 80$$

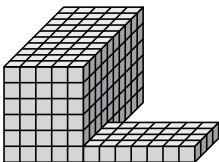
4)



$$6 \times 5 \times 7 = 210$$

$$3 \times 4 \times 5 = 60$$

5)



$$5 \times 10 \times 6 = 300$$

$$7 \times 4 \times 1 = 28$$

Risposte

1. 410 cm³

2. 408 cm³

3. 330 cm³

4. 270 cm³

5. 328 cm³