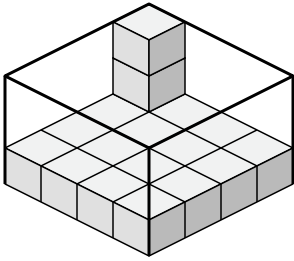


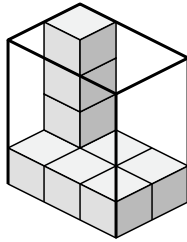


Crea un'espressione per determinare il volume di ogni scatola.

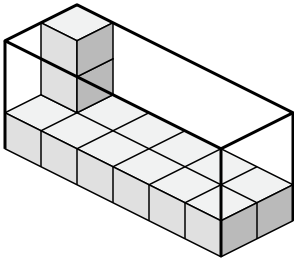
1)



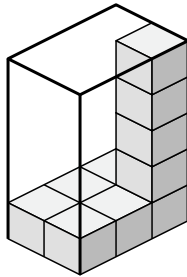
2)



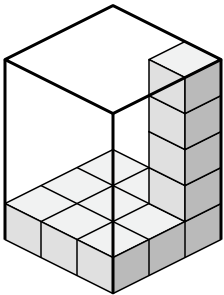
3)



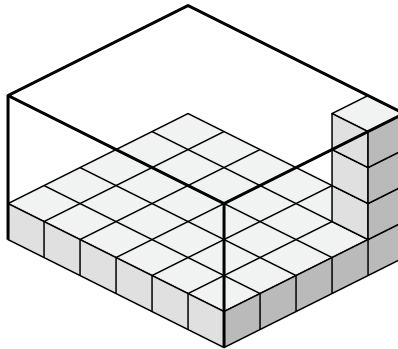
4)



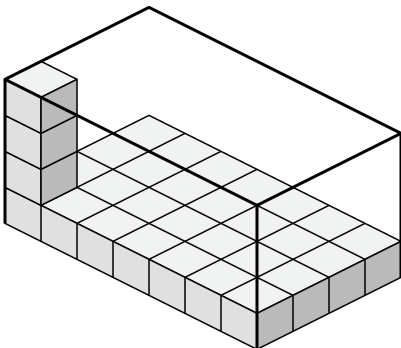
5)



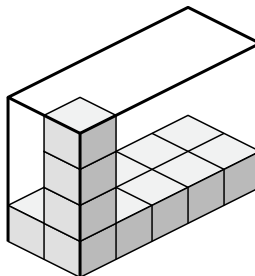
6)



7)



8)



Risposte

1. _____

2. _____

3. _____

4. _____

5. _____

6. _____

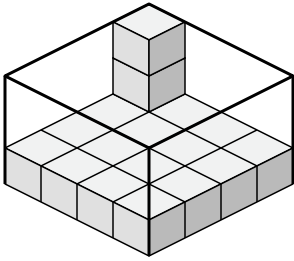
7. _____

8. _____

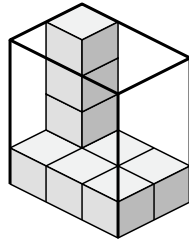


Crea un'espressione per determinare il volume di ogni scatola.

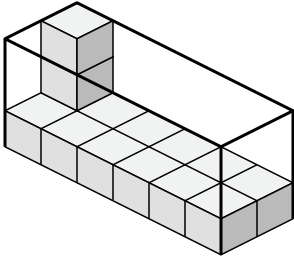
1)



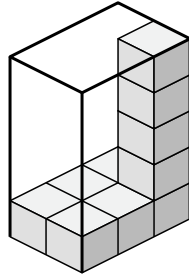
2)



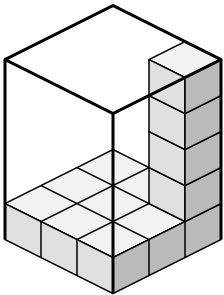
3)



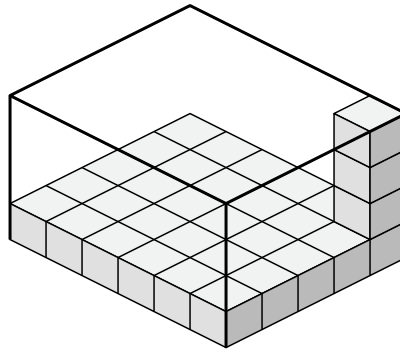
4)



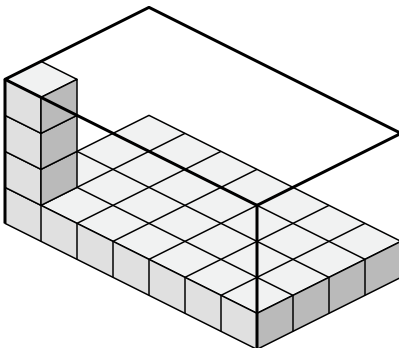
5)



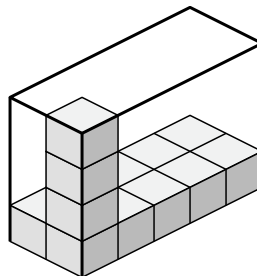
6)



7)



8)



Risposte

1. 4x4x3

2. 3x2x4

3. 6x2x3

4. 2x3x5

5. 3x3x5

6. 6x5x4

7. 7x4x4

8. 2x5x4