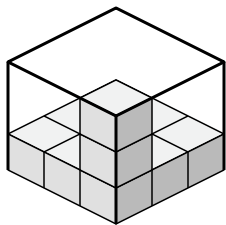


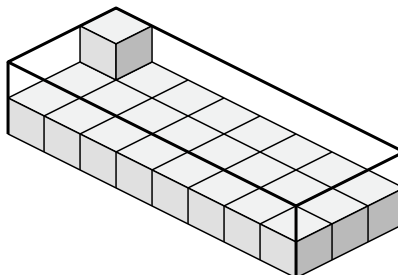


Crea un'espressione per determinare il volume di ogni scatola.

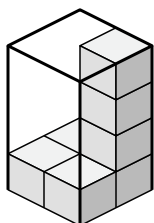
1)



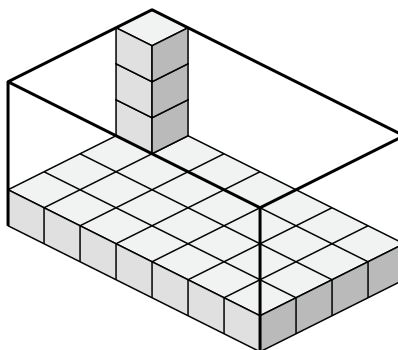
2)



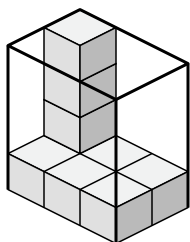
3)



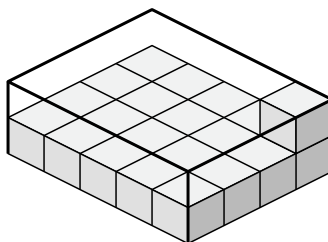
4)



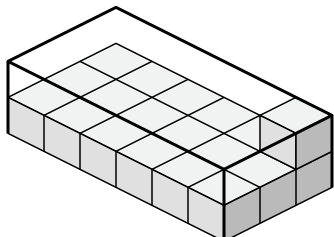
5)



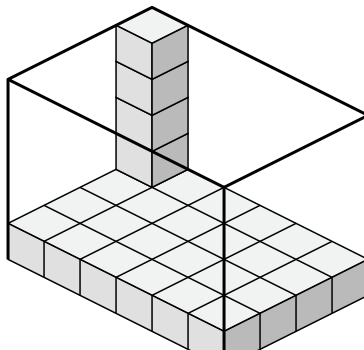
6)



7)



8)



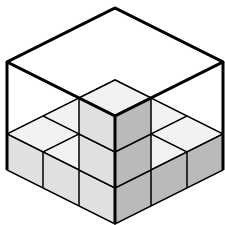
**Risposte**

- 1. \_\_\_\_\_
- 2. \_\_\_\_\_
- 3. \_\_\_\_\_
- 4. \_\_\_\_\_
- 5. \_\_\_\_\_
- 6. \_\_\_\_\_
- 7. \_\_\_\_\_
- 8. \_\_\_\_\_

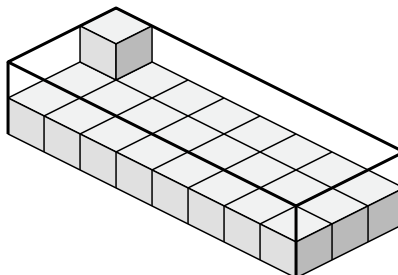


Crea un'espressione per determinare il volume di ogni scatola.

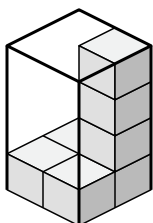
1)



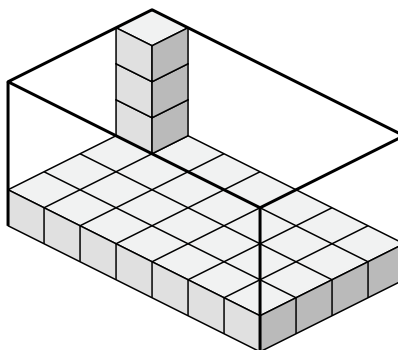
2)



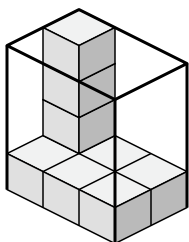
3)



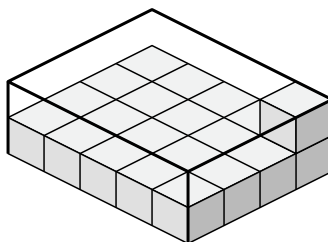
4)



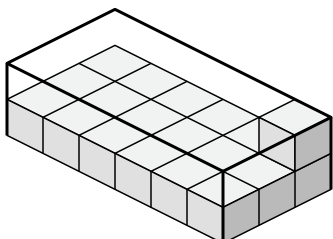
5)



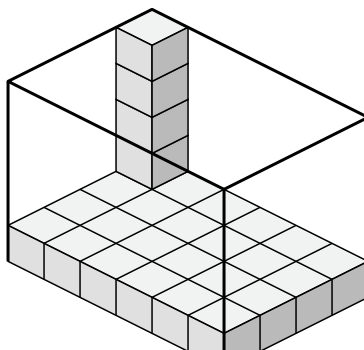
6)



7)



8)

**Risposte**

1.  $3 \times 3 \times 3$

2.  $8 \times 3 \times 2$

3.  $2 \times 2 \times 4$

4.  $7 \times 4 \times 4$

5.  $3 \times 2 \times 4$

6.  $5 \times 4 \times 2$

7.  $6 \times 3 \times 2$

8.  $6 \times 4 \times 5$