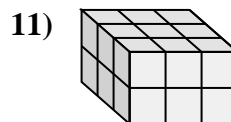
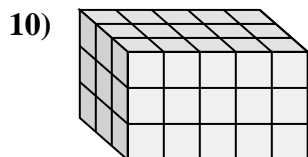
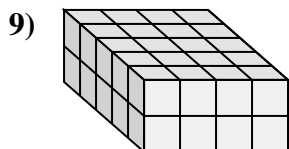
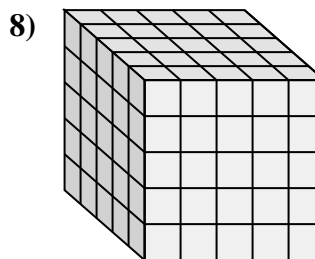
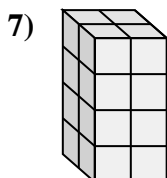
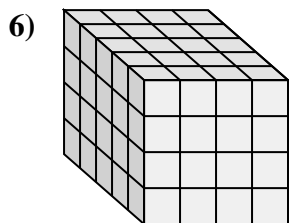
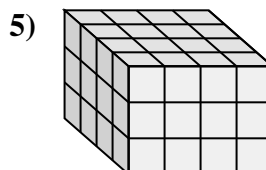
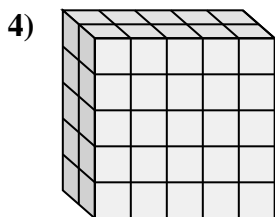
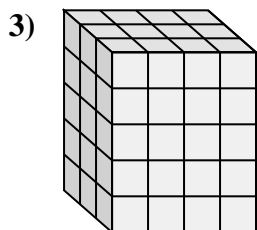
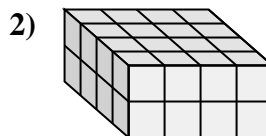
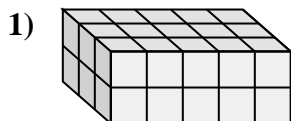
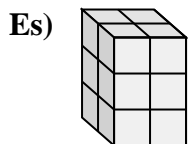




Collega ogni problema con l'equazione che potrebbe rappresentarlo. Rispondi con il termine e la lettera mancanti.



Risposte

Es. D, 12

1. F, 5

2. I, 2

3. K, 5

4. H, 5

5. A, 4

6. L, 5

7. G, 2

8. B, 5

9. J, 5

10. C, 3

11. E, 3

A. $__ \times 4 \times 3 = 48$

B. $__ \times 5 \times 5 = 125$

C. $__ \times 5 \times 3 = 45$

D. $2 \times 2 \times 3 = __$

E. $3 \times __ \times 2 = 18$

F. $3 \times __ \times 2 = 30$

G. $2 \times __ \times 4 = 16$

H. $2 \times 5 \times __ = 50$

I. $4 \times 4 \times __ = 32$

J. $__ \times 4 \times 2 = 40$

K. $3 \times 4 \times __ = 60$

L. $__ \times 4 \times 4 = 80$